

Biyani's Think Tank

*Concept based notes*

# Mathematics & Statistics


*BCA IV Sem.*

**Mr. Rahul Agarwal, Mr. Sachin Bagoria**

Asst. Professor

Dept. of IT

Biyani Girls College, Jaipur



*Published by :*

**Think Tanks**

**Biyani Group of Colleges**

*Concept & Copyright :*

**©Biyani Shikshan Samiti**

Sector-3, Vidhyadhar Nagar,

Jaipur-302 023 (Rajasthan)

Ph: 0141-2338371, 2338591-95 Fax: 0141-2338007

E-mail : [acad@biyanicolleges.org](mailto:acad@biyanicolleges.org)

Website : [www.gurukpo.com](http://www.gurukpo.com); [www.biyanicolleges.org](http://www.biyanicolleges.org)

**ISBN : 978-93-83462-24-7**

**Edition: 2025**

While every effort is taken to avoid errors or omissions in this Publication, any mistake or omission that may have crept in is not intentional. It may be taken note of that neither the publisher nor the author will be responsible for any damage or loss of any kind arising to anyone in any manner on account of such errors and omissions.

*Leaser Type Setted by :*

**Biyani College Printing Department**

## **Preface**

I am glad to present this book, especially designed to serve the needs of the students. The book has been written keeping in mind the general weakness in understanding the fundamental concepts of the topics. The book is self-explanatory and adopts the “Teach Yourself” style. It is based on question-answer pattern. The language of book is quite easy and understandable based on scientific approach.

Any further improvement in the contents of the book by making corrections, omission and inclusion is keen to be achieved based on suggestions from the readers for which the author shall be obliged.

I acknowledge special thanks to Mr. Rajeev Biyani, *Chairman* & Dr. Sanjay Biyani, *Director (Acad.)* Biyani Group of Colleges, who are the backbones and main concept provider and also have been constant source of motivation throughout this Endeavour. They played an active role in coordinating the various stages of this Endeavour and spearheaded the publishing work.

I look forward to receiving valuable suggestions from professors of various educational institutions, other faculty members and students for improvement of the quality of the book. The reader may feel free to send in their comments and suggestions to the under mentioned address.

**Author**

# Syllabus

## UNIT – I

**Sets :** Definition of sets, representation of sets, type of sets, Operations on sets, Sub sets, Power set, Universal set, Complement of a set, Union and Intersection of two sets, Venn diagrams, Principles of Inclusion and Exclusion.

**Relations:** Cartesian product of sets, Definition of relation, Types of relations- reflexive, symmetric, anti-symmetric, transitive, equivalence.

**Functions:** Definition, Domain & Range of functions, one to one and onto functions, Objective functions, composite functions, inverse of functions.

## UNIT – II

**Logic and Proofs :** Proposition, Conjunction, Disjunction, Negation, Compound proposition, De Morgan's laws, Tautology and Contradiction.

**Matrices:** Definition and Types of Matrices, Addition , Subtraction and Multiplication of Matrices, Non- commutativity of multiplication of matrices, Scalar Multiplication, Transpose of a Matrix.

**Determinant:** Determinant of a square matrix (up to 3x3 matrices), properties of determinants, minors , cofactors, expansion of determinants, application of determinants in finding the area of a triangle. Adjoin and Inverse of a matrix, Solution of system of linear equations by Cramer's Rule.

## UNIT –III

**Statistics:** Data collection methods, Data classification, Frequency Distribution, Graphical representation of frequency distribution. **Measures of Central Tendency-** Mean, Median, Mode, Measures of Dispersion- Mean Deviations, Standard Deviations, Variance

## UNIT –IV

**Correlation Analysis:** Correlation, Types of Correlations, Methods of Studying Correlations, Measure of Karl Pearson's coefficient of correlation, Rank Correlation Coefficient.

**Regression Analysis:** Regression, Use of regression analysis,, Difference between Correlation and Regression Analysis, Regression Lines Equations, Properties of regression lines.



## Unit 1

### Functions, Limits and Continuity

#### Very Short Questions

**Q.1.** If  $f(x) = \sqrt{25 - x^2}$ , find the value of  $f(3)$ ,  $f(-4)$ .

**Ans.**  $f(3) = \sqrt{25 - 3^2} = \sqrt{25 - 9} = \sqrt{16} = 4$

$$f(-4) = \sqrt{25 - (-4)^2} = \sqrt{25 - 16} = \sqrt{9} = 3$$

**Q.2.** If  $f(x) = e^x$ , prove that  $f(x+y) = f(x) \cdot f(y)$

**Ans.**  $f(x) = e^x$

$$f(x+y) = e^{x+y} \Rightarrow e^x \cdot e^y \Rightarrow f(x) \cdot f(y)$$

**Q.3.** Evaluate  $\lim_{x \rightarrow 1} x^2 + 3x + 3$

$$= 1^2 + 3 \cdot 1 + 3$$

$$= 1 + 3 + 3 = 7$$

**Q.4.** Examine the continuity of the function  $f(x) = 2x^2 - 1$  at  $x = 3$

**Ans.** The given function is  $f(x) = 2x^2 - 1$

$$\text{at } x = 3, f(x) = f(3) = 2 \times 3^2 - 1 = 17$$

$$\lim_{x \rightarrow 3} f(x) = \lim_{x \rightarrow 3} (2x^2 - 1) = 2 \times 3^2 - 1 = 17$$

$$\therefore \lim_{x \rightarrow 3} f(x) = f(3)$$

Thus  $f$  is continuous at  $x = 3$

**Q.5.** Find the domain of

$$f(x) = \frac{x}{\dots}$$

---

Ans.  $f(x)$  will be undefined if  $3x - 4 = 0$  or  $x = \frac{4}{3}$  so domain of  $f = R \setminus \left\{\frac{4}{3}\right\}$

Q.6. The equation  $y = (x)$ , with  $y \geq 0$ , represent  $y$  as function of  $x$ .

Ans. Yes

Q.7. The equation  $x = |y|$ , with  $x \geq 0$ , represent  $y$  as a function of  $x$ .

Ans. False, solve for  $y$  to find that  $y = |x|$  or  $y = -|x|$  for one value of the independent variable  $x$  we have two values of the dependent variable  $y$ .

Q.8.  $R$  be the set of real number. If  $f: R \rightarrow R, f(x) = x^2$  &  $g: R \rightarrow R, g(x) = 2x + 1$  then find  $f \circ g$  &  $g \circ f$  show that  $f \circ g \neq g \circ f$ .

Ans. We know that  $g \circ f(x) = g[f(x)]$

$$\Rightarrow g(x^2) = 2(x^2) + 1 = 2x^2 + 1 \text{ [since } g(x) = 2x + 1]$$

$$\text{and } f \circ g = f[g(x)]$$

$$\Rightarrow f(2x + 1) = (2x + 1)^2 \text{ [since } f(x) = x^2]$$

Q.9. Let  $A = \{1, 2, 3, 4\}, B = \{a, b, c, d\}, C = \{x, y, z\}$  consider the function  $f: A \rightarrow B$  and  $g: B \rightarrow C$  defined by

$$f = \{(1, a), (2, c), (3, b), (4, a)\}$$

$$g = \{(a, x), (b, x), (c, y), (d, y)\}.$$

Find  $g \circ f$

Sol.  $(g \circ f)(1) = g(f(1)) = g(a) = x$

$$(g \circ f)(2) = g(f(2)) = g(c) = y$$

$$(g \circ f)(3) = g(f(3)) = g(b) = x$$

$$(g \circ f)(4) = g(f(4)) = g(a) = x$$

$$\text{so } g \circ f = \{(1, x), (2, y), (3, x), (4, x)\}$$

Q.10. Find:  $\lim_{x \rightarrow 1} 4x^2 + 3x + 2$ .

Sol. Here

i.e. LHL at 'a' =  $f(a)$  = RHL at 'a'

**Q.15. Evaluate**  $\lim_{x \rightarrow 0} \frac{x}{\sqrt{1+x}} - 1$

**Solution :** (Rationalizing)

$$\lim_{x \rightarrow 0} \frac{x}{\sqrt{1+x}-1} \times \frac{\sqrt{1+x}+1}{\sqrt{1+x}+1}$$

$$\lim_{x \rightarrow 0} \frac{x(\sqrt{1+x}+1)}{1+x-1} = \lim_{x \rightarrow 0} (\sqrt{1+x}+1) \\ = 1+1=2$$

**Q.16. Define the following function.**

(i) Identify function

(ii) Constant function

(iii) Logarithm function

(iv) Hyperbolic function

**Ans.** (i)  $f(x) = x$                       (ii)  $f(x) = c$   
(iii)  $f(x) = \log x$                       (iv)  $f(x) = \sin hx$

**Q.17. Evaluate**

$$\lim_{x \rightarrow \infty} \left( \frac{1+2+3+\dots+n}{n^2} \right) \\ = \lim_{x \rightarrow \infty} \frac{n(n+1)}{2n^2} \\ = \lim_{x \rightarrow \infty} \left( \frac{(n+1)}{2n} \right) = \lim_{x \rightarrow \infty} \frac{1}{2} \left( 1 + \frac{1}{n} \right) \\ = \frac{1}{2}$$

**Q.18. Evaluate the given limit**  $\lim_{x \rightarrow 0} \frac{\sin ax}{\sin bx}$ ,  $a, b \neq 0$

**Ans.**  $\lim_{x \rightarrow 0} \frac{\sin ax}{\sin bx}$ ,  $a, b \neq 0$

divide & multiply numerator by ax

divide & multiply denominator by  $bx$ .

$$\begin{aligned} &= \frac{\sin ax}{ax} \cdot ax \\ \lim_{x \rightarrow 0} \frac{\frac{\sin ax}{ax} \cdot ax}{\frac{\sin bx}{bx} \cdot bx} \\ &= \frac{a}{b} \lim_{x \rightarrow 0} \left( \frac{\sin ax}{ax} \right) \\ &\quad \frac{b \lim_{x \rightarrow 0} \left( \frac{\sin bx}{bx} \right)}{b \lim_{x \rightarrow 0} \left( \frac{\sin bx}{bx} \right)} \\ &= \frac{a}{b} \times \frac{1}{1} \\ &= \frac{a}{b} \end{aligned}$$

$$\begin{cases} x \rightarrow 0 \Rightarrow ax \rightarrow 0 \\ x \rightarrow 0 \Rightarrow bx \rightarrow 0 \end{cases}$$

$$\left[ \lim_{\theta \rightarrow 0} \frac{\sin \theta}{\theta} = 1 \right]$$

**Q.19. Evaluate the given limit**

$$\lim_{x \rightarrow 1} \frac{ax^2 + bx + c}{cx^2 + bx + a}, \quad a + b + c \neq 0$$

**Ans.**  $\frac{a(1)^2 + b(1) + c}{c(1)^2 + b(1) + a} = \frac{a + b + c}{a + b + c} = 1$

**Q.20. Evaluate given limit**

$$\begin{aligned} \lim_{x \rightarrow 0} \frac{ax + b}{cx + 1} &= \frac{a(0) + b}{c(0) + 1} \\ &= b \end{aligned}$$

**Q.21. If  $f(2) = 4$  and  $f'(2) = 1$ , then find.**

$$\lim_{x \rightarrow 2} \frac{xf(2) - 2f(x)}{x - 2}$$

**Solution:**  $\lim_{x \rightarrow 2} \frac{xf(2) - 2f(x)}{x - 2}$

$$\lim_{x \rightarrow 2} \frac{xf(2) - 2f(x) + 2f(2) - 2f(2)}{x - 2}$$

[add and subtract  $2f(2)$  in numerator]

$$= \lim_{x \rightarrow 2} \frac{xf(2) - 2f(2) + 2f(2) - 2f(x)}{(x-2)}$$

[Rearrange  $2f(2)$ ]

$$= \lim_{x \rightarrow 2} \frac{[f(2)(x-2) - 2(f(2) - f(x))]}{x-2}$$

[take  $f(2)$  common take 2 common]

$$= \lim_{x \rightarrow 2} \frac{(x-2)f(2)}{x-2} - \lim_{x \rightarrow 2} \frac{f(x) - f(2)}{x-2}$$

$$= f(2) - 2f'(2) \quad \left[ \because f'(2) = \lim_{x \rightarrow 2} \frac{f(x) - f(2)}{x-2} \right]$$

$$= 4 - 2 \times 1 \quad [\because f(2) = 4 \text{ and } f'(2) = 1 \text{ from ques.}]$$

$$= 2$$

**Q.22. Explain the continuity of the function.**

$$f(x) = \begin{cases} \frac{|\sin x|}{x}, & x \neq 0 \\ 1, & x = 0 \end{cases}$$

$$f(0) = 1$$

$$\lim_{n \rightarrow 0} f(0+n) = \lim_{n \rightarrow 0} \frac{|\sin(0+n)|}{0+n} = \lim_{n \rightarrow 0} \frac{\sin n}{n} = 1$$

$$\lim_{n \rightarrow 0} f(0-n) = \lim_{n \rightarrow 0} \frac{|\sin(0-n)|}{0-n} = \lim_{n \rightarrow 0} \frac{\sin n}{-n} = -1$$

$$f(0) = f(0+n) \neq f(0-n)$$

$$1 = 1 \neq -1$$

$f(x)$  is not continuous.

**Q.23. Show that  $f(x) = x^2$  is continuous**

at  $x = 3$

$$f(x) = x^2$$

$$f(3) = 3^2 = 9$$

$$\lim_{n \rightarrow 0} f(3+n) = \lim_{n \rightarrow 0} (3+n)^2 = \lim_{n \rightarrow 0} (9 + n^2 + 6n) = 9$$

$$\lim_{n \rightarrow 0} f(3-n) = \lim_{n \rightarrow 0} (3-n)^2 = \lim_{n \rightarrow 0} (9 + n^2 - 6n) = 9$$

$$\therefore f(x) = f(x+n) = f(x-n) = 9$$

$$\therefore f(x) \text{ is continuous at } x = 3.$$

**Q.24. Show that  $\lim_{x \rightarrow 0} \frac{x}{|x|}$  does not exist**

**Sol.**  $f(o) = o$

$$\lim_{n \rightarrow 0} f(o+n) = \frac{o+n}{|o+n|} = \lim_{n \rightarrow 0} \frac{h}{h} = \lim_{n \rightarrow 0} 1 = 1$$

$$\lim_{n \rightarrow 0} f(o-n) = \frac{o-n}{|o-n|} = \lim_{n \rightarrow 0} \frac{-n}{n} = -1$$

$$\therefore f(o) \neq f(o+n) \neq f(o-n)$$

$$f(x) \text{ is not continuous.}$$

## Short Questions

**Q.1 Find the range of  $f(x) = \frac{2+x}{2-x}$**

**Sol.**  $f(x) = y$

$$\frac{2+x}{2-x} = y$$

$$2+x = y(2-x) \Rightarrow 2+x = 2y-xy \Rightarrow x+xy = 2y-2$$

$$x(1+y) = 2(y-1) \Rightarrow x = \frac{2(y-1)}{y+1}$$

$$x \text{ will be undefined if } y+1 = 0, y = -1$$

$$\therefore \text{Range of } f = R - \{-1\}$$



**Q. 2 :** Let  $A = \{-2, -1, 0, 1, 2\}$  and  $B = \{0, 1, 2, 3, 4, 5\}$  A function is defined from set A to set B. If  $f(x) = x^2$ . find the domain, co-domain and range of the function.

**Sol. :**  $f(-2) = (-2)^2 = 4$

$$f(-1) = (-1)^2 = 1$$

$$f(0) = (0)^2 = 0$$

$$f(1) = 1^2 = 1$$

$$f(2) = 2^2 = 4$$

Here, domain =  $A = \{-2, -1, 0, 1, 2\}$

co-domain =  $\{0, 1, 2, 3, 4, 5\}$

range =  $\{0, 1, 4\}$

**Q. 3 :** A function  $F : \mathbb{R} \rightarrow \mathbb{R}$  defined as  $f(x) = 5x - 3$  find its inverse.

**Sol. :** Let's consider

$$y = f(x) \Rightarrow x = f^{-1}(y)$$

$$\Rightarrow y = 5x - 3$$

$$\Rightarrow 5x = y + 3$$

$$\Rightarrow x = (y + 3)/5 \Rightarrow f^{-1}(y) = \frac{y + 3}{5}$$

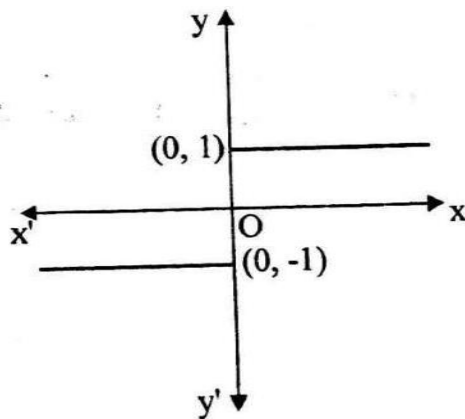
**Q. 4. What is signum function ?**

**Sol. Signum function :-** The function is defined by

$$f(x) = \begin{cases} \frac{|x|}{x}, & \text{if } x \neq 0 \\ 0, & \text{if } x = 0 \end{cases}$$

$$\text{or } f(x) = \begin{cases} 1, & \text{if } x > 0 \\ 0, & \text{if } x = 0 \\ -1, & \text{if } x < 0 \end{cases}$$

Domain =  $\mathbb{R}$  and Range =  $\{-1, 0, 1\}$ .



**Q. 5 : What is reciprocal function ?**

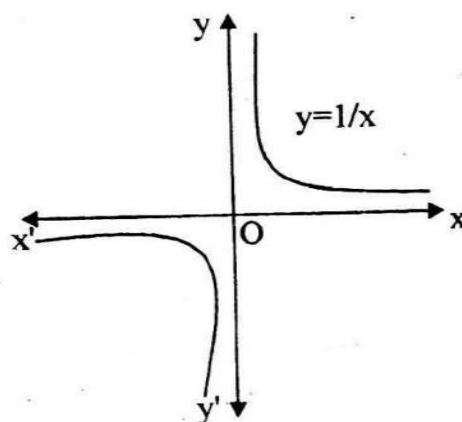
**Sol. : Reciprocal function :-**

The function defined by  $f(x) = \frac{1}{x}$  is called the reciprocal function.

The function is not defined for  $x = 0$ .

Domain =  $R - \{0\}$  and Range

Also, .



**Q. 6 : What is modulus function ?**

**Sol. : Modulus function :-**

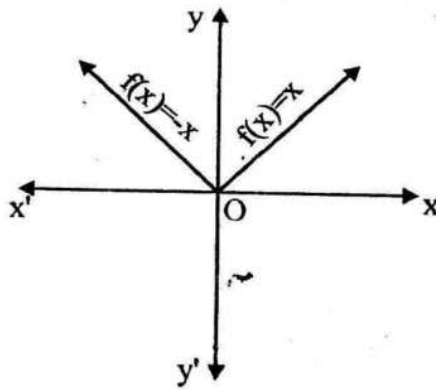
A function is called the modulus function if defined by

$$f(x) = |x| = \begin{cases} x, & \text{if } x \geq 0 \\ -x, & \text{When } x < 0 \end{cases}$$

We can say that modulus of every number is a non-negative real number, so

Domain =  $R$  and Range = non-negative real numbers.





**Q.7:** Evaluate  $\lim_{x \rightarrow 1} \frac{x^3 - 1}{x - 1}$

**Sol.:** Here

$$\begin{aligned} & \lim_{x \rightarrow 1} \frac{x^3 - 1}{x - 1} \quad \left( \frac{0}{0} \text{ form} \right) \\ &= \lim_{x \rightarrow 1} \frac{(x-1)(x^2 + x + 1)}{(x-1)} \\ &= \lim_{x \rightarrow 1} (x^2 + x + 1) \\ &= (1^2 + 1 + 1) \\ &= 3 \end{aligned}$$

**Q.8:** Evaluate  $\lim_{x \rightarrow 2} \frac{x^2 + 2x - 8}{x^2 + x - 6}$

**Sol:** Here  $\lim_{x \rightarrow 2} \frac{x^2 + 2x - 8}{x^2 + x - 6} \quad \left( \frac{0}{0} \text{ form} \right)$

$$\begin{aligned} &= \lim_{x \rightarrow 2} \frac{(x-2)(x+4)}{(x-2)(x+3)} \\ &= \lim_{x \rightarrow 2} \frac{(x+4)}{(x+3)} \end{aligned}$$

$$= \frac{2+4}{2+3} = \frac{6}{5}$$

$$9: \lim_{x \rightarrow \infty} \frac{\sqrt{x^2+1}}{x+1}$$

$$\therefore \lim_{x \rightarrow \infty} \frac{\frac{\sqrt{x^2+1}}{x}}{\frac{x+1}{x}}$$

(divide both numerator and denominator by  $x$ )

$$\lim_{x \rightarrow \infty} \frac{\frac{\sqrt{x^2+1}}{x^2}}{\frac{x+1}{x}}$$

( $x$  equals to  $\sqrt{x^2}$ )

$$\lim_{x \rightarrow \infty} \frac{\sqrt{\frac{x^2}{x^2} + \frac{1}{x^2}}}{\frac{x}{x} + \frac{1}{x}}$$

$$\lim_{x \rightarrow \infty} \frac{1 + \sqrt{\frac{1}{x^2}}}{1 + \frac{1}{x}}$$

$$\frac{\sqrt{1 + \frac{1}{\infty^2}}}{1 + \frac{1}{\infty}} \Rightarrow \frac{\sqrt{1+0}}{1+0} = 1 \left[ \because \frac{1}{\infty} = 0 \right]$$

**Q. 9 :** Find all the points of discontinuity of  $f$ , where  $f$  is defined by

$$f(x) = \begin{cases} \frac{x}{|x|}, & \text{if } x < 0 \\ -1, & \text{if } x \geq 0 \end{cases}$$

**Sol. :** The given function is  $f(x) = \begin{cases} \frac{x}{|x|}, & \text{if } x < 0 \\ -1, & \text{if } x \geq 0 \end{cases}$

∴ We know that  $x < 0 \Rightarrow |x| = -x$

∴ The given function can be written as

$$f(x) = \begin{cases} \frac{x}{|x|} = \frac{x}{-x} = -1, & \text{if } x < 0 \\ -1, & \text{if } x \geq 0 \end{cases}$$

$$\Rightarrow f(x) = -1 \text{ for all } x \in R$$

let C be any real number. Then  $\lim_{x \rightarrow c} f(x) = \lim_{x \rightarrow c} f(x) = -1$

$$\text{Also } f(c) = -1 = \lim_{x \rightarrow c} f(x)$$

∴ function is continuous.

**Q. 10. Evaluate**  $\lim_{x \rightarrow 0} \frac{e^x - 1}{x}$

$$\text{Sol. : } \lim_{x \rightarrow 0} \frac{e^x - 1}{x} = \lim_{x \rightarrow 0} \frac{\left[ 1 + x + \frac{x^2}{2!} + \frac{x^3}{3!} + \dots - 1 \right]}{x} \quad [\text{used expansion of } e^x]$$

$$= \lim_{x \rightarrow 0} \frac{x + \frac{x^2}{2!} + \frac{x^3}{3!} + \dots}{x} \quad [\text{cut 1 and } -1]$$

take x common from numerator

$$= \lim_{x \rightarrow 0} \frac{x \left[ 1 + \frac{x}{2!} + \frac{x^2}{3!} + \dots \right]}{x}$$

$$= \lim_{x \rightarrow 0} 1 + \frac{x}{2!} + \frac{x^2}{3!} + \dots \quad [\text{cut } x \text{ in numerator \& denominator}]$$

Put the limit

$$= 1$$

**Q.11 Determine the value of k for following function is continuous at  $x = 1$**

$$f(x) = \begin{cases} x, & 0 \leq x < 1 \\ K - 2x, & 1 \leq x \leq 2 \end{cases}$$

$$\text{Sol. : } f(1-0) = f(1+0) = f(1)$$

f is continuous at  $x = 1$

$$f(1) = K - 2$$

LHL at  $x = 1$

$$\lim_{n \rightarrow 0} f(1-n) = \lim_{n \rightarrow 0} (1-n) = 1$$

$$f(1-0) = 1$$

For continuity  $K - 2 = 1 \Rightarrow K = 3$

12. Show that  $f(x) = x^2$  is differentiable at  $x = 1$  and find  $f'(1)$

Sol. : We have,

$$(\text{L.H.D. at } x=1) = \lim_{x \rightarrow 1} \frac{f(x) - f(1)}{x - 1}$$

$$(\text{LHD}) \text{ at } x = 1 = \lim_{h \rightarrow 0} \frac{f(1-n) - f(1)}{1 - h - 1}$$

$$= \lim_{h \rightarrow 0} \frac{f(1-n)^2 - 1^2}{-h} = \lim_{h \rightarrow 0} \frac{-2n + n^2}{-h}$$

$$= \lim_{n \rightarrow 0} 2 - n = 2$$

and (RHD at  $x = 1$ )

$$= \lim_{x \rightarrow 1} \frac{f(x) - f(1)}{x - 1} = \lim_{h \rightarrow 0} \frac{f(1+n) - f(1)}{1 + h - 1}$$

$$= \lim_{h \rightarrow 0} \frac{f(1+n)^2 - 1}{h} = \lim_{h \rightarrow 0} \frac{2n + n^2}{h}$$

$$= \lim_{h \rightarrow 0} 2 + h = 2$$

$$(\text{L.H.D. at } x = 1) = (\text{RHD at } x = 1) = 2$$

So,  $f(x)$  is differentiable at  $x = 1$  and  $f'(1) = 2$

Q. 13 Check the continuity of the following function

$$f(x) = \begin{cases} \frac{e^{1/x}}{1 + e^{1/x}}, & x \neq 0 \\ 0, & x = 0 \end{cases} \quad \text{at } x = 0$$

$$f(x) = 0, f(x+n) = \left( \frac{e^{1/(x+n)}}{1 + e^{1/(x+n)}} \right)$$

$$\lim_{h \rightarrow 0} f(x+n) = \lim_{h \rightarrow 0} \frac{e^{1/(x+n)}}{e^{1/(x+n)}} \left\{ \frac{1}{e^{1/(x+n)} + 1} \right\}$$

$$= \lim_{h \rightarrow 0} \left[ \frac{1}{e^{-1/n} + 1} \right] = \frac{1}{0+1} = \boxed{1}$$

$$\begin{aligned} \lim_{n \rightarrow 0} f(x-n) &= \lim_{h \rightarrow 0} \left[ \frac{e^{1/(x-n)}}{1 + e^{1/(x-n)}} \right] = \lim_{n \rightarrow 0} \left[ \frac{e^{-1/n}}{1 + e^{-1/n}} \right] \\ &= \frac{0}{1+0} = \boxed{0} \end{aligned}$$

$$f(x) = 0$$

$$f(x+n) = 1 \Rightarrow f(x) \neq f(x-n) = f(x-n)$$

$$f(x-n) = 1$$

$\Rightarrow$  function is discontinuous

**Q.14 Prove that**

$$f(x) = \begin{cases} x-1, & \text{if } 1 \leq x \leq 2 \\ 2x-3, & \text{if } 2 \leq x \leq 3 \end{cases} \quad \text{Parth publication exercise, Ques.}$$

**is continuous at  $x=2$**

**Sol.**

$$f(x) = x-1$$

$$f(x+n) = 2x-3$$

$$f(2) = 2-1$$

$$\lim_{n \rightarrow 0} f(2+n) = \lim_{n \rightarrow 0} 2(2+n) - 3$$

$$f(2) = 1$$

$$= \lim_{n \rightarrow 0} 4 + 2n - 3$$

$$= \lim_{n \rightarrow 0} 4 + 2n - 3$$

$$f(2+0) = \lim_{n \rightarrow 0} 1 + 2n = 1$$

$$f(x-n) = x-1$$

$$\lim_{n \rightarrow 0} f(2-n) = \lim_{n \rightarrow 0} (2-n) - 1$$

$$\lim_{n \rightarrow 0} f(2-n) = \lim_{n \rightarrow 0} 2 - n - 1$$

$$= \lim_{n \rightarrow 0} 1 = h = 1$$

$$f(x) = f(x+n) = f(x-n)$$

$\therefore$  function is continuous

**Q. 15 Evaluate**  $\lim_{x \rightarrow a} \frac{\sqrt{x} + \sqrt{a}}{x + a}$

$$= \frac{\sqrt{a} + \sqrt{a}}{a + a} = \frac{2\sqrt{a}}{2a}$$

$$= \frac{\sqrt{a}}{a}$$

$$= \frac{1}{\sqrt{a}}$$

**Q. 16 Evaluate the left hand limit and right hand limit of function given below:**

$$f(x) = \begin{cases} |x-5|, & \text{if } x \neq 5 \\ x-5, & \\ 0, & \text{if } x = 5 \end{cases} \text{ at } x = 5.$$

**Solution:** Left hand limit (LHL) at  $x = 5$

$$= \lim_{x \rightarrow 5^-} f(x)$$

$$= \lim_{h \rightarrow 0} f(5-h)$$

$$= \lim_{h \rightarrow 0} \frac{|5-h-5|}{5-h-5} = \lim_{h \rightarrow 0} \frac{|-h|}{-h}$$

$$= \lim_{h \rightarrow 0} \frac{h}{-h} = \lim_{h \rightarrow 0} -1 = -1$$

Right hand limit (RHL) at  $x = 5$

$$= \lim_{x \rightarrow 5^+} f(x)$$

$$= \lim_{h \rightarrow 0} f(5+h)$$

$$= \lim_{h \rightarrow 0} \frac{|5 + h - 5|}{5 + h - 5} = \lim_{h \rightarrow 0} \frac{|h|}{h}$$

$$= \lim_{h \rightarrow 0} \frac{h}{h} = \lim_{h \rightarrow 0} 1 = 1.$$

**Q. 17** If  $f(x) = \begin{cases} 5x - 4, & 0 < x \leq 1 \\ 4x^3 - 3x, & 1 < x < 2 \end{cases}$  show that  $\lim_{x \rightarrow 1} f(x)$  exist.

**So.:** Left hand limit (LHL) at  $x = 1$

$$\begin{aligned} \lim_{x \rightarrow 1^-} f(x) &= \lim_{h \rightarrow 0} f(1-h) \\ &= \lim_{h \rightarrow 0} 5(1-h) - 4 = \lim_{h \rightarrow 0} 5 - 5h - 4 \\ &= \lim_{h \rightarrow 0} 1 - 5h \\ &= 1 - 5(0) \quad (\text{using limit}) \\ &= 1 \end{aligned}$$

Now,

Right hand limit (RHL) at  $x = 1$

$$\begin{aligned} \lim_{x \rightarrow 1^+} f(x) &= \lim_{h \rightarrow 0} f(1+h) \\ &= \lim_{h \rightarrow 0} 4(1+h)^3 - 3(1+h) \\ &= 4 - 3 = 1 \end{aligned}$$

Here

$$\begin{aligned} \lim_{x \rightarrow 1^+} f(x) &= \lim_{x \rightarrow 1^-} f(x) \\ (\text{L.H.L} &= \text{R.H.L}) \end{aligned}$$

So  $\lim_{x \rightarrow 1}$  exists at  $x = 1$

**Q. 18** Show that  $\lim_{x \rightarrow 0} \frac{e^{1/x} - 1}{e^{1/x} + 1}$  does not exist.

$$\begin{aligned}
 \lim_{x \rightarrow 0^-} f(x) &= \lim_{h \rightarrow 0} f(0-h) \\
 &= \lim_{h \rightarrow 0} \frac{e^{-1/h} - 1}{e^{-1/h} + 1} \\
 &= \lim_{h \rightarrow 0} \left( \frac{\frac{1}{e^{1/h}} - 1}{\frac{1}{e^{1/h}} + 1} \right) \text{ using } \left( a^{-x} = \frac{1}{a^x} \right)
 \end{aligned}$$

$$\left[ \begin{array}{l} h \rightarrow 0 \Rightarrow \frac{1}{h} \rightarrow \infty \\ \text{So, } e^{1/h} \rightarrow \infty \Rightarrow \frac{1}{e^{1/h}} \rightarrow 0 \end{array} \right]$$

Right hand limit (RHL) at  $x = 0$

$$\begin{aligned}
 \lim_{x \rightarrow 0} f(x) &= \lim_{h \rightarrow 0} f(0+h) = \lim_{h \rightarrow 0} \frac{e^{1/h} - 1}{e^{1/h} + 1} \\
 &= \lim_{h \rightarrow 0} \left( \frac{1 - \frac{1}{e^{1/h}}}{1 + \frac{1}{e^{1/h}}} \right)
 \end{aligned}$$

(Dividing numerator and denominator by  $e^{1/h}$ )

$$\begin{aligned}
 &= \frac{1-0}{1+0} \\
 &= 1
 \end{aligned}$$

it is clear that  $\lim_{x \rightarrow 0^-} f(x) \neq \lim_{x \rightarrow 0} f(x)$

i.e.  $LHL \neq RHL$

So,  $\lim_{x \rightarrow 0} f(x)$  does not exist.

**Q. 19 A**  $f(x)$  be a function defined by  $f(x) = \begin{cases} 4x-5, & \text{if } x \leq 1 \\ 2x-\lambda, & \text{if } x > 1 \end{cases}$  Find



$$f(x) = \begin{cases} 4x - 5, & \text{if } x \leq 1 \\ 2x - \lambda, & \text{if } x > 1 \end{cases}$$

Now,

Left hand limit (LHL) at  $x=1$

$$\begin{aligned} \lim_{x \rightarrow 1^-} f(x) &= \lim_{h \rightarrow 0} f(1-h) \\ &= \lim_{h \rightarrow 0} 4(1-h) - 5 \\ &= \lim_{h \rightarrow 0} (-1-4h) = -1 \end{aligned}$$

Right hand limit (RHL) at  $x=1$

$$\begin{aligned} \lim_{x \rightarrow 1^+} f(x) &= \lim_{h \rightarrow 0} f(1+h) \\ &= \lim_{h \rightarrow 0} 2(1+h) - \lambda \\ &= (2 - \lambda) \end{aligned}$$

Since  $\lim_{x \rightarrow 1} f(x)$  exists, So

$$\text{LHL} = \text{RHL}$$

$$\begin{aligned} \lim_{x \rightarrow 1^-} f(x) &= \lim_{x \rightarrow 1^+} f(x) \\ \Rightarrow 1 &= 2 - \lambda \quad \Rightarrow \quad \lambda = 1 \end{aligned}$$

**Q. 20 Evaluate**  $\lim_{x \rightarrow 1} \frac{x^2 - \sqrt{x}}{\sqrt{x} - 1}$

**Sol:-** Here  $\lim_{x \rightarrow 1} \frac{x^2 - \sqrt{x}}{\sqrt{x} - 1} \quad \left( \frac{0}{0} \text{ form} \right)$

$$= \lim_{x \rightarrow 1} \frac{x^2 - \sqrt{x}}{\sqrt{x} - 1} \times \frac{x^2 + \sqrt{x}}{x^2 + \sqrt{x}}$$

$$= \lim_{x \rightarrow 1} \frac{x^4 - x}{(\sqrt{x} - 1)(x^2 + \sqrt{x})} \quad \left( \frac{0}{0} \text{ form} \right)$$

$$= \lim_{x \rightarrow 1} \frac{x(x^3 - 1)}{(\sqrt{x} - 1)(x^2 + \sqrt{x})} \quad \left( \frac{0}{0} \text{ form} \right)$$

$$= \lim_{x \rightarrow 1} \frac{x(x-1)(x^2 + x + 1)}{(\sqrt{x} - 1)(x^2 + \sqrt{x})} \quad \left( \frac{0}{0} \text{ form} \right)$$

$$\left[ \because a^3 - b^3 = (a - b)(a^2 + ab + b^2) \right]$$

$$= \lim_{x \rightarrow 1} \frac{x(\sqrt{x} + 1)(x^2 + x + 1)}{(x^2 + \sqrt{x})} = \frac{1(1+1)(1+1+1)}{(1+1)} = \frac{2(3)}{2}$$

$$= 3$$

**Q. 21 Test the continuity of the function  $f(x)$  at the origin:**

$$f(x) = \begin{cases} \frac{x}{|x|}, & \text{when } x \neq 0 \\ 1, & \text{when } x = 0 \end{cases}$$

**Sol.** Here  $f(x) = \begin{cases} \frac{x}{|x|}, & \text{when } x \neq 0 \\ 1, & \text{when } x = 0 \end{cases}$

So,  $f(0) = 1$ . (Using the value of the function)

Now,

RHL at  $x = 0$

$$\begin{aligned} & \lim_{x \rightarrow 0^+} f(x) \\ &= \lim_{h \rightarrow 0} f(0 + h) \\ &= \lim_{h \rightarrow 0} \frac{h}{|h|} \\ &= \lim_{h \rightarrow 0} \frac{h}{h} \\ &= 1. \end{aligned}$$

LHL at  $x = 0$

$$\begin{aligned}
 & \lim_{x \rightarrow 0^-} f(x) \\
 &= \lim_{h \rightarrow 0} f(0-h) \\
 &= \lim_{h \rightarrow 0} \frac{-h}{|h|} \\
 &= \lim_{h \rightarrow 0} \frac{-h}{h} \\
 &= -1.
 \end{aligned}$$

**Now here**  $f(x) = \lim_{x \rightarrow 0^+} f(x) \neq \lim_{x \rightarrow 0^-} f(x)$

**and therefore,**  $\lim_{x \rightarrow 0} f(x)$  does not exist.

So,  $f(x)$  is discontinuous at  $x=0$ .

**Q. 22 Show that the exponential function is continuous.**

**Sol:** Let's consider  $f(x) = e^x$

Now,

RHL at  $h = 0$

$$\begin{aligned}
 & \lim_{h \rightarrow 0^+} f(x) \\
 &= \lim_{h \rightarrow 0^+} f(x+h) \\
 &= \lim_{h \rightarrow 0} e^{(x+h)} \\
 &= \lim_{h \rightarrow 0} e^x \cdot e^h \\
 &= e^x \cdot e^0 \quad (\because e^0 = 1) \\
 &= e^x \cdot 1 \\
 &= e^x
 \end{aligned}$$

LHL at  $h = 0$

$$\begin{aligned}
 & \lim_{h \rightarrow 0^-} f(x) \\
 &= \lim_{h \rightarrow 0} f(x-h)
 \end{aligned}$$

$$\begin{aligned}
 &= \lim_{h \rightarrow 0} f(x-h) = \lim_{h \rightarrow 0} e^{x-h} \\
 &= \lim_{h \rightarrow 0} e^x \cdot e^{-h} = \lim_{h \rightarrow 0} \frac{e^x}{e^h} \\
 &= \frac{e^x}{e^0} = \frac{e^x}{1} = e^x
 \end{aligned}$$

$$\text{Hence } f(x) = \lim_{h \rightarrow 0^+} f(x) = \lim_{h \rightarrow 0^-} f(x)$$

So, Exponential function is continuous.

## Long Questions

**Q.1 Differentiate following by first principle method.**

I.  $f(x) = 1/x$

$$\frac{dy}{dx} = \frac{f(x+\delta x) - f(x)}{\delta x}$$

$$= \frac{\frac{1}{x+\delta x} - \frac{1}{x}}{\delta x}$$

$$= \frac{\frac{x - (x+\delta x)}{x(x+\delta x)}}{\delta x}$$

$$= \frac{-\delta x}{x(x+\delta x)\delta x}$$

$$= \frac{-1}{(x+\delta x)x}$$

In the limit as  $\delta x \rightarrow 0$  this becomes

$$\frac{dy}{dx} = -\frac{1}{x^2}$$

So the derivative of  $y = \frac{1}{x}$  with respect to  $x$  is  $-\frac{1}{x^2}$

OR

Q.1. Evaluate  $\lim_{x \rightarrow 1} \frac{x^2 - \sqrt{x}}{\sqrt{x} - 1}$

Parth publication page no. 2.9

**Differentiate using first principles**

$$y = x^2 + 2x + 3$$

let  $f(x) = x^2 + 2x + 3$

so  $f(x + \delta x) = (x + \delta x)^2 + 2(x + \delta x) + 3$

expanding and simplifying gives

$$f(x + \delta x) = x^2 + 2x\delta x + \delta x^2 + 2x + 2\delta x + 3$$

We have everything we need to substitute into the formula for differentiation from first principles.

$$\frac{dy}{dx} = \lim_{\delta x \rightarrow 0} \frac{f(x + \delta x) - f(x)}{\delta x}$$

Substituting in the first principles formula gives:

$$\frac{dy}{dx} = \lim_{\delta x \rightarrow 0} \left( \frac{(\cancel{x^2} + 2x\delta x + \delta x^2 + \cancel{2x} + 2\delta x + \cancel{3}) - (\cancel{x^2} + \cancel{2x} + \cancel{3})}{\delta x} \right)$$

We notice that Everything in the 2<sup>nd</sup> bracket will cancel out with the first bracket.

**This will Always be the case!!!**

$$\frac{dy}{dx} = \lim_{\delta x \rightarrow 0} \left( \frac{2x\delta x + \delta x^2 + 2\delta x}{\delta x} \right)$$

Notice that the top has a **Common factor** of  $\delta x$ .

So factorise the top and cancel  $\delta x$

**This will Always be the case!!!!**

$$\frac{dy}{dx} = \lim_{\delta x \rightarrow 0} \left( \frac{\cancel{\delta x}(2x + \delta x + 2)}{\cancel{\delta x}} \right)$$

$$\frac{dy}{dx} = \lim_{\delta x \rightarrow 0} \left( \frac{2x + \delta x + 2}{1} \right)$$

$$\frac{dy}{dx} = \lim_{\delta x \rightarrow 0} (2x + \delta x + 2)$$

Now the **important final stage** is to find the limit as  $\delta x \rightarrow 0$

$$\frac{dy}{dx} = 2x + 2$$

**Q.2. Show that the function  $f(x)$  given by**

$$f(x) = \begin{cases} \lim_{x \rightarrow 0} \frac{e^{1/x} - 1}{e^{1/x} + 1}, & \text{if } x \neq 0 \\ 0, & \text{if } x = 0 \end{cases}$$

**is discontinuous at  $x = 0$ .**

**Sol.:** Given

$$f(x) = \begin{cases} \lim_{x \rightarrow 0} \frac{e^{1/x} - 1}{e^{1/x} + 1}, & \text{if } x \neq 0 \\ 0, & \text{if } x = 0 \end{cases}$$

Now,  $f(x) = 0$

Here, Now we find, Left hand limit (LHL) at  $x = 0$

$$\begin{aligned} & \lim_{x \rightarrow 0^-} f(x) \\ &= \lim_{h \rightarrow 0} f(0 - h) \\ &= \lim_{h \rightarrow 0} \frac{e^{-1/h} - 1}{e^{-1/h} + 1} \\ &= \lim_{h \rightarrow 0} \left( \frac{\frac{1}{e^{1/h}} - 1}{\frac{1}{e^{1/h}} + 1} \right) \text{ using } \left( a^{-x} = \frac{1}{a^x} \right) \end{aligned}$$

$$\left[ \begin{array}{l} h \rightarrow 0 \Rightarrow \frac{1}{h} \rightarrow \infty \\ \text{So, } e^{1/h} \rightarrow \infty \Rightarrow \frac{1}{e^{1/h}} \rightarrow 0 \end{array} \right]$$

$$= -1$$

**Right hand limit (RHL) at  $x = 0$**

$$\lim_{x \rightarrow 0} f(x) = \lim_{h \rightarrow 0} f(0+h) = \lim_{h \rightarrow 0} \frac{e^{1/h} - 1}{e^{1/h} + 1}$$

$$= \lim_{h \rightarrow 0} \left( \frac{1 - \frac{1}{e^{1/h}}}{1 + \frac{1}{e^{1/h}}} \right)$$

(Dividing numerator and denominator by  $e^{1/h}$ )

$$= \frac{1-0}{1+0}$$

$$= 1$$

it is clear that  $f(x) \neq \lim_{x \rightarrow 0^-} f(x) \neq \lim_{x \rightarrow 0} f(x)$

So,  $f(x)$  is not continuous at  $x = 0$ .

**Q.3 Find  $\frac{dy}{dx}$  from first principles if  $y = 2x^2 + 3x$ .**

**Find the slope of the tangent where  $x = 1$  and also where  $x = -6$ .**

**Sol.** Now  $f(x) = x^2 + 4x$

So  $f(x+h) = (x+h)^2 + 4(x+h)$

$$= x^2 + 2xh + h^2 + 4x + 4h$$

Therefore

$$\frac{dy}{dx} = \lim_{h \rightarrow 0} \frac{f(x+h) - f(x)}{h}$$

$$= \lim_{h \rightarrow 0} \frac{[(x+h)^2 + 4(x+h)] - [x^2 + 4x]}{h}$$

$$= \lim_{h \rightarrow 0} \frac{[x^2 + 2xh + h^2 + 4x + 4h] - [x^2 + 4x]}{h}$$

$$= \lim_{h \rightarrow 0} \frac{2xh + h^2 + 4h}{h}$$



$$-\lim_{h \rightarrow 0} (2x + h + 4) = -2x + 4$$

OR

3. Prove that the following  $f(x) = |x| + |x-1|$  is continuous at  $x=0, 1$  but not differentiable.

sol.  $f(x) = |x| + |x-1|$

$$f(x) = \begin{cases} 1-2x, & x < 0 \\ 1, & 0 \leq x < 1 \\ 2x-1, & x \geq 1 \end{cases}$$

$$x=0 \quad f(0) = 1$$

$$f(o+n) = 1 \text{ and } f(o-n) = 1 - 2(o-n) = 1 + 2h$$

$$RHL = \lim_{n \rightarrow 0} f(o+n) = \lim_{n \rightarrow 0} (1) = 1$$

$$LHL = \lim_{n \rightarrow 0} f(o-n) = \lim_{n \rightarrow 0} (1 + 2h) = 1$$

$$f(o) = RHL = LHL$$

Hence function is continuous at  $x = 0$

$$Rf'(o) = \lim_{n \rightarrow 0} \frac{f(o+n) - f(o)}{h} = \lim_{n \rightarrow 0} \left( \frac{1-1}{n} \right) = 0$$

$$Lf'(o) = \lim_{n \rightarrow 0} \frac{f(o-n) - f(o)}{-h}$$

$$= \lim_{n \rightarrow 0} \frac{(1 + 2n - 1)}{-h}$$

$$= -2$$

$$Rf'(o) \neq Lf'(o)$$

Hence function is not differentiable at  $x=0$

Again at  $x=1 \quad f(1) = 2-1=1$

$$f(1+h) = 2(1+n) - 1 = 1 + 2n \text{ and } f(1-n) = 1$$

$$RHL = \lim_{n \rightarrow 0} f(1+n) = \lim_{n \rightarrow 0} (1 + 2n) = 1$$



$$\text{LHL} = \lim_{n \rightarrow 0} f(1-n) = \lim_{n \rightarrow 0} f(1) = 1$$

$$f(1) = \text{RHL} = \text{LHL}$$

Hence function is continuous at  $x = 1$

$$\begin{aligned} Rf'(1) &= \lim_{n \rightarrow 0} \frac{f(1+n) - f(1)}{h} = \lim_{n \rightarrow 0} \frac{1+2n-1}{h} \\ &= 2 \end{aligned}$$

$$Lf'(1) = \lim_{n \rightarrow 0} \frac{f(1-h) - f(1)}{-h} = \lim_{n \rightarrow 0} \frac{1-1}{-h} = 0$$

$$Rf'(1) \neq Lf'(1)$$

Hence function is not differentiable at  $x = 1$

**Q.4. A function given by  $f(x) = \begin{cases} x, & \text{if } x \geq 1 \\ x^2, & \text{if } x < 1. \end{cases}$  is a continuous function?**

**Sol.** Lets consider  $a$  be any real number. There are three possibilities.

Case I : If  $a > 1$

$$f(a) = a.$$

Now RHL

$$\begin{aligned} &\lim_{x \rightarrow a+} f(x) \\ &= \lim_{x \rightarrow 0} f(a+h) \\ &= \lim_{h \rightarrow 0} (a+h) \\ &= a \end{aligned}$$

LHL

$$\begin{aligned} &\lim_{x \rightarrow a-} f(x) \\ &= \lim_{x \rightarrow 0} f(a-h) \\ &= \lim_{h \rightarrow 0} (a-h) \\ &= a \end{aligned}$$

$$\text{So, } \lim_{x \rightarrow a+} f(x) = \lim_{a \rightarrow a-} f(x) = f(a).$$

Hence,  $f(x)$  is continuous at each  $a > 1$ .

Case II : If  $a < 1$

$$\text{Here, } f(a) = a^2$$

RHL

$$\begin{aligned}\lim_{x \rightarrow a+} f(x) &= \lim_{h \rightarrow 0} f(a+h) \\ &= \lim_{h \rightarrow 0} (a+h^2) \\ &= a^2\end{aligned}$$

LHL

$$\begin{aligned}\lim_{x \rightarrow a-} f(x) &= \lim_{h \rightarrow 0} f(a-h) \\ &= \lim_{h \rightarrow 0} (a-h)^2 \\ &= a^2\end{aligned}$$

$$\text{So, } \lim_{x \rightarrow a+} f(x) = \lim_{x \rightarrow a-} f(x) = f(a).$$

Hence,  $f(x)$  is continuous at each  $a < 1$ .

Case III: If  $a = 1$

$$f(1) = 1.$$

RHL

$$\begin{aligned}\lim_{x \rightarrow 1+} f(x) &= \lim_{h \rightarrow 0} f(1+h) \\ &= \lim_{h \rightarrow 0} (1+h) \\ &= 1\end{aligned}$$

LHL

$$\begin{aligned}\lim_{x \rightarrow 1-} f(x) &= \lim_{h \rightarrow 0} f(1-h) \\ &= \lim_{h \rightarrow 0} (1-h)^2 \\ &= 1\end{aligned}$$

$$\text{So, } \lim_{x \rightarrow a+} f(x) = \lim_{x \rightarrow a-} f(x) = f(a).$$

Hence,  $f(x)$  is continuous at each  $a = 1$ .

So, finally  $f(x)$  is continuous at  $x = a \forall a \in R$ .

Hence,  $f(x)$  is continuous.

OR

**Q.4. Find the derivative of  $xe^x$  w.r.t. to  $x$  by first principle.**

**Sol.** let  $y = xe^x$

$$y + \delta y = (x + \delta x)e^{(x+\delta x)}$$

$$\delta y = (x + \delta x)e^{x+\delta x} - xe^x$$

$$\delta y = (x + \delta x)e^x \cdot e^{\delta x} - xe^x$$

$$\delta y = e^x [(x + \delta x)e^{\delta x} - x]$$

$$\delta y = e^x \left[ (x + \delta x) \left( 1 + \delta x + \frac{(\delta x)^2}{2!} + \dots \right) - x \right]$$

$$\delta y = e^x [x + \delta x + x\delta x + \delta x^2 + \dots - x]$$

$$\frac{\delta y}{\delta x} = \frac{e^x}{\delta x} [\delta x + x\delta x + \delta x^2]$$

$$\frac{\delta y}{\delta x} = \frac{e^x}{\delta x} \cdot \delta x [1 + x + \delta x]$$

$$\delta x \xrightarrow{\lim} 0 \quad \frac{\delta y}{\delta x} = \delta x \xrightarrow{\lim} 0 \quad oe^x [1 + x + 0]$$

$$\frac{dy}{dx} = e^x [1 + x]$$

**Q.5. Find the values of  $a$  and  $b$  such that the function defined by**

$$f(x) = \begin{cases} 5, & \text{if } x \leq 2 \\ ax + b, & \text{if } 2 < x < 10 \\ 21, & \text{if } x \geq 10 \end{cases}$$

**is a continuous function.**

**Sol. :** The given function  $f$  is  $f(x) = \begin{cases} 5, & \text{if } x \leq 2 \\ ax + b, & \text{if } 2 < x < 10 \\ 21, & \text{if } x \geq 10 \end{cases}$

It is evident that the given function  $f$  is defined at all points of the real line.

If  $f$  is a continuous function, then  $f$  is continuous at all real numbers.

In particular,  $f$  is continuous at  $x = 2$  and  $x = 10$   
 Since  $f$  is continuous at  $x = 2$ , we obtain

$$\begin{aligned}\lim_{x \rightarrow 2} f(x) &= \lim_{x \rightarrow 2} f(x) = f(2) \\ \Rightarrow \lim_{x \rightarrow 2} (5) &= \lim_{x \rightarrow 2} (ax + b) = 5 \\ \Rightarrow 5 &= 2a + b = 5 \\ \Rightarrow 2a + b &= 5 \quad \dots (1)\end{aligned}$$

Since  $f$  is continuous at  $x = 10$ , we obtain

$$\begin{aligned}\lim_{x \rightarrow 10} f(x) &= \lim_{x \rightarrow 10} f(x) = f(10) \\ \Rightarrow \lim_{x \rightarrow 10} (ax + b) &= \lim_{x \rightarrow 10} (21) = 21 \\ \Rightarrow 10a + b &= 21 = 21 \\ \Rightarrow 10a + b &= 21 = 21 \\ \Rightarrow 10a + b &= 21 \quad \dots (2)\end{aligned}$$

On subtracting equation (1) from equation (2), we obtain

$$\begin{aligned}8a &= 16 \\ \Rightarrow a &= 2\end{aligned}$$

By putting  $a = 2$  in equation (1), we obtain

$$\begin{aligned}2 \times 2 + b &= 5 \\ \Rightarrow 4 + b &= 5 \\ \Rightarrow b &= 1\end{aligned}$$

Therefore, the values of  $a$  and  $b$  for which  $f$  is a continuous function are 2 and 1 respectively.

OR

**Q.5. Differentiate the following w.r.t.  $x$**

(i)  $\cos^3 x$

**Ans.** Let's consider

$$\begin{aligned}y &= \cos^3 x \\ &= (\cos x)^3.\end{aligned}$$

Putting  $\cos x = t$

So,  $y = t^3$  and  $t = \cos x$

$$\Rightarrow \frac{dy}{dt} = 3t^2 \text{ and } \frac{dt}{dx} = -\sin x$$

$$\Rightarrow \frac{dy}{dx} = \left( \frac{dy}{dt} \times \frac{dt}{dx} \right).$$

$$= (-3t^2 \sin x)$$

Now, Putting the value of  $t$

$$= (-3 \sin x \cos^2 x).$$

(ii)  $e^{4 \log x}$

Ans. Let's consider

$$y = e^{4 \log x}$$

putting

$$4 \log x = t$$

$$y = e^t \text{ and } t = 4 \log x$$

$$\Rightarrow \frac{dy}{dt} = e^t \text{ and } \frac{dy}{dx} = \frac{4}{x}$$

$$\text{since } \frac{dy}{dx} = \frac{dy}{dt} \times \frac{dt}{dx} = e^t \times \frac{4}{x}$$

putting the value of  $t$

$$\frac{dy}{dx} = \frac{4e^{4 \log x}}{x}$$

(iii)  $\tan \sqrt{x}$

Ans. Let's consider  $y = \tan \sqrt{x}$

Putting  $\sqrt{x} = t$

So,  $y = \tan t$  and  $t = \sqrt{x}$

$$\Rightarrow \frac{dy}{dx} = \left( \frac{dy}{dt} \times \frac{dt}{dx} \right).$$

$$= \left( \sec^2 t, \frac{1}{2\sqrt{x}} \right)$$

Now, Putting the value of  $t$

$$\Rightarrow \frac{dy}{dx} = \frac{\sec^2 \sqrt{x}}{2\sqrt{x}}$$

(iv)  $y = (x+3)^5$

**Ans.** Let's consider  $y = (x + 3)^5$

Putting  $(x + 3) = t$

$$y = t^5 \text{ and } t = x + 3$$

$$\Rightarrow \frac{dy}{dt} = 5t^4 \text{ and } \frac{dt}{dx} = 1$$

$$\Rightarrow \frac{dy}{dx} = \left( \frac{dy}{dt} \times \frac{dt}{dx} \right) = 5t^4$$

Now Putting the value of  $t$

$$= 5(x + 3)^4.$$

**Q. 6. Differentiate  $x^3$  by first principle method.**

**Ans.** We know  $f(x) = x^3$ , and can calculate  $f(x + \Delta x)$ :

**Start with:**  $f(x + \Delta x) = (x + \Delta x)^3$

**Expand:**  $(x + \Delta x)^3$ :  $f(x + \Delta x) = x^3 + 3x^2\Delta x + 3x(\Delta x)^2 + (\Delta x)^3$

The slope formula:  $\frac{f(x + \Delta x) - f(x)}{\Delta x}$

Put in  $f(x + \Delta x)$  and  $f(x)$ :  $\frac{x^3 + 3x^2\Delta x + 3x(\Delta x)^2 + (\Delta x)^3 - x^3}{\Delta x}$

Simplify ( $x^3$  and  $-x^3$  cancel):  $= -\frac{3x^2\Delta x + 3x(\Delta x)^2 + (\Delta x)^3}{\Delta x}$

Simplify more (divide through by  $\Delta x$ ):  $= 3x^2 + 3x\Delta x + (\Delta x)^2$

And then as  $\Delta x$  heads towards 0 we get:  $\frac{d}{dx}x^3 = 3x^2$

**OR**

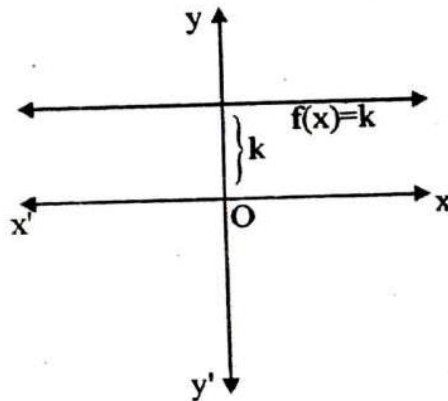
**Q.6. Draw the graph of the following (any 4)**

1. Constant function
2. Identity
3. Modulus
4. Reciprocal
5. Signum
6. Square root

**Ans. 1. Constant Function :-**

Let  $c$  be a constant real number. Then, the function defined by  $f(x) = c$  for all  $x \in R$  is called constant function  $c$ .

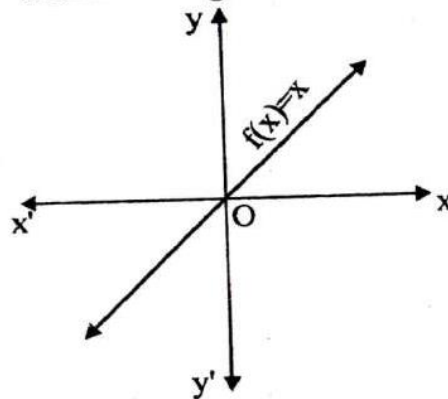
domain  $(f) = R$  and range  $(f) = \{c\}$ .



## 2. Identity function :

The function defined  $f(x) = x$  for all  $x \in R$  is called the identity function.

The domain =  $R$  and its range =  $R$ .



## 3. Modulus function :-

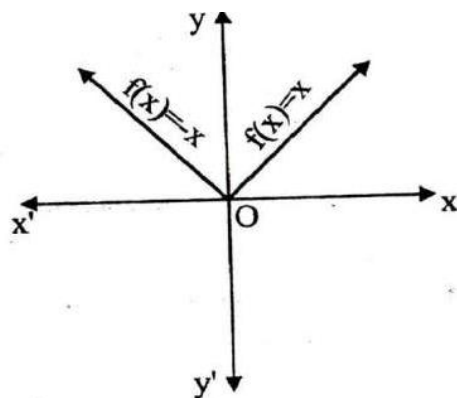
A function is called the modulus function if defined by

$$f(x) = |x| = \begin{cases} x, & \text{if } x \geq 0 \\ -x, & \text{When } x < 0 \end{cases}$$

We can say that modulus of every number is a non-negative real number, so

Domain =  $R$  and Range = non-negative real numbers.





#### 4. Reciprocal function :-

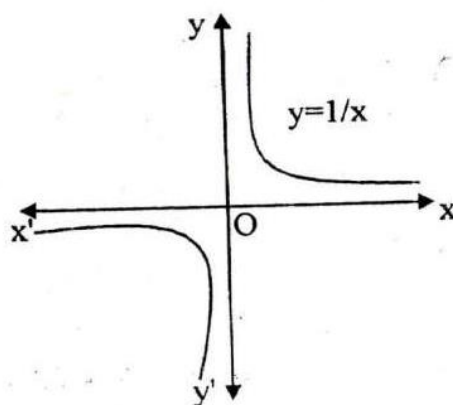
The function defined by  $f(x) = \frac{1}{x}$  is called the reciprocal function.

tion.

The function is not defined for  $x = 0$ .

Domain =  $R - \{0\}$  and Range

Also, .



#### 5. Signum function :-

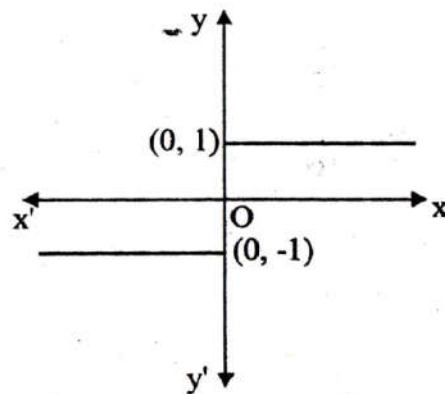
The function is defined by

$$f(x) = \begin{cases} \frac{|x|}{x}, & \text{if } x \neq 0 \\ 0, & \text{if } x = 0 \end{cases}$$



$$\text{or } f(x) = \begin{cases} 1, & \text{if } x > 0 \\ 0, & \text{if } x = 0 \\ -1, & \text{if } x < 0 \end{cases}$$

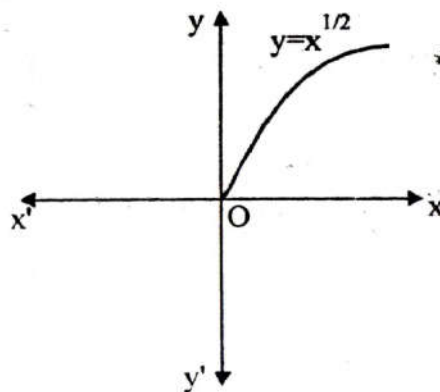
Domain =  $\mathbb{R}$  and Range =  $\{-1, 0, 1\}$ .



#### 6. Square-root function :-

The function defined by  $f(x) = +\sqrt{x}$  is known as square root function. As we know that negative numbers do not have real square roots. So,  $f(x)$  is not defined for negative real number.

Domain = set of all non-negative real numbers =  $[0, \infty[$  and Range = set of all non-negative real numbers =  $[0, \infty[$ .



**Q. 7. Differentiating  $f(x) = \sin x$**

sol. Here  $f(x) = \sin x$  so that  $f(x + \delta x) = \sin(x + \delta x)$ .

$$\text{So } f(x + \delta x) - f(x) = \sin(x + \delta x) - \sin x$$

The right hand side is the difference of two sine terms. We use the first trigonometric identity (above) to write this in an alternative form.

$$\begin{aligned}\sin(x + \delta x) - \sin x &= 2 \cos \frac{x + \delta x + x}{2} \sin \frac{\delta x}{2} \\ &= 2 \cos \frac{2x + \delta x}{2} \sin \frac{\delta x}{2} \\ &= 2 \cos \left( x + \frac{\delta x}{2} \right) \sin \frac{\delta x}{2}\end{aligned}$$

Then, using the definition of the derivative

$$\begin{aligned}\frac{dy}{dx} &= \lim_{\delta x \rightarrow 0} \frac{f(x + \delta x) - f(x)}{\delta x} \\ &= \frac{2 \cos \left( x + \frac{\delta x}{2} \right) \sin \frac{\delta x}{2}}{\delta x}\end{aligned}$$

The factor of 2 can be moved into the denominator as follows, in order to write this in an alternative form :

$$\frac{dy}{dx} = \frac{\cos \left( x + \frac{\delta x}{2} \right) \sin \frac{\delta x}{2}}{\delta x / 2} = \cos \left( x + \frac{\delta x}{2} \right) \frac{\sin \frac{\delta x}{2}}{\frac{\delta x}{2}}$$

We now let  $\delta x$  tend to zero. Consider the term  $\frac{\sin \frac{\delta x}{2}}{\frac{\delta x}{2}}$  and use the result

that  $\lim_{\theta \rightarrow 0} \frac{\sin \theta}{\theta} = 1$  with  $\theta = \frac{\delta x}{2}$ . We see that

$$\lim_{\delta x \rightarrow 0} \frac{\sin \frac{\delta x}{2}}{\frac{\delta x}{2}} = 1$$

Further,

$$\lim_{\delta x \rightarrow 0} \cos\left(x + \frac{\delta x}{2}\right) = \cos x$$

So finally,

$$\frac{dy}{dx} = \cos x$$

OR

**Q. 7** A  $f(x)$  be a function defined by  $f(x) = \begin{cases} 4x-5, & \text{if } x \leq 1 \\ 2x-\lambda, & \text{if } x > 1 \end{cases}$  Find

$\lambda$ , if limit of function  $f(x)$  exists at  $x = 1$ .

**Sol. :** Given function is:

$$f(x) = \begin{cases} 4x-5, & \text{if } x \leq 1 \\ 2x-\lambda, & \text{if } x > 1 \end{cases}$$

Now,

Left hand limit (LHL) at  $x = 1$

$$\begin{aligned} \lim_{x \rightarrow 1^-} f(x) &= \lim_{h \rightarrow 0} f(1-h) \\ &= \lim_{h \rightarrow 0} 4(1-h) - 5 \\ &= \lim_{h \rightarrow 0} (-1-4h) = -1 \end{aligned}$$

Right hand limit (RHL) at  $x = 1$

$$\begin{aligned} \lim_{x \rightarrow 1^+} f(x) &= \lim_{h \rightarrow 0} f(1+h) \\ &= \lim_{h \rightarrow 0} 2(1+h) - \lambda \\ &= (2-\lambda) \end{aligned}$$

Since  $\lim_{x \rightarrow 1} f(x)$  exists, So

$$\text{LHL} = \text{RHL}$$

$$\lim_{x \rightarrow 1^-} f(x) = \lim_{x \rightarrow 1^+} f(x)$$

$$\Rightarrow 1 = 2 - \lambda$$

$$\Rightarrow \lambda = 1$$

**Q.8. Prove that the following  $f(x) = |x| + |x-1|$  is continuous at  $x=0, 1$  but not differentiable.**

**Sol.**  $f(x) = |x| + |x-1|$

$$f(x) = \begin{cases} (-x) - (x-1) & x < 0 \\ = 1 - 2x & x < 0 \\ 1 & 0 \leq x < 1 \\ (x) + (x-1) = 2x-1 & x \geq 1 \end{cases}$$

$$x=0 \quad f(0)=1$$

$$f(o+n) = 1 \quad f(o-n) = 1 - 2(o-n) = 1 + 2n$$

$$RHL = \lim_{n \rightarrow 0} 1 \quad f(o+n) = \lim_{n \rightarrow 0} (1) = 1$$

$$LHL = \lim_{n \rightarrow 0} 1 \quad f(o-n) = \lim_{n \rightarrow 0} (1 + 2n) = 1$$

$$f(o) = RHL = LHL$$

Hence the function is continuous at  $x=0$

$$Rf'(o) = \lim_{n \rightarrow 0} \frac{f(o+n) - f(o)}{h} = \lim_{n \rightarrow 0} \left( \frac{1-1}{h} \right) = 0$$

$$Lf'(o) = \lim_{n \rightarrow 0} \frac{f(o-n) - f(o)}{-h} = \lim_{n \rightarrow 0} \frac{1+2n-1}{-h} = -2$$

$$Rf'(0) \neq Lf'(0).$$

Hence function is not differentiable at  $x=0$

$$\text{Again at } x=1 \quad f(1) = 2-1=1$$

$$f(1+n) = 2(1+n)-1 = 1+2n \quad \text{and} \quad f(1-n) = 1$$

$$RHL = \lim_{h \rightarrow 0} f(1+n) = \lim_{h \rightarrow 0} (1+2n) = -1$$

$$LHL = \lim_{h \rightarrow 0} f(1-n) = \lim_{h \rightarrow 0} (1) = 1 \Rightarrow f(1) = RHL = LHL$$

Hence function is continuous at  $x=1$

$$Rf'(1) = \lim_{h \rightarrow 0} \frac{f(1+n) - f(1)}{h} = \lim_{h \rightarrow 0} \frac{(1+2n-1)}{h} = 2$$

$$Lf'(1) = \lim_{n \rightarrow 0} \frac{f(1-n) - f(1)}{h} = \lim_{h \rightarrow 0} \frac{1-1}{h} = 0$$

$$Rf'(1) \neq Lf'(1)$$

Hence function is not differentiable at  $x = 1$

**Q.9. Differentiate  $\sin^{-1} x$  by first principle.**

**Ans. Proof.**  $x = \sin y$

$$x + \delta x = \sin(y + \delta y)$$

$$\delta x = \sin(y + \delta y) - \sin y$$

$$\delta x = 2 \cos\left(y + \frac{\delta y}{2}\right) \sin \frac{\delta y}{2} \quad \left[ \begin{array}{l} \because \sin C - \sin D \\ = 2 \cos \frac{C+D}{2} \sin \frac{C-D}{2} \end{array} \right]$$

$$\frac{\delta x}{\delta y} = \frac{2 \cos\left(y + \frac{\delta y}{2}\right) \sin \frac{\delta y}{2}}{\delta y}$$

$$\frac{\delta x}{\delta y} = \frac{\frac{\delta y}{2}}{\cos\left(y + \frac{\delta y}{2}\right) \sin\left(\frac{\delta y}{2}\right)}$$

When  $\delta x \rightarrow 0$  then  $\delta y \rightarrow 0$

$$\therefore \delta \lim_{x \rightarrow 0} \frac{\delta y}{\delta x} = \delta \lim_{y \rightarrow 0} \frac{\frac{\delta y}{2}}{\cos\left(y + \frac{\delta y}{2}\right) \sin \frac{\delta y}{2}}$$

$$\delta \lim_{x \rightarrow 0} \frac{\delta y}{\delta x} = \delta \lim_{y \rightarrow 0} \frac{\frac{\delta y}{2}}{\sin\left(\frac{\delta y}{2}\right)} \times \delta \lim_{y \rightarrow 0} \frac{1}{\cos\left(y + \frac{\delta y}{2}\right)}$$

$$\frac{dy}{dx} = 1 \times \frac{1}{\cos y} = \frac{1}{\sqrt{1 - \sin^2 y}} = \frac{1}{\sqrt{1 - x^2}}$$

Derivative of  $\cos^{-1} x$  by first principle.

$$y = \cos^{-1} x$$

$$x = \cos y$$

Again let  $x + \delta x = \cos(y + \delta y)$

$$\begin{aligned}\delta x &= 2 \sin\left(y + \frac{\delta y}{2}\right) \sin\left(-\frac{\delta y}{2}\right) \\ &= -2 \sin\left(y + \frac{\delta y}{2}\right) \sin\left(\frac{\delta y}{2}\right)\end{aligned}$$

$$\frac{\delta x}{\delta y} = -\frac{\sin\left(y + \frac{\delta y}{2}\right) \sin\left(\frac{\delta y}{2}\right)}{\left(\frac{\delta y}{2}\right)}$$

$$\frac{\delta y}{\delta x} = -\frac{\frac{\delta y}{2}}{\sin\left(y + \frac{\delta y}{2}\right) \sin\left(\frac{\delta y}{2}\right)}$$

when  $\delta x \rightarrow 0$  then  $\delta y \rightarrow 0$

$$\delta \lim_{x \rightarrow 0} \frac{\delta y}{\delta x} = \delta \lim_{y \rightarrow 0} \frac{-1}{\sin\left(y + \frac{\delta y}{2}\right) \frac{\sin\left(\frac{\delta y}{2}\right)}{\left(\frac{\delta y}{2}\right)}}$$

$$\frac{dy}{dx} = \frac{-1}{\sin y \times 1} = \frac{-1}{\sqrt{1 - \cos^2 y}} = \frac{-1}{\sqrt{1 - x^2}}$$

**Q.10. Find the derivative of  $\frac{x+1}{x+2}$  w.r.t.  $x$  by first principle.**

**Sol.** Let  $y = \frac{x+1}{x+2}$

$$y + \delta y = \frac{x + \delta x + 1}{x + \delta x + 2} \quad \bullet$$

$$\delta y = \frac{x + \delta x + 2}{x + \delta x + 2} - \frac{x - 1}{x - 2}$$

$$= \frac{(x + \delta x + 1)(x + 2) - (x + 1)(x + \delta x + 2)}{(x + \delta x + 2)(x + 2)}$$

$$\delta y = \frac{x^2 + x\delta x + x + 2x + 2\delta x + 2 - x^2 - x\delta x - 2x - x - \delta x - 2}{(x + \delta x + 2)(x + 2)}$$

$$\frac{\delta y}{\delta x} = \frac{\delta x}{(x + \delta x + 2)(x + 2)\delta x} = \frac{1}{(x + \delta x + 2)(x + 2)}$$

$$\delta x \xrightarrow{\lim} 0 \frac{\delta y}{\delta x} = \delta x \xrightarrow{\lim} 0 \frac{1}{(x + \delta x + 2)(x + 2)}$$

$$\frac{dy}{dx} = \frac{1}{(x + 2)(x + 2)} = \frac{1}{(x + 2)^2}$$



## Unit -3

### Very Short Questions

1. If two matrices contain the same values, but in different locations, are the matrices equal?

Ans. No, to be equal, two matrices must have the same dimensions, and must have the same values in the same positions.

For two matrices to be equal, they must have

1. The same dimensions.
2. Corresponding elements must be equal

Example

$$\begin{pmatrix} 1 & 4 \\ 2 & 5 \\ 3 & 6 \end{pmatrix}_{3 \times 2} \neq \begin{pmatrix} 1 & 2 & 3 \\ 4 & 5 & 6 \end{pmatrix}_{2 \times 3}$$

2. Are these two matrices equal?

$$\begin{pmatrix} 1 & 4 \\ 2 & 5 \\ 3 & 6 \end{pmatrix} = ? = \begin{pmatrix} 6 & 4 \\ 5 & 2 \\ 1 & 3 \end{pmatrix}$$

Ans. No, they have the same dimensions, but corresponding elements are not equal.

3. What is:

$$\begin{pmatrix} 1 & 2 & 3 \\ 4 & 5 & 6 \end{pmatrix}_{2 \times 3}^T = ?$$

Ans.  $\begin{pmatrix} 1 & 2 & 3 \\ 4 & 5 & 6 \end{pmatrix}_{2 \times 3}^T = \begin{pmatrix} 1 & 4 \\ 2 & 5 \\ 3 & 6 \end{pmatrix}_{3 \times 2}$

4. What is

$$(1 \ 2 \ 3 \ 4)^T = ?$$

$$\text{Ans. } (1 \ 2 \ 3 \ 4)^T = \begin{pmatrix} 1 \\ 2 \\ 3 \\ 4 \end{pmatrix}$$

5. What is the transpose of I?

$$\begin{pmatrix} 1 & 0 & 0 \\ 0 & 1 & 0 \\ 0 & 0 & 1 \end{pmatrix}^T$$

$$\text{Ans. } \begin{pmatrix} 1 & 0 & 0 \\ 0 & 1 & 0 \\ 0 & 0 & 1 \end{pmatrix}$$

6. What is  $(AB)(B^{-1}A^{-1})$ ?

$$\text{Ans. } (AB)(B^{-1}A^{-1}) = A(BB^{-1})A^{-1}, \text{ by associativity.}$$

$$= A1A^{-1} = AA^{-1} = 1$$

7. What is the rank of the following matrix?

$$\begin{pmatrix} 1 & 2 & 0 & 3 \\ 1 & -2 & 3 & 0 \\ 0 & 0 & 4 & 8 \\ 2 & 4 & 0 & 6 \end{pmatrix}$$

Ans. Three. The last row is a multiple of the first.

8. What is  $(21)(0.51)$ ?

**Ans.**  $(21)(0.51) = 1$

or

$$\begin{pmatrix} 2 & 0 & 0 \\ 0 & 2 & 0 \\ 0 & 0 & 2 \end{pmatrix} \begin{pmatrix} \frac{1}{2} & 0 & 0 \\ 0 & \frac{1}{2} & 0 \\ 0 & 0 & \frac{1}{2} \end{pmatrix}$$

The resulting matrix is 1

**9. Is  $Ax$  equal to  $xA$ ?**

**Ans.** No, matrix multiplication is NOT commutative.

**10. Perform the following multiplication:**

$$\begin{pmatrix} 1 & 2 & 0 & 0 \\ 0 & 1 & 3 & 0 \\ 0 & 1 & 0 & 2 \\ 1 & -1 & 2 & 0 \end{pmatrix}_{4 \times 4} \begin{pmatrix} 1 \\ -1 \\ 0 \\ 2 \end{pmatrix}_{4 \times 1} = ?$$

**Ans.**  $\begin{pmatrix} 1 & 2 & 0 & 0 \\ 0 & 1 & 3 & 0 \\ 0 & 1 & 0 & 2 \\ 1 & -1 & 2 & 0 \end{pmatrix}_{4 \times 4} \begin{pmatrix} 1 \\ -1 \\ 0 \\ 2 \end{pmatrix}_{4 \times 1} = \begin{pmatrix} -1 \\ -1 \\ 3 \\ 2 \end{pmatrix}_{4 \times 1}$

**11. What dimensions will the following product have:**

$$A_{4 \times 4} B_{4 \times 2} = C_{? \times ?}$$

**Ans.**  $A_{4 \times 4} B_{4 \times 2} = C_{4 \times 2}$

If two rectangular matrices are put in order so that the inner dimension is the same in each, then the matrices can be multiplied. The result is (in general) a rectangular matrix.

$$A_{R \times N} B_{N \times C} = C_{R \times C}$$

**12. Is it always true that  $AB = BA$ ?**

**Ans.** No, Even when both products can be formed they are rarely equal.

**Example**

$$\begin{pmatrix} 1 & 2 \\ 3 & 4 \end{pmatrix} \begin{pmatrix} 1 & -1 \\ 2 & 0 \end{pmatrix}$$

is equal to

$$\begin{pmatrix} 5 & -1 \\ 11 & -3 \end{pmatrix}$$

**In the matrix**

$$A = \begin{bmatrix} 2 & 5 & 19 & -7 \\ 35 & -2 & \frac{5}{2} & 12 \\ \sqrt{3} & 1 & -5 & 17 \end{bmatrix}, \text{ write}$$

(i) The order of the matrix

(ii) The number of elements.

(iii) Write the elements  $a_{13}, a_{21}, a_{33}, a_{24}, a_{23}$

**Ans.** (i) In the given matrix, the number of rows is 3 and the number of columns is 4. Therefore, the order of the matrix is  $3 \times 4$ .

(ii) Since the order of the matrix is  $3 \times 4$ , there are  $3 \times 4 = 12$  elements in it.

(iii)  $a_{13} = 19, a_{21} = 35, a_{33} = -5, a_{24} = 12, a_{23} = \frac{5}{2}$

**13. Find the value of x, y and z from the following equation:**

$$\begin{bmatrix} 4 & 3 \\ x & 5 \end{bmatrix} = \begin{bmatrix} y & z \\ 1 & 5 \end{bmatrix}$$

**Ans.** As the given matrices are equal, their corresponding elements are also equal.

Comparing the corresponding elements, we get:

14. Compute the following

$$\begin{bmatrix} \cos^2 x & \sin^2 x \\ \sin^2 x & \cos^2 x \end{bmatrix} + \begin{bmatrix} \sin^2 x & \cos^2 x \\ \cos^2 x & \sin^2 x \end{bmatrix}$$

Ans.  $\begin{bmatrix} \cos^2 x & \sin^2 x \\ \sin^2 x & \cos^2 x \end{bmatrix} + \begin{bmatrix} \sin^2 x & \cos^2 x \\ \cos^2 x & \sin^2 x \end{bmatrix}$

$$= \begin{bmatrix} \cos^2 x + \sin^2 x & \sin^2 x + \cos^2 x \\ \sin^2 x + \cos^2 x & \cos^2 x + \sin^2 x \end{bmatrix}$$

$$= \begin{bmatrix} 1 & 1 \\ 1 & 1 \end{bmatrix} \quad (\because \sin^2 x + \cos^2 x = 1)$$

15. Compute the indicated products

$$\begin{bmatrix} a & b \\ -b & a \end{bmatrix} \begin{bmatrix} a & -b \\ b & a \end{bmatrix}$$

Ans.  $\begin{bmatrix} a & b \\ -b & a \end{bmatrix} \begin{bmatrix} a & -b \\ b & a \end{bmatrix}$

$$\begin{bmatrix} a & b \\ -b & a \end{bmatrix} \begin{bmatrix} a & -b \\ b & a \end{bmatrix}$$

$$= \begin{bmatrix} a(a) + b(b) & a(-b) + b(a) \\ -b(a) + a(b) & -b(-b) + a(a) \end{bmatrix}$$

$$= \begin{bmatrix} a^2 + b^2 & -ab + ab \\ -ab + ab & b^2 + a^2 \end{bmatrix} = \begin{bmatrix} a^2 + b^2 & 0 \\ 0 & a^2 + b^2 \end{bmatrix}$$

16. Find the transpose of each of the following matrices:

(i)  $\begin{bmatrix} 5 \\ 1 \\ 2 \\ -1 \end{bmatrix}$

(ii)  $\begin{bmatrix} 1 & -1 \\ 2 & 3 \end{bmatrix}$

**Ans.** (i) Let  $A = \begin{bmatrix} 5 \\ \frac{1}{2} \\ -1 \end{bmatrix}$ , then  $A^T = \begin{bmatrix} 5 \\ \frac{1}{2} \\ -1 \end{bmatrix}$ .

(ii) Let  $A = \begin{bmatrix} 1 & -1 \\ 2 & 3 \end{bmatrix}$ , then  $A^T = \begin{bmatrix} 1 & 2 \\ -1 & 3 \end{bmatrix}$ .

**17. Find the inverse of each of the matrices, if it exists**

$$\begin{bmatrix} 2 & 1 \\ 1 & 1 \end{bmatrix}$$

**Ans.** Let  $A = \begin{bmatrix} 2 & 1 \\ 1 & 1 \end{bmatrix}$

We know that  $A = IA$ ,

$$\therefore \begin{bmatrix} 2 & 1 \\ 1 & 1 \end{bmatrix} = \begin{bmatrix} 1 & 0 \\ 0 & 1 \end{bmatrix} A$$

$$\Rightarrow \begin{bmatrix} 1 & 0 \\ 1 & 1 \end{bmatrix} = \begin{bmatrix} 1 & -1 \\ 0 & 1 \end{bmatrix} A \quad (R_1 \rightarrow R_1 - R_2)$$

$$\Rightarrow \begin{bmatrix} 1 & 0 \\ 0 & 1 \end{bmatrix} = \begin{bmatrix} 1 & -1 \\ -1 & 2 \end{bmatrix} A \quad (R_2 \rightarrow R_2 - R_1)$$

$$\therefore A^{-1} = \begin{bmatrix} 1 & -1 \\ -1 & 2 \end{bmatrix}$$

**18. Evaluate the determinants**

(i)  $\begin{vmatrix} 3 & -4 & 5 \\ 1 & 1 & -2 \\ 2 & 3 & 1 \end{vmatrix}$

(ii) Let

$$A = \begin{vmatrix} 3 & -4 & 5 \\ 1 & 1 & -2 \\ 2 & 3 & 1 \end{vmatrix}$$

By Expanding along the first row, we have:

$$\begin{aligned} |A| &= 3 \begin{vmatrix} 1 & -2 \\ 3 & 1 \end{vmatrix} + 4 \begin{vmatrix} 1 & -2 \\ 2 & 1 \end{vmatrix} + 5 \begin{vmatrix} 1 & 1 \\ 2 & 3 \end{vmatrix} \\ &= 3(1+6) + 4(1+4) + 5(3-2) \\ &= 3(7) + 4(5) + 5(1) \\ &= 21 + 20 + 5 = 46 \end{aligned}$$

19. Find area of the triangle with vertices at the point given in each of the following:

(i) (1, 0), (6, 0), (4, 3)

Ans. (i) The area of the triangle with vertices (1, 0), (6, 0), (4, 3) is given by the relation

$$\begin{aligned} \Delta &= \frac{1}{2} \begin{vmatrix} 1 & 0 & 1 \\ 6 & 0 & 1 \\ 4 & 3 & 1 \end{vmatrix} \\ &= \frac{1}{2} [1(0-3) - 0(6-4) + 1(18-0)] \\ &= \frac{1}{2} [-3 + 18] = \frac{15}{2} \text{ square units} \end{aligned}$$

20. Write Minors and Cofactors of the elements of the following determinants:

$$\begin{vmatrix} 2 & -4 \\ 0 & 3 \end{vmatrix}$$



**Ans.** The given determinant is  $\begin{vmatrix} 2 & -4 \\ 0 & 3 \end{vmatrix}$

Minor of element  $a_{ij}$  is  $M_{ij}$ .

$\therefore M_{11}$  = minor of element  $a_{11} = 3$

$M_{12}$  = minor of element  $a_{12} = 0$

$M_{21}$  = minor of element  $a_{21} = -4$

$M_{22}$  = minor of element  $a_{22} = 2$

Cofactor of  $a_{ij}$  is  $A_{ij} = (-1)^{i+j} M_{ij}$ .

$$\therefore A_{11} = (-1)^{1+1} M_{11} = (-1)^2 (3) = 3$$

$$A_{12} = (-1)^{1+2} M_{12} = (-1)^3 (0) = 0$$

$$A_{21} = (-1)^{2+1} M_{21} = (-1)^3 (-4) = 4$$

$$A_{22} = (-1)^{2+2} M_{22} = (-1)^4 (2) = 2$$

**21. Find adjoint of each of the matrices**

$$\begin{bmatrix} 1 & 2 \\ 3 & 4 \end{bmatrix}$$

**Ans.** Let

$$A = \begin{bmatrix} 1 & 2 \\ 3 & 4 \end{bmatrix}$$

We have,

$$A_{11} = 4, A_{12} = -3, A_{21} = -2, A_{22} = 1$$

$$\therefore \text{adj}A = \begin{bmatrix} A_{11} & A_{21} \\ A_{12} & A_{22} \end{bmatrix} = \begin{bmatrix} 4 & -2 \\ -3 & 1 \end{bmatrix}$$

**22. Find the inverse of each of the matrices (if it exists):**

$$\begin{bmatrix} 2 & -2 \\ 4 & 3 \end{bmatrix}$$

**Ans.** Let

$$A = \begin{bmatrix} 2 & -2 \\ 4 & 3 \end{bmatrix}$$

we have,

$$|A| = 6 + 8 = 14$$

Now,

$$A_{11} = 3, A_{12} = -4, A_{21} = 2, A_{22} = 2$$

$$\therefore \text{adj}A = \begin{bmatrix} 3 & 2 \\ -4 & 2 \end{bmatrix}$$

$$\therefore A^{-1} = \frac{1}{|A|} \text{adj}A = \frac{1}{14} \begin{bmatrix} 3 & 2 \\ -4 & 2 \end{bmatrix}$$

**23. Examine the consistency of the system of equations**

$$x + 2y = 2$$

$$2x + 3y = 3$$

**Ans.** The given system of equations is:

$$x + 2y = 2$$

$$2x + 3y = 3$$

The given system of equations can be written in the form of  $AX = B$ , where

$$A = \begin{bmatrix} 1 & 2 \\ 2 & 3 \end{bmatrix}, X = \begin{bmatrix} x \\ y \end{bmatrix} \text{ and } B = \begin{bmatrix} 2 \\ 3 \end{bmatrix}$$

Now,

$$|A| = 1(3) - 2(2) = 3 - 4 = -1 \neq 0$$

$\therefore A$  is non-singular.

Therefore  $A^{-1}$  exists

Hence, the given system of equations is consistent

24. If  $A = \begin{bmatrix} 1 & 1 & -2 \\ 2 & 1 & -3 \\ 5 & 4 & -9 \end{bmatrix}$ , find  $|A|$ .

**Ans.** Let

$$A = \begin{bmatrix} 1 & 1 & -2 \\ 2 & 1 & -3 \\ 5 & 4 & -9 \end{bmatrix}$$

By expanding along the first row, we have:

$$\begin{aligned} |A| &= \begin{vmatrix} 1 & -3 \\ 4 & -9 \end{vmatrix} - 1 \begin{vmatrix} 2 & -3 \\ 5 & -9 \end{vmatrix} - 2 \begin{vmatrix} 2 & 1 \\ 5 & 4 \end{vmatrix} \\ &= 1(-9 + 12) - 1(-18 + 15) - 2(8 - 5) \\ &= 1(3) - 1(-3) - 2(3) \\ &= 3 + 3 - 6 \\ &= 0 \end{aligned}$$

25. If  $A = \begin{bmatrix} 1 & 2 \\ 4 & 2 \end{bmatrix}$ , then show that  $|2A| = 4|A|$

**Ans.** The given matrix is  $A = \begin{bmatrix} 1 & 2 \\ 4 & 2 \end{bmatrix}$

$$\therefore 2A = 2 \begin{bmatrix} 1 & 2 \\ 4 & 2 \end{bmatrix} = \begin{bmatrix} 2 & 4 \\ 8 & 4 \end{bmatrix}$$

$$\therefore L.H.S = |2A| = \begin{vmatrix} 2 & 4 \\ 8 & 4 \end{vmatrix}$$

$$= 2 \times 4 - 4 \times 8 = 8 - 32 = -24$$

Now,

$$|A| = \begin{vmatrix} 1 & 2 \\ 4 & 2 \end{vmatrix} = 1 \times 2 - 2 \times 4 = 2 - 8 = -6$$

$$\therefore R.H.S = 4|A| = 4 \times (-6) = -24$$

$$\therefore L.H.S = R.H.S$$

## Short Questions

**Q.1. Define Matrices and explain special types of Matrices**

**Ans.** A rectangular arrangement of  $mn$  numbers, in  $m$  rows and  $n$  columns and enclosed within a bracket is called a matrix. We shall denote matrices by capital letters as A, B, C, etc:

$$A = \begin{pmatrix} a_{11} & a_{12} & \cdots & a_{1n} \\ \vdots & \vdots & \ddots & \vdots \\ a_{m1} & a_{m2} & \cdots & a_{mn} \end{pmatrix} = (a_{ij})_{m \times n}$$

A is a matrix of order  $m \times n$ ,  $i^{th}$  row  $j^{th}$  column element of matrix denoted by  $a_{ij}$

**Special Types of Matrices:**

**Square Matrix**

A matrix in which numbers of rows are equal to number of columns is called a square matrix.

$$\begin{pmatrix} 1 & 2 & -5 \\ 3 & 6 & 5 \\ 0 & -1 & 4 \end{pmatrix}$$

**Rectangular Matrix**

A rectangular matrix is formed by a different number of rows and columns, and its dimension is noted as:  $m \times n$

$$\begin{pmatrix} 1 & 2 & 5 \\ 9 & 1 & 3 \end{pmatrix}$$

**Zero Matrix**

In a zero matrix, all the elements are zeros.

$$\begin{pmatrix} 0 & 0 \\ 0 & 0 \end{pmatrix}$$

### Diagonal Matrix

In a diagonal matrix, all the elements above and below the diagonal are zeros.

$$\begin{pmatrix} 2 & 0 & 0 \\ 0 & 2 & 0 \\ 0 & 0 & 6 \end{pmatrix}$$

### Scalar Matrix

A scalar matrix is a diagonal matrix in which the diagonal elements are equal.

$$\begin{pmatrix} 2 & 0 & 0 \\ 0 & 2 & 0 \\ 0 & 0 & 2 \end{pmatrix}$$

### Identity Matrix

An identity matrix is a diagonal matrix in which the diagonal elements are equal to 1.

$$\begin{pmatrix} 1 & 0 & 0 \\ 0 & 1 & 0 \\ 0 & 0 & 1 \end{pmatrix}$$

**Q.2.** Let  $A = \begin{bmatrix} 2 & 4 \\ 3 & 2 \end{bmatrix}$ ,  $B = \begin{bmatrix} 1 & 3 \\ -2 & 5 \end{bmatrix}$ ,  $C = \begin{bmatrix} -2 & 5 \\ 3 & 4 \end{bmatrix}$

Find each of the following:

(i)  $A + B$

(ii)  $3A - C$

**Ans.** (i)  $A + B = \begin{bmatrix} 2 & 4 \\ 3 & 2 \end{bmatrix} + \begin{bmatrix} 1 & 3 \\ -2 & 5 \end{bmatrix} = \begin{bmatrix} 2+1 & 4+3 \\ 3-2 & 2+5 \end{bmatrix} = \begin{bmatrix} 3 & 7 \\ 1 & 7 \end{bmatrix}$

$$\begin{aligned}
 \text{(ii) } 3A - C &= 3 \begin{bmatrix} 2 & 4 \\ 3 & 2 \end{bmatrix} - \begin{bmatrix} -2 & 5 \\ 3 & 4 \end{bmatrix} \\
 &= \begin{bmatrix} 3 \times 2 & 3 \times 4 \\ 3 \times 3 & 3 \times 2 \end{bmatrix} - \begin{bmatrix} -2 & 5 \\ 3 & 4 \end{bmatrix} \\
 &= \begin{bmatrix} 6 & 12 \\ 9 & 6 \end{bmatrix} - \begin{bmatrix} -2 & 5 \\ 3 & 4 \end{bmatrix} \\
 &= \begin{bmatrix} 6+2 & 12-5 \\ 9-3 & 6-4 \end{bmatrix} \\
 &= \begin{bmatrix} 8 & 7 \\ 6 & 2 \end{bmatrix}
 \end{aligned}$$

**Q.3. Find x and y, if**  $2 \begin{bmatrix} 1 & 3 \\ 0 & x \end{bmatrix} + \begin{bmatrix} y & 0 \\ 1 & 2 \end{bmatrix} = \begin{bmatrix} 5 & 6 \\ 1 & 8 \end{bmatrix}$

**Ans.**  $2 \begin{bmatrix} 1 & 3 \\ 0 & x \end{bmatrix} + \begin{bmatrix} y & 0 \\ 1 & 2 \end{bmatrix} = \begin{bmatrix} 5 & 6 \\ 1 & 8 \end{bmatrix}$

$$\Rightarrow \begin{bmatrix} 2 & 6 \\ 0 & 2x \end{bmatrix} + \begin{bmatrix} y & 0 \\ 1 & 2 \end{bmatrix} = \begin{bmatrix} 5 & 6 \\ 1 & 8 \end{bmatrix}$$

$$\Rightarrow \begin{bmatrix} 2+y & 6 \\ 1 & 2x+2 \end{bmatrix} = \begin{bmatrix} 5 & 6 \\ 1 & 8 \end{bmatrix}$$

Comparing the corresponding elements of these two matrices, we have:

$$2 + y = 5 \Rightarrow y = 3$$

$$2x + 2 = 8$$

$$\Rightarrow x = 3$$

$$\therefore x = 3, y = 3$$

4. If  $A = \begin{bmatrix} 5 & 7 & 9 \\ -2 & 1 & 1 \end{bmatrix}$  and  $B = \begin{bmatrix} 1 & 2 & 0 \\ 1 & 3 & 1 \end{bmatrix}$ , then verify that

(i)  $(A+B)' = A' + B'$

We have:

$$A' = \begin{bmatrix} -1 & 5 & -2 \\ 2 & 7 & 1 \\ 3 & 9 & 1 \end{bmatrix} \text{ and } B' = \begin{bmatrix} -4 & 1 & 1 \\ 1 & 2 & 3 \\ -5 & 0 & 1 \end{bmatrix}$$

$$(i) \quad A+B = \begin{bmatrix} -1 & 2 & 3 \\ 5 & 7 & 9 \\ -2 & 1 & 1 \end{bmatrix} + \begin{bmatrix} -4 & 1 & -5 \\ 1 & 2 & 0 \\ 1 & 3 & 1 \end{bmatrix}$$

$$= \begin{bmatrix} -5 & 3 & -2 \\ 6 & 9 & 9 \\ -1 & 4 & 2 \end{bmatrix}$$

$$\therefore (A+B)' = \begin{bmatrix} -5 & 6 & -1 \\ 3 & 9 & 4 \\ -2 & 9 & 2 \end{bmatrix}$$

$$A' + B' = \begin{bmatrix} -1 & 5 & -2 \\ 2 & 7 & 1 \\ 3 & 9 & 1 \end{bmatrix} + \begin{bmatrix} -4 & 1 & 1 \\ 1 & 2 & 3 \\ -5 & 0 & 1 \end{bmatrix} = \begin{bmatrix} -5 & 6 & -1 \\ 3 & 9 & 4 \\ -2 & 9 & 2 \end{bmatrix}$$

Hence, we have verified that  $(A+B)' = A' + B'$

5. If (i)  $A = \begin{bmatrix} \cos \alpha & \sin \alpha \\ -\sin \alpha & \cos \alpha \end{bmatrix}$ , then verify that  $A'A = I$

$$(i) \quad A = \begin{bmatrix} \cos \alpha & \sin \alpha \\ -\sin \alpha & \cos \alpha \end{bmatrix}$$



$$\therefore A' = \begin{bmatrix} \cos \alpha & -\sin \alpha \\ \sin \alpha & \cos \alpha \end{bmatrix}$$

$$A' A = \begin{bmatrix} \cos \alpha & -\sin \alpha \\ \sin \alpha & \cos \alpha \end{bmatrix} \begin{bmatrix} \cos \alpha & \sin \alpha \\ -\sin \alpha & \cos \alpha \end{bmatrix}$$

$$= \begin{bmatrix} (\cos \alpha)(\cos \alpha) + (-\sin \alpha)(-\sin \alpha) & (\cos \alpha)(\sin \alpha) + (-\sin \alpha)(\cos \alpha) \\ (\sin \alpha)(\cos \alpha) + (\cos \alpha)(-\sin \alpha) & (\sin \alpha)(\sin \alpha) + (\cos \alpha)(\cos \alpha) \end{bmatrix}$$

$$= \begin{bmatrix} \cos^2 \alpha + \sin^2 \alpha & \sin \alpha \cos \alpha - \sin \alpha \cos \alpha \\ \sin \alpha \cos \alpha - \sin \alpha \cos \alpha & \sin^2 \alpha + \cos^2 \alpha \end{bmatrix}$$

$$= \begin{bmatrix} 1 & 0 \\ 0 & 1 \end{bmatrix} = I$$

Hence, we have verified that  $A' A = I$

**Q.6. Find the inverse of each of the matrices, if it exists**

$$\begin{bmatrix} 1 & -1 \\ 2 & 3 \end{bmatrix}$$

**Ans.** Let

$$A = \begin{bmatrix} 1 & -1 \\ 2 & 3 \end{bmatrix}$$

We know that  $A = IA$

$$\therefore \begin{bmatrix} 1 & -1 \\ 2 & 3 \end{bmatrix} = \begin{bmatrix} 1 & 0 \\ 0 & 1 \end{bmatrix} A$$

$$\Rightarrow \begin{bmatrix} 1 & -1 \\ 0 & 5 \end{bmatrix} = \begin{bmatrix} 1 & 0 \\ -2 & 1 \end{bmatrix} A \quad (R_2 \rightarrow R_2 - 2R_1)$$

$$\Rightarrow \begin{bmatrix} 1 & -1 \\ 0 & 1 \end{bmatrix} = \begin{bmatrix} 1 & 0 \\ -\frac{2}{5} & \frac{1}{5} \end{bmatrix} A \quad \left( R_2 \rightarrow \frac{1}{5} R_2 \right)$$

$$\Rightarrow \begin{bmatrix} 1 & 0 \\ 0 & 1 \end{bmatrix} = \begin{bmatrix} \frac{3}{5} & \frac{1}{5} \\ -\frac{2}{5} & \frac{1}{5} \end{bmatrix} A \quad (R_1 \rightarrow R_1 + R_2)$$

$$\therefore A^{-1} = \begin{bmatrix} \frac{3}{5} & \frac{1}{5} \\ -\frac{2}{5} & \frac{1}{5} \end{bmatrix}$$

**Q. 7.** If  $A$  is square matrix such that  $A^2 = A$ , then  $(I + A)^3 - 7A$  is equal to

**Ans.** Answer: C

$$(I + A)^3 - 7A = I^3 + A^3 + 3I^2A + 3AI^2 - 7A$$

$$= I + A^3 + 3A + 3A^2 - 7A$$

$$= I + A^2 \cdot A + 3A + 3A - 7A \quad [A^2 = A]$$

$$= I + A \cdot A - A$$

$$= I + A - A$$

$$= I + A - A$$

$$= I$$

$$\therefore (I + A)^3 - 7A = I$$

**Q. 8.** If  $A = \begin{bmatrix} 1 & 2 \\ 4 & 2 \end{bmatrix}$ , then show that  $|2A| = 4|A|$

**Ans.** The given matrix is  $A = \begin{bmatrix} 1 & 2 \\ 4 & 2 \end{bmatrix}$

$$\therefore 2A = 2 \begin{bmatrix} 1 & 2 \\ 4 & 2 \end{bmatrix} = \begin{bmatrix} 2 & 4 \\ 8 & 4 \end{bmatrix}$$

$$L.H.S = |2A| = \begin{vmatrix} 2 & 4 \\ 8 & 4 \end{vmatrix} = 2 \times 4 - 4 \times 8 = 8 - 32 = -24$$

Now,

$$|A| = \begin{vmatrix} 1 & 2 \\ 4 & 2 \end{vmatrix} = 1 \times 2 - 2 \times 4 = 2 - 8 = -6$$

$$\therefore R.H.S = 4|A| = 4 \times (-6) = -24$$

$$\therefore L.H.S = R.H.S$$

**Q. 9. Show that the points**

$A(a, b+c), B(b, c+a), C(c, a+b)$  are collinear

**Ans.** Area of  $\Delta ABC$  is given by the relation:

$$\Delta = \frac{1}{2} \begin{vmatrix} a & b+c & 1 \\ b & c+a & 1 \\ c & a+b & 1 \end{vmatrix}$$

$$= \frac{1}{2} \begin{vmatrix} a & b+c & 1 \\ b-a & a-b & 0 \\ c-a & a-c & 0 \end{vmatrix}$$

(Applying  $R_2 \rightarrow R_1$  and  $R_3 \rightarrow R_3 - R_1$ )

$$= \frac{1}{2} (a-b)(c-a) \begin{vmatrix} a & b+c & 1 \\ -1 & 1 & 0 \\ 1 & -1 & 0 \end{vmatrix}$$

$$= \frac{1}{2} (a-b)(c-a) \begin{vmatrix} a & b+c & 1 \\ -1 & 1 & 0 \\ 0 & 0 & 0 \end{vmatrix}$$

(Applying  $R_3 \rightarrow R_2 - R_3 + R_2$ )

$$= 0$$

(All elements of  $R_3$  are 0)

Thus, the area of the triangle formed by points A, B and C is zero.

Hence, the points A, B and C are collinear.

**Q.10. Find adjoint of each of the matrices**

$$\begin{bmatrix} 1 & -1 & 2 \\ 2 & 3 & 5 \\ -2 & 0 & 1 \end{bmatrix}$$

**Ans. Let**

$$A = \begin{bmatrix} 1 & -1 & 2 \\ 2 & 3 & 5 \\ -2 & 0 & 1 \end{bmatrix}$$

We have,

$$A_{11} = \begin{vmatrix} 3 & 5 \\ 0 & 1 \end{vmatrix} = 3 - 0 = 3$$

$$A_{12} = - \begin{vmatrix} 2 & 5 \\ -2 & 1 \end{vmatrix} = -(2 + 10) = -12$$

$$A_{13} = \begin{vmatrix} 2 & 3 \\ -2 & 0 \end{vmatrix} = 0 + 6 = 6$$

$$A_{21} = - \begin{vmatrix} -1 & 2 \\ 0 & 1 \end{vmatrix} = -(-1 - 0) = 1$$

$$A_{22} = \begin{vmatrix} 1 & 2 \\ -2 & 1 \end{vmatrix} = 1 + 4 = 5$$

$$A_{23} = - \begin{vmatrix} 1 & -1 \\ -2 & 0 \end{vmatrix} = -(0 - 2) = 2$$

$$A_{31} = \begin{vmatrix} -1 & 2 \\ 3 & 5 \end{vmatrix} = -5 - 6 = -11$$

$$A_{32} = -\begin{vmatrix} 1 & 2 \\ 2 & 5 \end{vmatrix} = -(5 - 4) = -1$$

$$A_{33} = \begin{vmatrix} 1 & -1 \\ 2 & 3 \end{vmatrix} = 3 + 2 = 5$$

$$\text{Hence, } \text{adj}A = \begin{bmatrix} A_{11} & A_{21} & A_{31} \\ A_{12} & A_{22} & A_{32} \\ A_{13} & A_{23} & A_{33} \end{bmatrix} = \begin{bmatrix} 3 & 1 & -11 \\ -12 & 5 & -1 \\ 6 & 2 & 5 \end{bmatrix}$$

**Q. 11.** If  $A = \begin{bmatrix} 2 & -3 & 5 \\ 3 & 2 & -4 \\ 1 & 1 & -2 \end{bmatrix}$ , find  $A^{-1}$ . Using  $A^{-1}$  solve the system of equations

$$2x - 3y + 5z = 11$$

$$3x + 2y - 4z = -5$$

$$x + y - 2z = -3$$

**Ans.**  $A = \begin{bmatrix} 2 & -3 & 5 \\ 3 & 2 & -4 \\ 1 & 1 & -2 \end{bmatrix}$

$$\therefore |A| = 2(-4 + 4) + 3(-6 + 4) + 5(3 - 2) = 0 - 6 + 5 = -1 \neq 0$$

Now,

$$A_{11} = 0, A_{12} = 2, A_{13} = 1$$

$$A_{21} = -1, A_{22} = -9, A_{23} = -5$$

$$A_{31} = 2, A_{32} = 23, A_{33} = 13$$

$$A^{-1} = \frac{1}{|A|} (\text{adj}A) = - \begin{bmatrix} 0 & -1 & 2 \\ 2 & -9 & 23 \\ 1 & -5 & 13 \end{bmatrix}$$

$$= \begin{bmatrix} 0 & 1 & -2 \\ -2 & 9 & -23 \\ -1 & 5 & -13 \end{bmatrix} \quad \dots(i)$$

Now, the given system of equations can be written in the form of  $AX = B$ , where

$$A = \begin{bmatrix} 2 & -3 & 5 \\ 3 & 2 & -4 \\ 1 & 1 & -2 \end{bmatrix}, X = \begin{bmatrix} x \\ y \\ z \end{bmatrix} \text{ and } B = \begin{bmatrix} 11 \\ -5 \\ -3 \end{bmatrix}$$

The solution of the system of equations is given by  $X = A^{-1}B$ .

$$X = A^{-1}B$$

$$\Rightarrow \begin{bmatrix} x \\ y \\ z \end{bmatrix} = \begin{bmatrix} 0 & 1 & -2 \\ -2 & 9 & -23 \\ -1 & 5 & -13 \end{bmatrix} \begin{bmatrix} 11 \\ -5 \\ -3 \end{bmatrix} \quad [\text{Using (1)}]$$

$$= \begin{bmatrix} 0 - 5 + 6 \\ -22 - 45 + 69 \\ -11 - 25 + 39 \end{bmatrix} = \begin{bmatrix} 1 \\ 2 \\ 3 \end{bmatrix}$$

Hence,  $x=1$ ,  $y=2$ , and  $z=3$ .

**12. Solve the system of equations using Cramer's Rule.**

$$x - 10y = 4$$

$$2x + y = 8$$

$$x = \frac{D_x}{D} = \frac{\begin{vmatrix} 4 & -10 \\ 8 & 1 \end{vmatrix}}{\begin{vmatrix} 1 & -10 \\ 2 & 1 \end{vmatrix}}$$

$$= \frac{4(1) - (-10)8}{1(1) - (1-10)2} = \frac{4 + 80}{1 + 20} = \frac{84}{21} = 4$$

$$y = \frac{D_y}{D} = \frac{\begin{vmatrix} 1 & 4 \\ 2 & 8 \end{vmatrix}}{\begin{vmatrix} 1 & -10 \\ 2 & 1 \end{vmatrix}}$$

$$= \frac{1(8) - 2(4)}{1(1) - (-10)2} = \frac{8 - 8}{1 + 20} = \frac{0}{21} = 0$$

Hence the solution of the system is (4,0).

**Q.13. Solve the equations using Cramer's rule.**

$$1.25x + 5y = -20$$

$$3x - 3y = 27$$

Solving the system of equations using the Cramer's rule, we get

$$a = \frac{\begin{vmatrix} -20 & 5 \\ 27 & -3 \end{vmatrix}}{\begin{vmatrix} 1.25 & 5 \\ 3 & -3 \end{vmatrix}} = \frac{-20(-3) - 5(27)}{1.25(-3) - 5(3)}$$

$$a = \frac{60 - 135}{-3.75 - 15} = \frac{-75}{-18.75}$$

$$a = 4$$

Using Cramer's Rule,

$$b = \frac{\begin{vmatrix} 1.25 & -20 \\ 3 & 27 \end{vmatrix}}{\begin{vmatrix} 1.25 & 5 \\ 3 & -3 \end{vmatrix}} = \frac{1.25(27) - (-20)(3)}{1.25(-3) - 5(3)}$$

$$b = \frac{33.75 + 60}{-3.75 - 15} = \frac{93.75}{-18.75}$$



$$b = -5$$

Thus, the solution is  $(4, -5)$ .

**Q. 14.** If area of triangle is 35 square units with vertices  $(2, -6)$ ,  $(5, 4)$  and  $(k, 4)$ . Then  $k$  is?

**Ans.** The area of the triangle with vertices  $(2, -6)$ ,  $(5, 4)$  and  $(k, 4)$  is given by the relation.

$$\Delta = \frac{1}{2} \begin{vmatrix} 2 & -6 & 1 \\ 5 & 4 & 1 \\ k & 4 & 1 \end{vmatrix}$$

$$= \frac{1}{2} [2(4-4) + 6(5-k) + 1(20-4k)]$$

$$= \frac{1}{2} [30 - 6k + 20 - 4k] = \frac{1}{2} [50 - 10k]$$

$$= 25 - 5k$$

It is given that the area of the triangle is  $\pm 35$

Therefore, we have:

$$\Rightarrow 25 - 5k = \pm 35 \Rightarrow 5(5 - k) = \pm 35 \Rightarrow 5 - k = \pm 7$$

$$\text{When } 5 - k = -7, k = 5 + 7 = 12$$

$$\text{When } 5 - k = 7, k = 5 - 7 = -2$$

$$\text{Hence, } k = 12, -2$$

**Q. 15.** For the matrix  $A = \begin{bmatrix} 1 & 5 \\ 6 & 7 \end{bmatrix}$ , verify that

(i)  $(A + A')$  is a symmetric matrix

(ii)  $(A - A')$  is a skew symmetric matrix.

**Ans.**  $A' = \begin{bmatrix} 1 & 6 \\ 5 & 7 \end{bmatrix}$

$$(i) A + A' = \begin{bmatrix} 1 & 5 \\ 6 & 7 \end{bmatrix} + \begin{bmatrix} 1 & 6 \\ 5 & 7 \end{bmatrix} = \begin{bmatrix} 2 & 11 \\ 11 & 14 \end{bmatrix}$$

$$\therefore (A + A') = \begin{bmatrix} 2 & 11 \\ 11 & 14 \end{bmatrix} = A + A'$$

Hence,  $(A + A')$  is a symmetric matrix.

$$(ii) A - A' = \begin{bmatrix} 1 & 5 \\ 6 & 7 \end{bmatrix} - \begin{bmatrix} 1 & 6 \\ 5 & 7 \end{bmatrix} = \begin{bmatrix} 0 & -1 \\ 1 & 0 \end{bmatrix}$$

$$(A - A')' = \begin{bmatrix} 0 & 1 \\ -1 & 0 \end{bmatrix} = -\begin{bmatrix} 0 & -1 \\ 1 & 0 \end{bmatrix} = -(A - A')$$

Hence,  $(A - A')$  is a skew-symmetric matrix.

### Long Questions

$$\text{Q.1 If } A = \begin{bmatrix} 1 & 2 & -3 \\ 5 & 0 & 2 \\ 1 & -1 & 1 \end{bmatrix}, B = \begin{bmatrix} 3 & -1 & 2 \\ 4 & 2 & 5 \\ 2 & 0 & 3 \end{bmatrix} \text{ and } C = \begin{bmatrix} 4 & 1 & 2 \\ 0 & 3 & 2 \\ 1 & -2 & 3 \end{bmatrix}$$

then compute  $(A+B)$  and  $(B-C)$ . Also, verify that  $A+(B-C)=(A+B)-C$

$$\text{Ans. } A + B = \begin{bmatrix} 1 & 2 & -3 \\ 5 & 0 & 2 \\ 1 & -1 & 1 \end{bmatrix} + \begin{bmatrix} 3 & -1 & 2 \\ 4 & 2 & 5 \\ 2 & 0 & 3 \end{bmatrix}$$

$$= \begin{bmatrix} 1+3 & 2-1 & -3+2 \\ 5+4 & 0+2 & 2+5 \\ 1+2 & -1+0 & 1+3 \end{bmatrix} = \begin{bmatrix} 4 & 1 & -1 \\ 9 & 2 & 7 \\ 3 & -1 & 4 \end{bmatrix}$$

$$B - C = \begin{bmatrix} 3 & -1 & 2 \\ 4 & 2 & 5 \\ 2 & 0 & 3 \end{bmatrix} - \begin{bmatrix} 4 & 1 & 2 \\ 0 & 3 & 2 \\ 1 & -2 & 3 \end{bmatrix}$$

$$= \begin{bmatrix} 3-4 & -1-1 & 2-2 \\ 4-0 & 2-3 & 5-2 \\ 2-1 & 0-(-2) & 3-3 \end{bmatrix} = \begin{bmatrix} -1 & -2 & 0 \\ 4 & -1 & 3 \\ 1 & 2 & 0 \end{bmatrix}$$

$$A + (B - C) = \begin{bmatrix} 1 & 2 & -3 \\ 5 & 0 & 2 \\ 1 & -1 & 1 \end{bmatrix} + \begin{bmatrix} -1 & -2 & 0 \\ 4 & -1 & 3 \\ 1 & 2 & 0 \end{bmatrix}$$

$$= \begin{bmatrix} 1+(-1) & 2+(-2) & -3+0 \\ 5+4 & 0+(-1) & 2+3 \\ 1+1 & -1+2 & 1+0 \end{bmatrix} = \begin{bmatrix} 0 & 0 & -3 \\ 9 & -1 & 5 \\ 2 & 1 & 1 \end{bmatrix}$$

$$(A + B) - C = \begin{bmatrix} 4 & 1 & -1 \\ 9 & 2 & 7 \\ 3 & -1 & 4 \end{bmatrix} - \begin{bmatrix} 4 & 1 & 2 \\ 0 & 3 & 2 \\ 1 & -2 & 3 \end{bmatrix}$$

$$= \begin{bmatrix} 4-4 & 1-1 & -1-2 \\ 9-0 & 2-3 & 7-2 \\ 3-1 & -1-(-2) & 4-3 \end{bmatrix} = \begin{bmatrix} 0 & 0 & -3 \\ 9 & -1 & 5 \\ 2 & 1 & 1 \end{bmatrix}$$

Hence we have verified that  $A + (B - C) = (A + B) - C$

**Q.3** Solve the system of equations using Cramer's rule.

$$2x + 2y - z = 4$$

$$x + 2y + z = 14$$

$$x + 4y + z = 8$$

**Ans.** Step 1 : First we have to find the values of the determinants  $D$ ,  $D_x$ ,  $D_y$  and  $D_z$ .

$$D = \begin{vmatrix} 2 & 2 & -1 \\ 1 & 2 & 1 \\ 1 & 4 & 1 \end{vmatrix}$$

$$= 2(2 - 4) - 1(2 + 4) - 1(2 + 2) = -6$$

$$D_x = \begin{vmatrix} 4 & 2 & -1 \\ 14 & 2 & 1 \\ 8 & 4 & 1 \end{vmatrix}$$

$$= 4(2 - 4) - 2(14 - 8) - 1(56 - 16) = -60$$

**Step 2 :** The other determinants  $D_y$  and  $D_z$  are :

$$D_y = \begin{vmatrix} 2 & 4 & -1 \\ 1 & 14 & 1 \\ 1 & 8 & 1 \end{vmatrix}$$

$$= 2(14 - 8) - 4(1 - 1) - 1(8 - 14) = 18$$

$$D_z = \begin{vmatrix} 2 & 2 & 4 \\ 1 & 2 & 14 \\ 1 & 4 & 8 \end{vmatrix}$$

$$= 2(16 - 56) - 1(16 - 16) + (28 - 8) = -60$$

**Step 3 :** Apply Cramer's rule

$$x = \frac{D_x}{D} = \frac{-60}{-6} = 10$$

$$y = \frac{D_y}{D} = \frac{18}{-6} = -3$$

$$z = \frac{D_z}{D} = \frac{-60}{-6} = 10$$

Hence the solution of the system is  $(10, -3, 10)$

**Q3. Solve the following system of equation using Cramer's Rule.**

$$5x - 7y + z = 11,$$

$$6x - 8y - z = 15$$

**and**  $3x + 2y - 6z = 7$

**Sol.** The given system of equation is

$$5x - 7y + z = 11$$

$$6x - 8y - z = 15$$

$$3x + 2y - 6z = 7$$

$$\begin{aligned}\therefore D &= \begin{vmatrix} 5 & -7 & 1 \\ 6 & -8 & -1 \\ 3 & 2 & -6 \end{vmatrix} = 5(48+2) + 7(-36+3) + 1(12+24) \\ &= 250 - 231 + 36 \\ &= 55\end{aligned}$$

$$\begin{aligned}D_1 &= \begin{vmatrix} 11 & -7 & 1 \\ 15 & -8 & -1 \\ 7 & 2 & -6 \end{vmatrix} = 11(48+2) + 7(-90+7) + 1(30+56) \\ &= 550 - 581 + 86 \\ &= 55\end{aligned}$$

$$\begin{aligned}D_2 &= \begin{vmatrix} 5 & 11 & 1 \\ 6 & 15 & -1 \\ 3 & 7 & -6 \end{vmatrix} = 5(-90+7) - 11(-36+3) + 1(42-45) \\ &= -415 + 363 - 3 \\ &= -55\end{aligned}$$

$$\begin{aligned}D_3 &= \begin{vmatrix} 5 & -7 & 11 \\ 6 & -8 & 15 \\ 3 & 2 & 7 \end{vmatrix} = 5(-56-30) + 7(42-45) + 11(12+24) \\ &= -430 - 21 + 396 \\ &= -55\end{aligned}$$

$$\text{So by Cramer's Rule } x = \frac{D_1}{D} = \frac{55}{55} = 1$$

$$y = \frac{D_2}{D} = \frac{-55}{55} = -1$$

$$\text{and } z = \frac{D_3}{D} = \frac{-55}{55} = -1$$

Q.4.  $A = \begin{bmatrix} 4 & 1 & 5 \\ 0 & 7 & 3 \\ 0 & 0 & 5 \end{bmatrix}$

**Find the eigen value and eigen vector of above.**

**Sol.** Characteristic equation:

$$(4 + \lambda)(7 - \lambda)(5 - \lambda) = 0$$

$$\Rightarrow \lambda = 4, 7, 5$$

• **Eigen Vectors:**

The eigen vector  $X$  of a matrix  $A$ , corresponding to eigen value  $\lambda$  is given by the non-zero solutions of the equation  $[A - \lambda I]X = 0$

Eg:  $A = \begin{bmatrix} 4 & 1 & 5 \\ 0 & 7 & 3 \\ 0 & 0 & 5 \end{bmatrix}$

Characteristic equation:

$$(4 - \lambda)(7 - \lambda)(5 - \lambda) = 0$$

$$\Rightarrow \lambda = 4, 7, 5$$

**Eigen Vector, corresponding to eigen value 4:**

$$[A - \lambda I]X = 0$$

$$\Rightarrow \left( \begin{bmatrix} 4 & 1 & 5 \\ 0 & 7 & 3 \\ 0 & 0 & 5 \end{bmatrix} - 4 \begin{bmatrix} 1 & 0 & 0 \\ 0 & 1 & 0 \\ 0 & 0 & 1 \end{bmatrix} \right) \begin{bmatrix} x_1 \\ x_2 \\ x_3 \end{bmatrix} = \begin{bmatrix} 0 \\ 0 \\ 0 \end{bmatrix}$$

$$\Rightarrow \begin{bmatrix} 0 & 1 & 5 \\ 0 & 3 & 3 \\ 0 & 0 & 1 \end{bmatrix} \begin{bmatrix} x_1 \\ x_2 \\ x_3 \end{bmatrix} = \begin{bmatrix} 0 \\ 0 \\ 0 \end{bmatrix}$$

$$\Rightarrow x_2 + 5x_3 = 0$$

$$3x_2 + 3x_3 = 0$$

$$x_3 = 0$$

$$\Rightarrow x_3 = 0$$

$$\Rightarrow x_2 = 0$$

Let

$$x_1 = k$$

So Eigen vector

$$\begin{bmatrix} x_1 \\ x_2 \\ x_3 \end{bmatrix} = \begin{bmatrix} k \\ 0 \\ 0 \end{bmatrix}$$

**Eigen Vector, corresponding to Eigen value 7:**

$$[A - \lambda I]x = 0$$

$$\Rightarrow \left( \begin{bmatrix} 4 & 1 & 5 \\ 0 & 7 & 3 \\ 0 & 0 & 5 \end{bmatrix} - 7 \begin{bmatrix} 1 & 0 & 0 \\ 0 & 1 & 0 \\ 0 & 0 & 1 \end{bmatrix} \right) \begin{bmatrix} x_1 \\ x_2 \\ x_3 \end{bmatrix} = \begin{bmatrix} 0 \\ 0 \\ 0 \end{bmatrix}$$

$$\Rightarrow \begin{bmatrix} -3 & 1 & 5 \\ 0 & 0 & 3 \\ 0 & 0 & -2 \end{bmatrix} \begin{bmatrix} x_1 \\ x_2 \\ x_3 \end{bmatrix} = \begin{bmatrix} 0 \\ 0 \\ 0 \end{bmatrix}$$

$$\Rightarrow -3x_1 + x_2 + 5x_3 = 0$$

$$3x_3 = 0$$

$$-2x_3 = 0$$

$$\Rightarrow x_3 = 0$$

$$\Rightarrow -3x_1 + x_2 = 0$$



Say,  $x_1 = k$

$$\Rightarrow x_2 = 3k$$

So eigen vector

$$\begin{bmatrix} x_1 \\ x_2 \\ x_3 \end{bmatrix} = \begin{bmatrix} k \\ 3k \\ 0 \end{bmatrix}$$

**Q. 5.** Solve the equation by Cramer's Rule.

$$x + y + z = 6$$

$$x - y + z = 2$$

$$2x + y - z = 1$$

**Sol.**  $\Delta = \begin{vmatrix} 1 & 1 & 1 \\ 1 & -1 & 1 \\ 2 & 1 & -1 \end{vmatrix} = 6$

$$\Delta_1 = \begin{vmatrix} 6 & 1 & 1 \\ 2 & -1 & 1 \\ 1 & 1 & -1 \end{vmatrix} = 6$$

$$\Delta_2 = \begin{vmatrix} 1 & 6 & 1 \\ 1 & 2 & 1 \\ 2 & 1 & -1 \end{vmatrix} = 12$$

$$\Delta_3 = \begin{vmatrix} 1 & 1 & 6 \\ 1 & -1 & 2 \\ 2 & 1 & 1 \end{vmatrix} = 18$$

So,  $x = \frac{\Delta_1}{\Delta} = \frac{6}{6} = 1$

$$y = \frac{\Delta_2}{\Delta} = \frac{12}{6} = 2$$

$$z = \frac{\Delta_3}{\Delta} = \frac{18}{6} = 3$$

**Q6. Find the value of x and y through inverse method.**

$$5x + 2y = 3$$

$$3x + 2y = 5$$

**Sol.** In Matrix form:

$$\begin{bmatrix} 5 & 2 \\ 3 & 2 \end{bmatrix} \begin{bmatrix} x \\ y \end{bmatrix} = \begin{bmatrix} 3 \\ 5 \end{bmatrix}$$

$$A.X = B$$

$$A^{-1} = \frac{AdjA}{|A|}$$

$$AdjA = \begin{bmatrix} 2 & -2 \\ -3 & 5 \end{bmatrix}$$

$$|A| = 4$$

So,  $A^{-1} = \frac{1}{4} \begin{bmatrix} 2 & -2 \\ -3 & 5 \end{bmatrix}$

$$X = A^{-1}B$$

$$\Rightarrow \begin{bmatrix} x \\ y \end{bmatrix} = \frac{1}{4} \begin{bmatrix} 2 & -2 \\ -3 & 5 \end{bmatrix} \begin{bmatrix} 3 \\ 5 \end{bmatrix}$$

$$\Rightarrow \begin{bmatrix} x \\ y \end{bmatrix} = \frac{1}{4} \begin{bmatrix} -4 \\ 16 \end{bmatrix} = \begin{bmatrix} -1 \\ 4 \end{bmatrix}$$

$$\Rightarrow x = -1, y = 4$$

**Q7. Find the inverse of square matrix.**

$$A = \begin{bmatrix} 1 & -4 \\ 7 & 9 \end{bmatrix}$$

**Sol.**  $|A| = \begin{vmatrix} 1 & -4 \\ 7 & 9 \end{vmatrix}$

$$= 1 \times 9 - (-4) \times 7 = 37$$

$$C = \begin{bmatrix} 9 & -7 \\ 4 & 1 \end{bmatrix}$$

$$\text{adj}A = C^T$$

$$\text{adj}A = \begin{bmatrix} 9 & 4 \\ -7 & 1 \end{bmatrix}$$

So,  $A^{-1} = \frac{1}{37} \begin{bmatrix} 9 & 4 \\ -7 & 1 \end{bmatrix}$

$$= \begin{bmatrix} \frac{9}{37} & \frac{4}{37} \\ -\frac{7}{37} & \frac{1}{37} \end{bmatrix}$$

**Eg:**  $A = \begin{bmatrix} 4 & 3 & 5 \\ 2 & 3 & 6 \\ 1 & 4 & 9 \end{bmatrix}$

$$|A| = \begin{vmatrix} 4 & 3 & 5 \\ 2 & 3 & 6 \\ 1 & 4 & 9 \end{vmatrix}$$

$$= 1$$

$$C = \begin{bmatrix} 3 & -12 & 5 \\ -7 & 31 & -13 \\ -7 & -14 & 6 \end{bmatrix}$$

$$\text{adj}A = C^T = \begin{bmatrix} 3 & -7 & -7 \\ -12 & 31 & -14 \\ 5 & -13 & 6 \end{bmatrix}$$

$$A^{-1} = \frac{1}{1} \begin{bmatrix} 3 & -7 & -7 \\ -12 & 31 & -14 \\ 5 & -13 & 6 \end{bmatrix}$$

$$= \begin{bmatrix} 3 & -7 & -7 \\ -12 & 31 & -14 \\ 5 & -13 & 6 \end{bmatrix}$$

**Q8.**  
**Sol.**

If  $A = \begin{bmatrix} 2 & 3 \\ 5 & -2 \end{bmatrix}$ , show that  $A^{-1} = \frac{1}{19}A$

We have

$$|A| = \begin{vmatrix} 2 & 3 \\ 5 & -2 \end{vmatrix} = -4 - 15 = -19 \neq 0$$

Therefore, A is invertible. Let  $C_{ij}$  be the cofactor of  $a_{ij}$  in

$A = [a_{ij}]$  then,

$$C_{11} = -2, C_{12} = -5, C_{21} = -3 \text{ and } C_{22} = 2$$

$$\therefore \text{adj}A = \begin{bmatrix} -2 & -5 \\ -3 & 2 \end{bmatrix}^T = \begin{bmatrix} -2 & -3 \\ -5 & 2 \end{bmatrix}$$

$$\Rightarrow A^{-1} = \frac{1}{|A|} \text{adj}A = \frac{1}{-19} \begin{bmatrix} -2 & -3 \\ -5 & 2 \end{bmatrix}$$

$$= \frac{1}{19} \begin{bmatrix} 2 & 3 \\ 5 & -2 \end{bmatrix} = \frac{1}{19}A$$

**Q.9.** If A and B are two invertible matrices, then find inverse of matrix AB.

**Sol.**

$\therefore$  A and B are invertible

So  $A^{-1}$  and  $B^{-1}$  are both exists.

$$\text{Now, } (AB)(B^{-1}A^{-1}) = A(BB^{-1})A^{-1} \quad \{BB^{-1} = I\}$$

$$= AIA^{-1}$$

$$= (AA^{-1}) = I \quad \{\because AI = A\}$$

$$\text{and } (B^{-1}A^{-1})(AB) = B^{-1}(A^{-1}A)B$$

$$= B^{-1}IB$$

$$= B^{-1}B = I$$

$$(AB)(B^{-1}A^{-1}) = I(B^{-1}A^{-1})(AB)$$

$$\Rightarrow AB \text{ is invertible.}$$

$$\Rightarrow (AB)^{-1} = B^{-1}A^{-1}$$

**Q10. (i) Show that the points  $(a, b+c), (b, c+a)$  and  $(c, a+b)$  are collinear.**

**Sol.** We have

$$\Delta = \begin{vmatrix} a & b+c & 1 \\ b & c+a & 1 \\ c & a+b & 1 \end{vmatrix}$$

[Applying  $c_2 \rightarrow c_2 + c_1$ ]

$$\begin{vmatrix} a & a+b+c & 1 \\ b & b+c+a & 1 \\ c & c+a+b & 1 \end{vmatrix}$$

$$\Rightarrow \Delta = (a+b+c) \begin{vmatrix} a & 1 & 1 \\ b & 1 & 1 \\ c & 1 & 1 \end{vmatrix} \quad \text{taking } (a+b+c) \text{ common from } c_2$$

$$\Delta = (a+b+c) \times 0 = 0$$

[ $\because c_2$  and  $c_3$  are identical]

Hence, the given points are collinear.

**Q10. (ii) If the two points  $(a_1, b_1), (a_2, b_2)$  and  $(a_1 + a_2, b_1 + b_2)$  are collinear, show that  $a_1 b_2 = a_2 b_1$**

**Sol.** The given points are collinear

$$\therefore \begin{vmatrix} a_1 & b_1 & 1 \\ a_2 & b_2 & 1 \\ a_1 + a_2 & b_1 + b_2 & 1 \end{vmatrix} = 0$$

[Applying  $R_2 \rightarrow R_2 - R_1, R_3 \rightarrow R_3 - R_1$ ]

$$\Rightarrow \begin{vmatrix} a_1 & b_1 & 1 \\ a_2 - a_1 & b_2 - b_1 & 0 \\ a_2 & b_2 & 0 \end{vmatrix} = 0$$

$$\Rightarrow \begin{vmatrix} a_1 & b_1 \\ a_2 - a_1 & b_2 - b_1 \end{vmatrix} = 0$$

[expanding along  $c_3$ ]

$$\Rightarrow \begin{vmatrix} a_1 & b_1 \\ a_2 & b_2 \end{vmatrix} = 0$$

[applying  $R_2 \rightarrow R_2 + R_1$ ]

$$\Rightarrow a_1 b_2 - a_2 b_1 = 0$$

$$\Rightarrow a_1 b_2 = a_2 b_1$$

□□□

## UNIT-IV

### Co-ordinate Geometry

#### Very Short Questions

**Q1. What is the standard form of a quadratic equation?**

**Sol.**  $ax^2 + bx + c = 0$

The quadratic is on the left. 0 is on the right.

**Q2. How many roots has a quadratic?**

**Sol.** Always two

**Q3. Find the value of the discriminant of the equation, and tell how many real and distinct roots the equation has.**

$$x^2 - 6x + 5 = 0$$

**Sol.** The expression for the discriminant is  $b^2 - 4ac$

Here,  $a=1$ ,  $b=-6$  and  $c=5$ .

Evaluate the expression for the discriminant.

$$(-6)^2 - 4(1)(5)$$

$$= 36 - 20 = 16$$

Since the discriminant is positive, there are two real number roots.

**Q4.  $9m^2 + 24m + 16 = 0$**

**Sol.** The expression for the discriminant is

Here,  $a=9$ ,  $b=24$ , and  $c=16$ .

Evaluate the expression for the discriminant.

$$= 576 - 576 = 0$$

Since the discriminant is zero, there is one real number root

**Q5.  $3p^2 - p + 2 = 0$**

**Sol.** The expression for the discriminant is



$$b^2 - 4ac$$

Here,  $a = 3$ ,  $b = -1$  and  $c = 2$ .

Evaluate the expression for the discriminant.

$$(-1)^2 - 4(3)(2)$$

$$= 1 - 24$$

$$= -23$$

Since the discriminant is negative, there are no real number roots.

**Q6. Write an equation using the formula for the discriminant.**

**Sol.**  $(24)^2 - 4(4)(k) = 0$

$$576 - 16k = 0$$

$$-16k = -576$$

$$k = 36$$

**Q7. Find the quadratic equation whose roots are 5 and 3.**

**Sol.** Given that, roots of the equation are 5 and 3.

Therefore, the required quadratic equation is

$$x^2 - (a + b)x + (a * b) = 0$$

Substituting the values of roots in the above equation we get the required equation.

$$x^2 - (5 + 3)x + (5 * 3) = 0$$

$$x^2 - 8x + 15 = 0$$

**Q8. Find the solution for following quadratic equation:**

$$x^2 - 5x = 0$$

**Sol.**  $x(x - 5) = 0$

$$x = 0 \text{ or } x - 5 = 0$$

$$x = 0 \text{ or } x = 5$$

**Q9.**  $x^2 - 4 = 0$

**Sol.**  $x^2 - 4 = 0$

$$b^2 - 4ac$$

Here,  $a = 3$ ,  $b = -1$  and  $c = 2$ .

Evaluate the expression for the discriminant.

$$(-1)^2 - 4(3)(2)$$

$$= 1 - 24$$

$$= -23$$

Since the discriminant is negative, there are no real number roots.

**Q6. Write an equation using the formula for the discriminant.**

**Sol.**  $(24)^2 - 4(4)(k) = 0$

$$576 - 16k = 0$$

$$-16k = -576$$

$$k = 36$$

**Q7. Find the quadratic equation whose roots are 5 and 3.**

**Sol.** Given that, roots of the equation are 5 and 3.

Therefore, the required quadratic equation is

$$x^2 - (a + b)x + (a * b) = 0$$

Substituting the values of roots in the above equation we get the required equation.

$$x^2 - (5 + 3)x + (5 * 3) = 0$$

$$x^2 - 8x + 15 = 0$$

**Q8. Find the solution for following quadratic equation:**

$$x^2 - 5x = 0$$

**Sol.**  $x(x - 5) = 0$

$$x = 0 \text{ or } x - 5 = 0$$

$$x = 0 \text{ or } x = 5$$

**Q9.**  $x^2 - 4 = 0$

**Sol.**  $x^2 - 4 = 0$

$$(x-2)(x+2)=0$$

$$x-2=0 \text{ or } x+2=0$$

$$x=2 \text{ or } x=-2$$

**Q10.**  $(x+2)(x+3)=12$

**Sol.**  $(x+2)(x+3)=12$

$$x^2+5x+6=12$$

$$x^2+5x-6=0$$

$$(x+6)(x-1)=0$$

$$x+6=0 \text{ or } x-1=0$$

$$x=-6 \text{ or } x=1$$

**Q11.**  $x^2-3=2x$

**Sol.**  $x^2-3=2x$

$$x^2-2x-3=0$$

$$(x-3)(x+1)=0$$

$$x-3=0 \text{ or } x+1=0$$

$$x=3 \text{ or } x=-1$$

**Q12.**  $x^2-4=0$

**Sol.**  $x^2=4$

$$\sqrt{x^2}=\pm\sqrt{4}$$

$$x=\pm 2$$

**Q13.** Find the coordinates (x,y) of the midpoint of the segment that connects the points (3,-4) and (-8,6).

**Sol.**  $[((x_1+x_2)/2), ((y_1+y_2)/2)] = [((3+(-8))/2), ((-4+6)/2)] = (-.5, 1)$

**Q14.** Write the equation of the line that passes through the point (2,-3) and has a slope of (1/2). Use slope intercept form.

**Sol.** Write the general equation used for slope intercept form

$$Y = mx + c$$

Now put the given information.

$$-3 = (1/2)2 = c$$

$$-3 = 1 + c$$

$$-4 = c$$

Now all you have to do is write the equation of the line in gradient-intercept form:

$$y = 5x - 4$$

**Q15. Find the distance between (-2,3) and (8,-1).**

**Sol.** Distance between two points

$$D = \sqrt{(x_2 - x_1)^2 + (y_2 - y_1)^2}$$

$$D = \sqrt{(8 - (-2))^2 + (-1 - 3)^2}$$

$$D = 2(\sqrt{29})$$

**Q16. What is the slope in equation  $y - 3 = 4(x - 2)$**

**Sol.** Compare the equation with slope form

$$y - y_1 = m(x - x_1)$$

we can see right away that the slope is 4 because the 4 is in the location of the m.

**Q17. Find the equation of a straight line with gradient 4 and y-intercept -1.**

**Sol.** gradient (m) = 4

$$y - \text{intercept (c)} = -1$$

**Equations of a Straight Line Formula:  $y = mx + c$**

$$y = 4x - 1$$

**Q18. Find area of triangle whose corners are (a,0) , (0,b) and (x,y).**

$$\text{Sol. Area} = \frac{1}{2} [x_1(y_2 - y_3) + x_2(y_3 - y_1) + x_3(y_1 - y_2)]$$

$$= \frac{1}{2} [a(b - y) + 0 + x(0 - b)]$$

$$= \frac{1}{2} [b(a - x) - ay]$$

**Q19. Locus of the point for which distance from X-axis is equal to the distance from Y-axis.**

**Sol.** Let the coordinates of the point are (h,k)

By the given condition:  $h = k$

So locus of P:  $x = y$

**Q20. Locus of the point for which distance from (3,1) and distance from (-1,2) is always equal.**

**Sol.** Let the coordinates of the point be P(h,k)

Distance of P from (3,1) = Distance of P from (-1,2)

$$\Rightarrow \sqrt{(h-3)^2 + (k-1)^2} = \sqrt{(h+1)^2 + (k-2)^2}$$

$$= h^2 - 6h + 9 + k^2 - 2k + 1 = h^2 + 2h + 1 + k^2 - 4k + 4$$

$$\Rightarrow 8h - 2k - 5 = 0$$

So locus P:  $(8x - 2y - 5 = 0)$

**Q21. Find the sum and product of the root of the equation**

$$x^2 - x - 12 = 0$$

**Sol.**  $a = 1, b = -1, c = -12$

$$\alpha + \beta = \frac{-b}{a} = 1$$

$$\alpha\beta = \frac{c}{a} = -12$$

**Q22. Find the quadratic equations whose roots are 8,-3.**

**Sol.** Sum =  $8 + (-3) = 5$

Product =  $8 \times -3 = -24$

**Q23. Find the quadratic equation, whose one root is  $3 + \sqrt{2}$**

**Sol.** Since  $3 + \sqrt{2}$  is real and its irrational. So other root be its conjugate

$$3 - \sqrt{2}$$

$$\alpha + \beta = 6$$

$$\alpha\beta = 7$$

So quadratic equation  $x^2 - 6x + 7 = 0$



**Q24.** Find distance between  $P(a \cos \alpha, a \sin \alpha)$  and  $Q(a \cos \phi, a \sin \phi)$ .

**Sol.**

$$\begin{aligned}
 PQ &= \sqrt{(a \cos \phi - a \cos \alpha)^2 + (a \sin \phi - a \sin \alpha)^2} \\
 &= a \sqrt{(\cos \phi - \cos \alpha)^2 + (\sin \phi - \sin \alpha)^2} \\
 &= a \sqrt{\left(2 \sin \frac{\phi - \alpha}{2} \sin \frac{\alpha - \phi}{2}\right)^2 + \left(2 \cos \frac{\phi + \alpha}{2} \sin \frac{\phi - \alpha}{2}\right)^2} \\
 &= 2a \sin \frac{\alpha - \phi}{2} \sqrt{\sin^2 \frac{\alpha + \phi}{2} + \cos^2 \frac{\phi + \alpha}{2}} \\
 &= 2a \sin \frac{\alpha - \phi}{2}
 \end{aligned}$$

**Q25.** Show that points (1,1), (-2,7) and (3,-3) are on a straight line.

**Sol.** Let  $A(1,1), B(-2,7), C(+3,-3)$

$$\begin{aligned}
 AB &= \sqrt{(-2-1)^2 + (7-1)^2} \\
 AB &= 3\sqrt{5} \\
 BC &= \sqrt{(3+2)^2 + (-3-7)^2} = 5\sqrt{5} \\
 AC &= \sqrt{(3-1)^2 + (-3-1)^2} = 2\sqrt{5} \\
 \therefore AB + AC &= 3\sqrt{5} + 2\sqrt{5} \\
 &= 5\sqrt{5} \\
 &= BC
 \end{aligned}$$

So A, B, C lies on a straight line.

**Q26.** The line segment connecting point A(1,-2) and B(4,7), inner partitioned at point C(2,1) in which ratio?

**Sol.**  $x = \frac{mx_2 + nx_1}{m+n}$

$$\Rightarrow 2 = \frac{4m+n}{m+n}$$

$$\Rightarrow 2m+2n = 4m+n$$

$$\Rightarrow n = 2m \Rightarrow \frac{m}{n} = \frac{1}{2}$$

**Q27. Equations of a Straight Line Formula:  $y - y_1 = m(x - x_1)$  or  $y = mx + b$ .**

**1. Find the equation of a straight line**

(a) with gradient 4 and y-intercept -1

(b) passing through the origin with gradient -3

(c) with gradient 4 and x-intercept -5

(d) passing through (2,5) and (-1,1)

(e) passing through (0,1) and (-4,-2)

(f) parallel to the x-axis and passing through (2,3)

(g) parallel to the y-axis and passing through (-1,2)

(h) with gradient -2 and passing through the midpoint of (5,-2) and (-3,4)

**Sol.** (a)  $y = 4x - 1$

(b)  $y = -3x$

(c)  $y = 4x + 20$

(d)  $4x - 3y + 7 = 0$

(e)  $3x - 4y + 4 = 0$

(f)  $y = 3$

(g)  $x = -1$

(h)  $2x + y - 3 = 0$

**Q28. Find the equation of a circle whose centre is (3,-2) and which passes through the intersection of the line**

$$5x + 7y = 3 \text{ and } 2x + 3y = 7$$

**Sol.** Given lines are



$$5x + 7y - 3 = 0 \quad (1)$$

$$2x - 3y - 7 = 0 \quad (2)$$

Solving (1) and (2) simultaneously, we get

$$x = 2, y = -1$$

The point of intersection, say P of given lines is (2, -1).

Since the centre of the circle is C(3, -2) and it passes through the point P(2, -1)

$$\text{Its radius} = CP = \sqrt{(2-3)^2 + (-1+2)^2}$$

$$= \sqrt{1+1} = \sqrt{2}$$

∴ The equation of the circle is

$$(x-3)^2 + (y+2)^2 = (\sqrt{2})^2$$

$$x^2 + y^2 - 6x + 4y + 11 = 0$$

**Q29. Find the equation of a circle whose centre is (-2, 3) and radius is 4.**

**Sol.** Since the centre of the circle is (-2, 3) and its radius is 4, therefore, the equation of the circle is

$$(x - (-2))^2 + (y - 3)^2 = 4^2$$

$$(x + 2)^2 + (y - 3)^2 = 16$$

$$x^2 + 4x + 4 + y^2 - 6y + 9 = 16$$

$$x^2 + y^2 + 4x - 6y - 3 = 0$$

**Q30. Find the coordinate of focus, equation of directrix and the length of latus rectum of the parabola represented by the equation**

$$x^2 = -16y$$

**Sol.** The given equation is  $x^2 = -16y$

Compare with  $x^2 = -4ay$

$$\Rightarrow 4a = 16 \Rightarrow a = 4$$

The focus is  $(0, -4)$  and equation of directrix is  $y - 4 = 0$ .

The length of latus rectum  $= 4a = 16$

**Q31. Find the equation of parabola with vertex at  $(0,0)$  and focus at  $(-2,0)$ .**

**Sol.** Since the focus of the parabola is  $F(-2,0)$  which lies on X-axis, the X-axis is the axis of parabola.

Also, the vertex of parabola is at  $O(0,0)$

Therefore the parabola is

$$y^2 = -4ax \text{ with } a = 2$$

Hence required equation of parabola is

$$y^2 = -4 \times 2x \text{ i.e. } y^2 = -8x$$

**Q32. Find the equation of the line joining the point  $(2, -9)$  and the point of intersection of lines  $2x + 5y - 8 = 0$  and  $3x - 4y - 35 = 0$**

**Sol.** Solve the equations  $2x + 5y - 8 = 0$

$$3x - 4y - 35 = 0$$

We get  $x = 9, y = 2$

equation of the line joining the given point  $(2, -9)$  and the point of intersection  $(9, 2)$  is

$$y - (-9) = \frac{(-2) - (-9)}{9 - 2}(x - 2)$$

$$x - y - 11 = 0$$

which is the required equation.

**Q33. Prove that the lines  $2x - y + 9 = 0$  and  $x + 2y - 7 = 0$  are perpendicular to each other.**

**Sol.** The slope of the line  $2x - y + 9 = 0$  is

$$m_1 = \frac{\text{coff. of } x}{\text{coff. of } y} = \frac{-2}{(-1)} = 2 \quad (1)$$

similarly, slope of the other line  $x + 2y - 7 = 0$  is

$$m_2 = -\frac{\text{coeff. of } x}{\text{coeff. of } y} = -\frac{1}{2} \quad (2)$$

We know that if two lines are perpendicular if product of their slope is -1.

$$\text{Here } m_1 \times m_2 = 2 \times \left(-\frac{1}{2}\right) = -1$$

Hence the given lines are mutually perpendicular.

**Q34. Prove that the lines  $2x - y + 9 = 0$  and  $4x - 2y - 8 = 0$  are parallel.**

**Sol.** Equation of the first line is  $2x - y + 9 = 0$   
whose slope is

$$m_1 = -\frac{\text{coeff. of } x}{\text{coeff. of } y} = 2 \quad (1)$$

Similarly, equation of the other line is  $4x - 2y - 8 = 0$   
whose slope is

$$m_2 = -\frac{\text{coeff. of } x}{\text{coeff. of } y} = 2 \quad (2)$$

Hence  $m_1 = m_2$

### Short Questions

**Q1. Find the solution for following quadratic equation:**

$$x^2 - 4x - 8 = 0$$

**Sol.**  $x^2 - 4x = 8$

$$x^2 - 4x + 4 = 8 + 4$$

$$x^2 - 4x + 4 = 12$$

$$(x - 2)^2 = 12$$

$$(x-2)^2 = 12$$

$$\sqrt{(x-2)^2} = \pm\sqrt{12}$$

$$x-2 = \pm\sqrt{4 \cdot 3}$$

$$x-2 = \pm 2\sqrt{3}$$

$$x = 2 \pm 2\sqrt{3}$$

**Q2.**  $(x-2)^2 - 12 = 0$

**Sol.**  $(x-2)^2 = 12$

$$\sqrt{(x-2)^2} = \pm\sqrt{12}$$

$$x-2 = \pm\sqrt{4 \cdot 3}$$

$$x-2 = \pm 2\sqrt{3}$$

$$x = 2 \pm 2\sqrt{3}$$

Then the solution is  $x = 2 \pm 2\sqrt{3}$

**Q3.** Use the quadratic formula to solve this quadratic equation:

$$3x^2 + 5x - 8 = 0$$

**Sol.** We have  $a = 3$ ,  $b = 5$ ,  $c = -8$

Therefore, according to the formula:

$$\begin{aligned} x &= \frac{-5 \pm \sqrt{5^2 - 4 \cdot 3 \cdot (-8)}}{2 \cdot 3} \\ &= \frac{-5 \pm \sqrt{25 + 96}}{6} \\ &= \frac{-5 \pm \sqrt{121}}{6} \\ &= \frac{-5 \pm 11}{6} \end{aligned}$$

That is,

$$\begin{aligned}x &= \frac{-5+11}{6} \text{ or } \frac{-5-11}{6} \\&= \frac{6}{6} \text{ or } \frac{-16}{6} \\&= 1 \text{ or } \frac{-8}{3}.\end{aligned}$$

**Q4. Find equation of line which makes intercepts -3 and 2 on X-axis and y-axis respectively.**

**Sol.**  $\frac{x}{a} + \frac{y}{b} = 1$

$$\Rightarrow \frac{x}{-3} + \frac{y}{2} = 1$$

$$= 2x - 3y + 6 = 0 \text{ [Parth publication, page 84]}$$

**Q5. Find the equation of line passing through (-2,3) and with slope -4.**

**Sol.** Line equation passing through with slope m is:

$$y - y_1 = m(x - x_1)$$

$$y - 3 = -4(x + 2)$$

$$4x + y + 5 = 0$$

**Q6. Find the equation of line whose perpendicular distance from the origin is 5 and the angle which the normal makes with X-axis in positive direction is  $30^\circ$ .**

**Sol.**  $\phi = 5$

$$\alpha = 30^\circ$$

So equation line:  $x \cos \alpha + y \sin \alpha = p$

$$x \cos 30^\circ + y \sin 30^\circ = 5$$

$$x \left( \frac{\sqrt{3}}{2} \right) + y \left( \frac{1}{2} \right) = 5$$

$$[\because \cos 30^\circ = \frac{\sqrt{3}}{2}, \sin 30^\circ = \frac{1}{2}]$$

$$\sqrt{3}x + y = 10$$

**Q7. Divide 16 into two parts such that twice the square of the large part exceeds the square of the smaller by 164.**

**Sol.** Let the larger part be  $x$ . Then the smaller part =  $16-x$ .

According to question,

$$2x^2 = (16-x)^2 + 164$$

$$\Rightarrow 2x^2 - (16-x)^2 - 164 = 0$$

$$\Rightarrow x^2 + 32x - 420 = 0$$

$$\Rightarrow (x+42)(x-10) = 0$$

$$x = -42 \text{ or } x = 10$$

$$x = 10 \text{ Ans}$$

**Q8. Find the area of quadrilateral whose vertices are A(1,1), B(7,-3), C(12,2) and D(7,21)**

**Sol.** Area of quadrilateral ABCD = |Area of  $\triangle ABC$ | + |Area of  $\triangle ACD$ |

$$\text{Area of } \triangle ABC = \frac{1}{2} [x_1(y_2 - y_3) + x_2(y_3 - y_1) + x_3(y_1 - y_2)]$$

$$= \frac{1}{2} [1(-3-2) + 7(2-1) + 12(1+3)]$$

$$= \frac{1}{2} [-5 + 7 + 48]$$

$$= \frac{1}{2} [50]$$

$$= 25 \text{ sq. unit}$$

**Q9. Prove that lines  $3x-4y=11$  and  $4x+3y=7$  are perpendicular to each other.**



**Sol.**  $a_1 = 3$   $b_1 = -4$   $c_1 = -11$

$a_2 = 4$   $b_2 = 3$   $c_2 = -7$

These lines are perpendicular if  $a_1 a_2 + b_1 b_2 = 0$

So,  $a_1 a_2 + b_1 b_2$

$= 3 \times 4 + (-4) \times 3$

$= 0$

**Q10.** Find the equation of circle, whose centre is (2,3) and passes through (5,7).

**Sol.** radius of circle = distance between centre and point on circle.  
Centre C(2,3), Points P(5,7)

So,  $r = CP = \sqrt{(5-2)^2 + (7-3)^2} = 5$

Equation of circle  $(x-h)^2 + (y-k)^2 = r^2$

$(x-2)^2 + (y-3)^2 = 5^2$

$x^2 + y^2 - 4x - 6y - 12 = 0$

**Q11.** Prove that lines  $3x-4y=11$  and  $4x+3y=7$  are perpendicular to each other.

**Sol.** In general form  $a_1 = 3$   $b_1 = -4$   $c_1 = -11$

$a_2 = 4$   $b_2 = 3$   $c_2 = -7$

These lines are perpendicular if  $a_1 a_2 + b_1 b_2 = 0$

So,  $a_1 a_2 + b_1 b_2$

$= 3 \times 4 + (-4) \times 3$

$= 0$

So these lines are perpendicular.

**Q12.** Find centre and radius of the circle  $x^2 + y^2 - 4x + 6y - 5 = 0$ .

**Sol.** It is a general form of the circle.



$$g = -2$$

$$f = 3$$

$$c = -5$$

$$\text{centre } (h, k) = (-g, -f)$$

$$\text{radius } c = h^2 + k^2 - r^2$$

$$r^2 = h^2 + k^2 - c$$

$$= 4 + 9 - (-5)$$

$$r^2 = 18$$

$$r = \sqrt{18} = 3\sqrt{2}$$

**Q13. What is (12,5) in polar coordinates ?**

**Sol.** By pythagorous

By tangent function

$$r^2 = 12^2 + 5^2$$

$$\tan \theta = \frac{5}{12}$$

$$r = \sqrt{12^2 + 5^2}$$

$$\theta = \tan^{-1} \left( \frac{5}{12} \right)$$

$$r = \sqrt{144 + 25}$$

$$\theta = \tan^{-1} \frac{y}{x}$$

$$r = \sqrt{169} = 13$$

formula

**Q14. Change the (3,4) to polar co-ordinate.**

**Sol.** Using property

By tangent function

$$r^2 = 3^2 + 4^2$$

$$\tan \theta = \frac{4}{3}$$

$$r^2 = 9 + 16$$

$$\theta = \tan^{-1} \frac{4}{3}$$

$$r = \sqrt{9 + 16}$$

$$\theta = \tan^{-1} \frac{4}{3}$$

$$r = \sqrt{25} = 5$$

**Q15. Convert  $2x - 5x^3 = 1 + xy$  into polar coordinates**

**Sol.** Replace  $x$  by  $r \cos \theta$

Replace  $y$  by  $r \sin \theta$

$$2(r \cos \theta) - 5(r \cos \theta)^3 = 1 + (r \cos \theta)(r \sin \theta)$$

$$2r \cos \theta - 5r^3 \cos^3 \theta = 1 + r^2 \cos \theta \sin \theta$$

**Q16. Convert  $r = -8 \cos \theta$  into Cartesian coordinate.**

**Sol.**  $r^2 = -8r \cos \theta$

$$x^2 + y^2 = -8x$$

**Q17. Find sum and products of roots of following equation**

$$4x^2 + 3x + 7 = 0.$$

**Sol.** The sum of roots  $= \alpha + \beta = \frac{-\text{coefficient of } x}{\text{coefficient of } x^2} = \frac{-3}{4}$

$$\text{Product of roots} = \alpha\beta = \frac{\text{constant term}}{\text{coefficient of } x^2} = \frac{7}{4}$$

$$\therefore \frac{1}{\alpha} + \frac{1}{\beta} = \frac{\alpha + \beta}{\alpha\beta} = \frac{-3/4}{7/4} = \frac{-3}{7}$$

### Long Questions

**Q1. The sum of numbers is 9. The squares of the numbers is 41.**

**Find the numbers.**

**These are quadratic simultaneous equations.**

**Sol.** Let the numbers be  $x$  and  $y$ .

$$x + y = 9$$

$$x^2 + y^2 = 41$$

From the first equation,  $y = (9 - x)$

Now substitute this in the second equation.

$$x^2 + (9 - x)^2 = 41$$

$$x^2 + 81 - 18x + x^2 = 41$$

$$2x^2 - 16x + 81 = 41$$

$$2x^2 - 16x + 40 = 0$$

$$x^2 - 8x + 20 = 0$$

$$(x - 5)(x - 4) = 0$$

$$(x - 5) = 0 \text{ or } (x - 4) = 0$$

$$x = 5 \text{ or } x = 4$$

Substitute this in the first equation,  $y = 5$  or  $4$

The numbers are 5 and 4.

**Q2.** The three sides of a right angled triangle are  $x$ ,  $x+1$  and 5. Find  $x$  and the area, if the longest side is 5.

**Sol.** The hypotenuse = 5.

$$x^2 + (x+1)^2 = 5^2 \quad (\text{Pythagoras' Theorem})$$

$$x^2 + x^2 + 2x + 1 = 25$$

$$-25 = > x^2 + x^2 + 2x - 24 = 0$$

$$(x+6)(x-4) = 0$$

$$(x+6) = 0 \text{ or } (x-4) = 0$$

$$x = -6 \text{ or } x = 4$$

$$x = 4;$$

$$\text{Area} = 0.5 \times 3 \times 4 = 6\text{cm}^2$$

**Q3.** The sum of two numbers is 27 and their product is 50. Find the numbers.

**Sol.** Let one number be  $x$ . Then the other number is  $50/x$ .

$$x + 50/x = 27$$

$$x^2 = x^2 + 50 = 27x$$

$$-27x = x^2 - 27x + 50 = 0$$

$$(x-25)(x-2) = 0$$

$$(x-25) = 0 \text{ or } (x-2) = 0$$

$$x = 25 \text{ or } x = 2.$$

**14. Find the equation of a straight line through the point (-1,3) with slope 2.**

**sol.** The slope of the line must be the same between any two points, e.g. between  $(x,y)$  and  $(-1,3)$  so that

$$\frac{y-3}{x-(-1)} = 2$$

$$y-3 = 2(x+1)$$

$$y = 2(x+1) + 3$$

$$y = 2x + 5$$

**15. Find the equation of a line through the point (1,2) and (3,1). What is its slope? What is its y intercept?**

**sol.** We first find the slope of the line by finding the ratio of the change in y over change in x. Thus

$$m = \frac{(2-1)}{(1-3)} = -\frac{1}{2}$$

Now that we have the slope, the problem is similar to that in Example 1, so we use the same method to conclude that

$$\frac{(y-2)}{(x-1)} = -\frac{1}{2}$$

Rearranging leads to

$$y = -\frac{x}{2} + \frac{5}{2}$$

Thus the y intercept is  $5/2$  and the slope is  $-1/2$ .

**Q6.** What is the equation of a line that passes through the point (1,1) and is perpendicular to the line  $y = -2x + 2$ ? Where do the two lines intersect?

**Sol.** Recall that the two lines are perpendicular if their slopes are negative reciprocals of one another. Thus, the line  $y = mx + b$  would be perpendicular to any line whose slope is  $-1/m$ .

The slope of the original line is -2. Thus the slope of the second line perpendicular to it would be  $-1/2$ . We also require that this second line go through the point (1,1). Now we reduced the problem to the type of calculation that we have already did in example 1. We find that points on the line satisfy

$$\frac{(y-1)}{(x-1)} = \frac{1}{2}$$

After rearranging, we find that the required equation is

$$y = \frac{x}{2} + \frac{1}{2}$$

In the second part of this problem we are asked to find the point(s) at which the two lines intersect. First recall that the two lines either intersect at exactly one point, or else they intersect all along their length (if they correspond to the same line!). In any case, at points of intersection, both equations are satisfied simultaneously. Thus, we look for points (x,y) such that

$$y = -2x + 2$$

$$y = \frac{x}{2} + \frac{1}{2}$$

The above two equations imply that

$$-2x + 2 = \frac{x}{2} + \frac{1}{2}$$

$$-2x - \frac{x}{2} = \frac{1}{2} - 2$$

$$-\frac{5}{2}x = -\frac{3}{2}$$

$$x = \frac{3}{5}$$

Thus, the x-coordinate of the point of intersection is found. The y value can be obtained by using either of the two equations, and simply plugging in this value of x.

We find that

$$y = -2x + 2 = -2\left(\frac{3}{5}\right) + 2 = \frac{4}{5}$$

The answer is that the point of intersection is  $(3/5, 4/5)$

**Q15. Find the equation of the tangent line to the circle**

$$x^2 + y^2 = 4$$

**at the point in the first quadrant whose x coordinate is x = 1.**

**Sol.** The equation given in this problem describes a circle with centre at  $(0,0)$  and radius 2. Further, note that if the x coordinate of the point on the circle is  $x=1$ , then the y coordinate must be given by

$$y^2 = 4 - x^2 = 4 - 1 = 3$$

$$y = \pm\sqrt{3}$$

We observe that there are two values of y that correspond to the x coordinate  $x=1$ , but since we are interested in a point in the first quadrant, we select the positive value. This means that the point of the circle at which we want a tangent line has the coordinates  $(1, \sqrt{3})$ . Thus, the radius vector is a line connecting  $(0,0)$  and  $(1, \sqrt{3})$ , which means that its slope is

$$m = \frac{\sqrt{3}}{1} = \sqrt{3}$$

The tangent line, by what we have said above, is perpendicular to



this radius vector, and has a slope the negative reciprocal of the above, namely

$$m = \frac{-1}{\sqrt{3}}$$

We now have all the information required to compute the equation of the tangent line: namely its slope,  $m = \frac{-1}{\sqrt{3}}$  and a point through which it passes,  $(1, \sqrt{3})$ . We find after some simple algebra that the equation of the tangent line is:

$$y = \frac{-1}{\sqrt{3}}(x - 4)$$

**Q8. Find the vertex, the focus, the axis of symmetry and the directrix of the parabola defined by the equation**

$$2y^2 + 8y + x + 1 = 0$$

**Sol.** We first complete the square using the terms in  $y$  and  $y^2$  and write the given equation in the form  $(y - k)^2 = 4a(x - h)$  where  $(h, k)$  is the vertex and the focus is at  $(h + a, k)$ , the axis of symmetry is given by  $y = k$  and the directrix is given by  $x = h - a$

$$2(y^2 + 4y) + x + 1 = 0$$

$$2((y + 2)^2 - 4) + x + 1 = 0$$

$$(y + 2)^2 = -(1/2)(x - 7)$$

vertex at  $(7, -2)$

$$-(1/2) = 4a \text{ hence, } a = -1/8$$

focus at  $(7 - 1/8, -2) = (6.875, -2)$

axis of symmetry is given by  $y = -2$



directrix  $y=2$  is equal to  $2|a|$ , hence  $|a|=9$  and  $a=-9$  since parabola opens downward. The vertex is at  $(0,-7)$ , at equal distances from the focus and the directrix.

equation:  $x^2 = -36(y+7)$

**Q11. Given the following equation**

$$9x^2 + 4y^2 = 36$$

- a) Find the x and y intercepts of the graph of the equation.
- b) Find the coordinates of the foci.
- c) Find the length of the major and minor axes.

**Sol.** a) We first write the given equation in standard form by dividing both sides of the equation by 36

$$9x^2/36 + 4y^2/36 = 1$$

$$x^2/4 + y^2/9 = 1$$

$$x^2/2^2 + y^2/3^2 = 1$$

We now identify the equation obtained with one of the standard equation in the review above and we can say that the given equation is that of an ellipse with  $a=3$  and  $b=2$  (NOTE:  $a>b$ )

Set  $y=0$  in the equation obtained and find the x intercepts

$$x^2/2^2 = 1$$

Solve for x.

$$x^2 = 2^2$$

$$x = \pm 2$$

Set  $x=0$  in the equation obtained and find the y intercepts.

$$y^2/3^2 = 1$$

Solve for y.

$$y^2 = 3^2$$

$$y = \pm 3$$

b) We need to find c first.

$$c^2 = a^2 - b^2$$

a and b were found in part a)

$$c^2 = 3^2 - 2^2$$

$$c^2 = 5$$

Solve for c.

$$c = \pm(5)^{1/2}$$

The foci are  $F_1(0, (5)^{1/2})$  and  $F_2(0, -(5)^{1/2})$

c) The major axis length is given by  $2a = 6$

The minor axis length is given by  $2b = 4$ .

**Q12. Find the equation to the locus of a moving point which is always equidistant from the points (2,-1) and (3,2). What curve does the locus represent?**

**Sol.** Let A(2,-1) and B(3,2) be the given points and (x,y) be the coordinates of a point P on the required locus. Then,

$$PA^2 = (x-2)^2 + (y+1)^2 \text{ and } PB^2 = (x-3)^2 + (y-2)^2$$

By problem,  $PA = PB$  or  $PA^2 = PB^2$

$$\text{or, } (x-2)^2 + (y+1)^2 = (x-3)^2 + (y-2)^2$$

$$\text{or, } x^2 - 4x + 4 + y^2 + 2y + 1 = x^2 - 6x + 9 + y^2 - 4y + 4$$

$$\text{or, } 2x + 6y = 8$$

$$\text{or, } x + 3y = 4 \quad \dots\dots (1)$$

which is the required equation to the locus of the moving point.

Clearly, equation (1) is a first degree equation in x and y; hence, the locus of P is a straight line whose equation is  $x + 3y = 4$ .

**Q13. Find the locus of a moving point which forms a triangle of area 21 square units with the points (2,-7) and (-4,3).**

**Sol.** Let the given point be A(2,-7) and B(-4,3) and the moving point

P (say), which forms a triangle of area 21 square units with A and B, have coordinates (x,y). Thus, by question area of the triangle PAB is 21 square units.

Hence, we have,

Therefore, the required equation to the locus of the moving point is  $5x+3y=10$  or,  $5x+3y+21=0$ .

$$1/2 |(6-4y-7x) - (28+3x+2y)| = 21$$

$$\text{or, } |6-28-4y-2y-7x-3x| = 42$$

$$\text{or, } 10x+6y+22 = \pm 42$$

$$\text{Therefore, either, } 10x+6y+22 = 42 \text{ i.e., } 5x+3y=10$$

$$\text{or, } 10x+6y+22 = -42 \text{ i.e., } 5x+3y+32=0$$

**Q14. Find the centre and radius of the following circle.**

**Sol.** Let  $(h,k)$  be the centre of a circle with radius  $a$ .

Thus, its equation will be  $(x-h)^2 + (y-k)^2 = a^2$

(i) Given:

$$(x-1)^2 + y^2 = 4$$

Here,  $h=1$ ,  $k=0$  and  $a=2$ .

Thus, the centre is  $(1,0)$  and the radius is 2.

(ii) Given:

$$(x+5)^2 + (y+1)^2 = 9$$

Here,  $h=-5$ ,  $k=-1$  and radius=3.

Thus, the centre is  $(-5,-1)$  and the radius is 3.

(iii) Given:

$$x^2 + y^2 - 4x + 6y = 5$$

The given equation can be rewritten as follows:

$$(x-2)^2 + (y+3)^2 - 4 - 9 = 5$$



## UNIT-V

# Statistic and Probability

### Very Short Questions (On Law of Addition)

**Q1.** In a group of 101 students 30 are freshmen and 41 are sophomores. Find the probability that a student picked from this group at random is either a freshman or sophomore.

**Sol.** Note that  $P(\text{freshman}) = 30/101$  and  $P(\text{sophomore}) = 41/101$ .  
Thus  $P(\text{freshman or sophomore}) = 30/101 + 41/101 = 71/101$ .  
This makes sense since 71 of the 101 students are freshmen or sophomores.

**Q2.** In a group of 101 students 40 are juniors, 50 are female and 22 are female juniors. Find the probability that a student picked from this group at random is either a junior or female.

**Sol.** Note that  $P(\text{junior}) = 40/101$  and  $P(\text{female}) = 50/101$  and  $P(\text{junior and female}) = 22/101$ . Thus  
 $P(\text{junior or female}) = 40/101 + 50/101 - 22/101 = 68/101$   
This makes sense since 68 of the 101 students are juniors or female.

**Q3.** An urn contains 6 red marbles and 4 black marbles. Two marbles are drawn *without replacement* from the urn. What is the probability that both of the marbles are black?

**Sol.** Let A = the event that the first marble is black; and let B = the event that the second marble is black. We know the following:  
In the beginning, there are 10 marbles in the urn, 4 of which are black. Therefore,  
 $P(A) = 4/10$   
After the first selection, there are 9 marbles in the urn, 3 of which are black.

Therefore,  $P(B|A) = 3/9$

Therefore, based on the rule of multiplication:

$$P(A \cap B) = P(A)P(B|A)$$

$$P(A \cap B) = (4/10) * (3/9) = 12/90 = 2/15$$

**Q4. A card is drawn randomly from a deck of ordinary playing cards. You win \$10 if the card is a spade or an ace. What is the probability that you will win the game?**

**Sol.** The correct answer is C. Let  $S$  = the event that the card is a spade, and let  $A$  = the event that the card is an ace. We know the following:

- There are 52 cards in the deck
- There are 13 spades, so  $P(S) = 13/52$
- There are 4 aces, so  $P(A) = 4/52$
- There is 1 ace that is also a spade, so  $P(S \cap A) = 1/52$

Therefore, based on the rule of addition:

$$P(S \cup A) = P(S) + P(A) - P(S \cap A)$$

$$P(S \cup A) = 13/52 + 4/52 - 1/52 = 16/52 = 4/13$$

**Q5. A card is drawn from a well shuffled pack of playing cards. Find the probability that**

- 1. A club**
- 2. A king**
- 3. The ace of spade**

**Sol.** There are 52 different cards in a pack of playing cards. Total number of cases =  ${}^{52}C_1 = 52$

1. There will be 13 club cards in a packet. Therefore favourable cases =  ${}^{13}C_1 = 13$ . Hence probability of getting a club will be

$$\frac{{}^{13}C_1}{{}^{52}C_1} = \frac{13}{52}$$

2. There are 4 kings in a packet. Therefore number of favourable



cases =  $4C_1$  and probability of getting a king will be

$$\frac{4C_1}{52C_1} = \frac{4}{52}$$

3. In a pack of cards there will be only one ace of spade and hence probability of getting an ace of spade will be

$$\frac{1}{52}$$

**Q6. Three coins are tossed. What is the probability of getting**

1. All heads
2. Exactly one head
3. Exactly two heads
4. Atleast one head

**Sol.** Here the sample space is  $S = (HHH, HHT, HTH, THH, TTH, THT, HTT, TTT)$  Therefore total number of cases is 8.

1. There is only one case with all heads as (HHH), therefore, number of favourable cases is 1.

$$\text{Hence } P(\text{All heads}) = \frac{1}{8}$$

2. There are three cases with exactly one head as (HTT, THT, TTH)

$$\text{Hence } P(\text{Exactly one head}) = \frac{3}{8}$$

3. There are three cases with exactly two heads as (HHT, HTH, THH)

$$\text{Hence } P(\text{Exactly two heads}) = \frac{3}{8}$$

4. In all 7 cases except (TTT) there is atleast one head.

$$\text{Hence } P(\text{Atleast one head}) = \frac{7}{8}$$

---

### Very Short Question (on Integration)

---

**Q1. Calculate the mean for the following data**

**(i) 2,4,5,6,8,17**

**Sol.** Mean =  $\bar{X} = \frac{2+4+5+6+8+17}{6} = \frac{42}{6} = 7$

**(ii) 6,7,10,12,13,4,8,12**

Mean =  $\frac{6+7+10+12+13+4+8+12}{8}$

$= \frac{72}{8}$

$= 9$

**Q2. The weekly salaries of six employees at McDonalds are \$140, \$220, \$90, \$180, \$140, \$200. For these six salaries, find (a) the mean (b) the median (c) and the mode.**

**Sol.** List the data in order: 90, 140, 140, 180, 200, 220

Mean =  $\frac{90+140+140+180+200+220}{6} = 161.66$

**Median:** 90, 140, 140, 180, 200, 220

The two numbers that fall in the middle need to be averaged.

$\frac{140+180}{2} = 160$

**Mode:** The number that appears the most is **140**.

**Q3. Raj has grades of 84, 65 and 76 on three math tests. What grade must he obtain on the next test to have an average of exactly 80 for the four tests?**

**Sol.**  $\frac{84+65+76+x}{4} = 80$  (average) cross multiply and solve

$(4)(80) = 225 + x$



$$320 = 225 + x$$

$$\underline{-225} \quad \underline{-225}$$

$$95 = x$$

Raj needs a 95 on his next test.

**Q4. Calculate the mean deviation for the following**  
**46, 44, 54, 63, 34, 38, 70, 55, 48, 42**

**Sol. NOTE:**

Formula used for mean deviation:

$$MD = \frac{1}{n} \sum_{i=1}^n |d_i|$$

Here,  $d_i = x_i - M$

M = Median

Arranging the data in ascending order

34, 38, 42, 44, 46, 48, 54, 55, 63, 70

Here,  $n = 10$

Also, median is the AM of the fifth and the sixth observation.

$$\text{Median, } M = \frac{42 + 44}{2} = 43$$

$x_i$	$ d_i  =  x_i - M $
34	9
66	23
30	13
38	5
44	1
50	7
40	3
60	17
42	1
51	8
Total	87

$$MD = \frac{1}{10} \times 87 = 8.7$$

**Q5. Calculate the mean deviation for the following**

**25, 29, 41, 28, 22, 31, 30, 24, 42, 27**

**Sol. Arranging the data in ascending order**

**22, 24, 25, 27, 28, 29, 30, 31, 41, 42**

**Here,  $n = 10$**

**Also, median is the AM of the fifth and the sixth observation.**

$$\text{Median, } M = \frac{28 + 29}{2} = 28.5$$

$x_i$	$ d_i  =  x_i - M $
22	6.5
24	4.5
30	1.5
27	1.5
29	0.5
31	2.5
25	3.5
28	0.5
41	12.5
41	13.5
Total	47

$$MD = \frac{1}{10} \times 47 = 4.7$$

**Q6. The height of 50 plants in a garden are given below.**

Height (cm)	10	25	30	40	45
Number Plants	13	15	12	8	2

**Find the mode of the data**

**Sol. The frequency of 25 is maximum.**

**So, the mode of this data is 15.**

**Q7.** If the mean of the following frequency distributions is 9, find the value of 'a'. Write the tally marks also.

Variable ( $x_i$ )	4	6	8	10	12	15
Frequency ( $f_i$ )	8	9	17	a	8	4

**Sol.** Frequency distribution table

Variable ( $x_i$ )	Tally Marks	Frequency ( $f_i$ )	$f_i x_i$
4		8	32
6		9	54
8		17	136
10		a	10a
12		8	96
15		4	60
		$\sum f_i = 46 + a$	$\sum f_i x_i = 378 + 10a$

$$\text{Mean} = (\sum f_i x_i) / (\sum f_i)$$

But given mean = 9

So, we have  $(378 + 10a) / (46 + a) = 9$

$$378 + 10a = 9(46 + a)$$

$$378 + 10a = 414 + 9a$$

$$10a - 9a = 414 - 378$$

$$a = 36$$

**Q8.** Find the median of the data 24, 33, 30, 22, 21, 25, 34, 27.

**Sol.** Here the number of observations is even i.e., 8

Arranging the data in ascending order, we get 21, 22, 24, 25, 27, 30, 33, 34

Therefore, median =  $\{(n/2)^{\text{th}} \text{ observation} + (n+1/2)^{\text{th}} \text{ observation}\} / 2$

$$= (8/2)^{\text{th}} \text{ observation} + (8/2+1)^{\text{th}} \text{ observation} / 2$$

$$= 4^{\text{th}} \text{ observation} + (4+1)^{\text{th}} \text{ observation}$$

$$= \{25+27\} / 2$$

$$130 = 52/2$$

$$= 26$$

Therefore, the median of the given data is 26

**Q9. Find the median of the data 25, 37, 47, 18, 19, 26, 36**

**Sol.** Arranging the data in ascending order, we get 18, 19, 25, 26, 36, 37, 47

Here the number of observations is odd, i.e., 7

Therefore, median =  $(n + 1/2)^{\text{th}}$  observation

$$= (7 + 1/2)^{\text{th}} \text{ observation}$$

$$= (8/2)^{\text{th}} \text{ observation}$$

$$= 4^{\text{th}} \text{ observation}$$

4<sup>th</sup> observation is 26

Therefore, the median of the data is 26.

**Q10. The height of 10 girls were measured in cm and results are as follows:**

142, 149, 136, 148, 129, 140, 148, 145, 150, 133

(i) What is the height of tallest girl?

(ii) What is the height of shortest girl?

(iii) What is the range of the data?

(iv) Find the mean height?

(v) How many girls are there whose height is less than the mean height?

**Sol.** (i) The height of the tallest girl is 150 cm.

(ii) The height of the shortest girl is 129 cm.

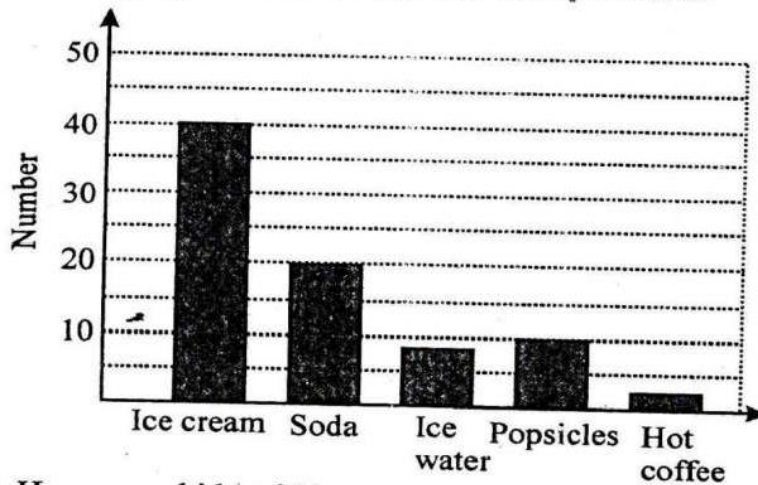
$$(iii) \text{ Range} = 150\text{cm} - 129\text{cm} = 21 \text{ cm}$$

$$(iv) \text{ The mean height} = (142+149+136+148+129+140+148+145+150+133)/10 = 1420/10 = 142 \text{ cm}$$

(v) There are 4 girls whose height is less than the mean height, i.e., the girl having heights 136 cm, 129 cm, 133 cm, 140 cm.

**Q11. A survey was conducted of 79 kids at a local swimming pool to find their favourite hot-weather refreshment. Use**

the bar graph below to answer the questions.



1. How many kids said ice cream was their favourite hot weather refreshment?
2. Which refreshment was the favourite of exactly 20 kids?
3. Which was more popular, popsicles or ice water?
4. How many kids said hot coffee was their favourite hot weather refreshment?

- Sol.**
1. 40, since that's the height of the bar in the "ice cream" bin.
  2. Soda, since there are 20 kids in the "soda" bin.
  3. Popsicles, since the bar above "popsicles" is slightly taller than the bar above "ice water"
  4. Only one

---

### Short Question

---

- Q1.** If the mean of the following distribution is 9, find the value of  $p$ .

x	4	6	$p+7$	10	15
f	5	10	10	7	8

- Sol.** Calculation of mean



$x_i$	$f_i$	$x_i f_i$
4	5	20
6	10	60
$p+7$	10	$10(p+7)$
10	7	70
15	8	120

$$\sum f_i = 5 + 10 + 10 + 7 + 8 = 40$$

$$\sum f_i x_i = 270 + 10(p+7)$$

$$\text{Mean} = \frac{\sum (f_i x_i)}{\sum f_i}$$

$$9 = \frac{270 + 10(p+7)}{40}$$

$$\Rightarrow 270 + 10p + 70 = 9 \times 40$$

$$\Rightarrow 340 + 10p = 360$$

$$\Rightarrow 10p = 360 - 340$$

$$\Rightarrow 10p = 20$$

$$\Rightarrow p = 20/10$$

$$\Rightarrow p = 2$$

**Q2.** In how many different ways can the letters of the word 'MATHEMATICS' be arranged such that vowels must always come together?

**Sol.** The word 'MATHEMATICS' has 11 letters. It has the vowels 'A', 'E', 'A', 'I' in it and these 4 vowels must always come together. Hence these 4 vowels can be grouped and considered as a single letter. That is, MTHMTCS(AEAI)

Hence, we can assume total letters as 8. But in these 8 letters, 'M' occurs as 2 times, 'T' occurs 2 times but rest of the letters are different.

Hence, number of ways to arrange these letters

$$= 8!(2!)(2!) = 8 \times 7 \times 6 \times 5 \times 4 \times 3 \times 2 \times 1 (2 \times 1)(2 \times 1) = 10080$$

In the 4 vowels (AEAI), 'A' occurs 2 times and rest of the vowels are different.

Number of ways to arrange these vowels among themselves

$$= 4!2! = 4 \times 3 \times 2 \times 1 (2 \times 1) = 12$$

Hence, required number of ways  $= 10080 \times 12 = 120960$

**Q3.** A question paper has two parts P and Q, each containing 10 questions. If a student needs to choose 8 from part P and 4 from part Q, in how many ways can he do that?

**Sol.** Number of ways to choose 8 questions from part  $P = {}^{10}C_8$

Number of ways to choose 4 questions from part  $Q = {}^{10}C_4$

Total number of ways

$$= {}^{10}C_8 \times {}^{10}C_4$$

$$= {}^{10}C_2 \times {}^{10}C_4 \text{ [Applied the formula } {}^nC_r = {}^nC_{(n-r)} \text{]}$$

$$= ((10 \times 9) / (2 \times 1)) ((10 \times 9 \times 8 \times 7) / (4 \times 3 \times 2 \times 1))$$

$$= 45 \times 210$$

$$= 9450$$

**Q4.** A bag contains 2 red, 3 green and 2 blue balls. Two balls are drawn at random. What is the probability that none of the balls drawn is blue?

**Sol.** Total number of balls  $= (2+3+2) = 7$

Let S be the sample space.

Then,  $n(S)$  = Number of ways of drawing 2 balls out of 7

$$= {}^7C_2$$

$$= \frac{(7 \times 6)}{(2 \times 1)}$$

$$= 21$$

Let E = Event of drawing 2 balls, none of which is blue.



$\therefore n(E) = \text{Number of ways of drawing 2 balls out of (2+3) balls.}$

$$= {}^5C_2$$

$$= \frac{(5 \times 4)}{(2 \times 1)} = 10 \therefore P(E) = \frac{n(E)}{n(S)} = \frac{10}{21}$$

**Q5. Find the mean of following frequency distribution by step deviation method.**

Class interval	0-10	10-20	20-30	30-40	40-50
Number of workers	7	10	15	8	10

**Sol.**

Class interval	Mid values ( $x_i$ )	Frequency ( $f_i$ )	$d_i = x_i - 25$	$u_i = (x_i - 25)/10$	$f_i u_i$
0-10	5	7	-20	-2	-14
10-20	15	10	-10	-1	-10
20-30	25	15	0	0	0
30-40	35	8	10	1	8
40-50	45	10	20	2	20
		$N = \sum f_i = 50$			$\sum f_i u_i = 4$

$$A = 25, h = 10, N = 50 \text{ and } \sum f_i u_i = 4$$

$$\bar{X} = A + h \left[ \frac{1}{N} \sum f_i u_i \right]$$

$$\Rightarrow \text{Mean} = 25 + 10 \times (4/50)$$

$$\Rightarrow \text{Mean} = 25 + 0.8$$

$$\therefore \text{Mean} = 25.8$$

**Q6. The following table shows the weights of 12 students:**

Weight (in kg)	67	70	72	73	75
Number of students	4	3	2	2	1

**Find the mean by using short-cut method.**

**Sol.** Let the assumed mean =  $A = 72$

Weight (in kg)	No of students ( $f_i$ )	$d_i = x_i - A$ $= x_i - 72$	$f_i d_i$
67	4	-5	-20
70	3	-2	-6
72	2	0	2
73	2	1	2
75	1	3	3
	$\sum f_i = 12$		$\sum f_i d_i = -21$

$$\sum f_i = 12, \sum f_i d_i = -21, A = 72$$

$$\bar{X} = A + \frac{1}{N} \sum f_i d_i$$

$$\Rightarrow \text{Mean} = 72 + (-21)/12 = 72 - 7/4$$

$$\Rightarrow \text{Mean} = 70.25 \text{ kg}$$

**Q7. Calculate the variance, standard deviation from the following data:**

x	3	8	13	18	23
y	7	10	15	10	6

$x_i$	$f_i$	$f_i x_i$	$(x_i - \bar{X})$	$(x_i - \bar{X})^2$	$f_i (x_i - \bar{X})^2$
3	7	21	-9.79	95.84	670.88
8	10	80	-4.79	22.94	229.4
13	15	195	0.21	0.04	0.6
18	10	180	5.21	27.14	271.4
23	6	138	10.21	104.24	625.44
	$\sum f_i$ $= 48$	$\sum f_i x_i$ $= 614$			$\sum f_i (x_i - \bar{X})^2$ $= 1797.32$

**Sol.**

$$\text{Variance, } \sigma^2 = \frac{\sum f_i (x_i - \bar{X})^2}{\sum f_i} = \frac{1797.32}{48} = 37.44$$

$$SD, \sigma = \sqrt{37.44} = 6.12$$

### Formulas

Calculate?	Formula Name	Formula
Mean	Direct Method	$\bar{x} = \frac{\sum x}{n}$
Mean	Step Deviation Method	$\bar{x} = A + h \left[ \frac{1}{N} \sum f_i u_i \right]$
Mean	Short Cut Method	$\bar{x} = A + \frac{1}{N} \sum f_i u_i$
Variance	$\sigma^2$	$\frac{\sum f_i (x_i - \bar{X})^2}{\sum f_i}$
Standard Deviation	SD	$\sqrt{Var(X)}$

**Q8. Compute the following**

$$\begin{bmatrix} \cos^2 x & \sin^2 x \\ \sin^2 x & \cos^2 x \end{bmatrix} + \begin{bmatrix} \sin^2 x & \cos^2 x \\ \cos^2 x & \sin^2 x \end{bmatrix}$$

**Sol.**  $\begin{bmatrix} \cos^2 x & \sin^2 x \\ \sin^2 x & \cos^2 x \end{bmatrix} + \begin{bmatrix} \sin^2 x & \cos^2 x \\ \cos^2 x & \sin^2 x \end{bmatrix}$

$$= \begin{bmatrix} \cos^2 x + \sin^2 x & \sin^2 x + \cos^2 x \\ \sin^2 x + \cos^2 x & \cos^2 x + \sin^2 x \end{bmatrix} = \begin{bmatrix} 1 & 1 \\ 1 & 1 \end{bmatrix}$$

$$(\because \sin^2 x + \cos^2 x = 1)$$

**Q9. Compute the indicated products**

(i)  $\begin{bmatrix} a & b \\ -b & a \end{bmatrix} \begin{bmatrix} a & -b \\ b & a \end{bmatrix}$

**Sol.** (i)  $\begin{bmatrix} a & b \\ -b & a \end{bmatrix} \begin{bmatrix} a & -b \\ b & a \end{bmatrix}$

$$\begin{bmatrix} a & b \\ -b & a \end{bmatrix} \begin{bmatrix} a & -b \\ b & a \end{bmatrix} = \begin{bmatrix} a(a)+b(b) & a(-b)+b(a) \\ -b(a)+a(b) & -b(-b)+a(a) \end{bmatrix}$$

$$= \begin{bmatrix} a^2+b^2 & -ab+ab \\ -ab+ab & b^2+a^2 \end{bmatrix} = \begin{bmatrix} a^2+b^2 & 0 \\ 0 & a^2+b^2 \end{bmatrix}$$

**Q10. Find the transpose of each of the following matrices:**

(i)  $\begin{bmatrix} 5 \\ \frac{1}{2} \\ -1 \end{bmatrix}$  (ii)  $\begin{bmatrix} 1 & -1 \\ 2 & 3 \end{bmatrix}$

**Sol.** (i) Let  $A = \begin{bmatrix} 5 \\ \frac{1}{2} \\ -1 \end{bmatrix}$  then  $A^T = \begin{bmatrix} 5 & \frac{1}{2} & -1 \end{bmatrix}$

(ii) Let  $A = \begin{bmatrix} 1 & -1 \\ 2 & 3 \end{bmatrix}$  then  $A^T = \begin{bmatrix} 1 & 2 \\ -1 & 3 \end{bmatrix}$

---

## Long Questions

---

**Q1. The table below gives the percentage distribution of female teachers in the primary schools of rural areas of various states and union territories (U.T.) of India. Find the mean percentage of female teachers by all the three methods.**

Direct method

Assumed

Step-Deviation

Percentage of female teachers	15 – 25	25 – 35	35 – 45	45 – 55	55 – 65	65 – 75	75 – 85
Number of States/U.T.	6	11	7	4	4	2	1

**Sol.** Let us find the class marks,  $x_i$  of each class, and put them in a column (see Table )

Table

Percentage of female teachers	Number of States/U.T. ( $f_i$ )	$x_i$
15 – 25	6	20
25 – 35	11	30
35 – 45	7	40
45 – 55	4	50
55 – 65	4	60
65 – 75	2	70
75 – 85	1	80

Here we take  $a = 50$ ,  $h=10$  then  $d_i = x_i - 50$  and  $u_i = \frac{x_i - 50}{10}$

Percentage of female teachers	Number of States/U.T. ( $f_i$ )	$x_i$	$d_i = x_i - 50$	$u_i = \frac{x_i - 50}{10}$	$f_i x_i$	$f_i d_i$	$f_i u_i$
15 – 25	6	20	-30	-3	120	-180	-18
25 – 35	11	30	-20	-2	330	-220	-22
35 – 45	7	40	-10	-1	280	-70	-7
45 – 55	4	50	0	0	200	0	0
55 – 65	4	60	10	1	240	40	4
65 – 75	2	70	20	2	140	40	4
75 – 85	1	80	30	3	80	30	3
Total	35				1390	-360	-36

From the table above, we obtain  $\sum f_i = 35$ ,  $\sum f_i x_i = 1390$ ,

$$\sum f_i d_i = -360, \sum f_i u_i = -36$$



Using the direct method,  $\bar{x} = \frac{\sum f_i x_i}{\sum f_i} = \frac{1390}{35} = 39.71$

Using the assumed mean method,

$$\bar{x} = a + \frac{\sum f_i d_i}{\sum f_i} = 50 + \frac{(-360)}{35} = 39.71$$

Using the step-deviation method,

$$\bar{x} = a + \left( \frac{\sum f_i u_i}{\sum f_i} \right) \times h = 50 + \frac{(-36)}{35} \times 10 = 39.71$$

**Q2. Find the mean of the following data by, assumed mean method**

Class interval	10-25	25-40	40-55	55-70	70-85	85-100
No. of student	2	3	7	6	6	6

**Sol. :** Let the assumed mean is (a) = 47.5

Class interval	Number of Student ( $d_i$ )	Class Mark ( $x_i$ )	Deviation $d_i = x_i - a$	$f_i d_i$
10-25	2	17.5	-30	-60
25-40	3	32.5	-15	-45
40-55	7	47.5	0	0
55-70	6	62.5	15	90
70-85	6	77.5	30	180
85-100	6	92.5	45	270
Total	$\Sigma f_i = 30$			$\Sigma f_i d_i = 435$

$$\text{Mean } \bar{x} = a + \frac{\sum f_i d_i}{\sum f_i} = 47.5 + \frac{435}{30} = 47.5 + 14.5 = 62 \text{ (Ans.)}$$

**Shortcut Method:-**

$$\bar{X} = a + \frac{\sum fu}{\sum f} \times h \text{ where } u = \frac{d}{h}$$

where  $\bar{x}$  = mean

$h$  = class interval

$a$  = assumed mean

$$u = \frac{d}{h}$$

$d$  = deviation =  $\bar{x} - a$

$\sum fd$  = sum of multiplication of deviation and corresponding frequency.

$\sum f$  = Sum of frequencies.

**Q3. The following observations have been arranged in ascending order. If the median of the data is 63, find the value of  $x$ .**

**29, 32, 48, 50,  $x$ ,  $x+2$ , 72, 78, 84, 95,**

**Sol. Here,  $N = 10$**

$$\text{Median} = \frac{1}{2} \times \left[ \left( \frac{N}{2} \right)^{\text{th}} + \left( \frac{N}{2} + 1 \right)^{\text{th}} \right] \text{ obs}$$

$$63 = \frac{1}{2} \times \left[ \left( \frac{10}{2} \right)^{\text{th}} + \left( \frac{10}{2} + 1 \right)^{\text{th}} \right] \text{ obs}$$

$$\Rightarrow 63 = \frac{1}{2} \times [5^{\text{th}} + 6^{\text{th}}] \text{ obs}$$

$$\Rightarrow 63 = \frac{1}{2} \times [x + x + 2]$$



$$\Rightarrow \frac{2x+2}{2} = 63 \Rightarrow x+1 = 63 \Rightarrow x = 62$$

**Q4.** The number of telephone calls received at an exchange per interval for 24 successive one minute interval are shown in the following table:

Number of calls	Frequency
0	14
1	21
2	25
3	43
4	51
5	40
6	39
7	12

Calculate mean, median and mode.

(Raj BCA 2008)

**Sol. :**

Number of calls (x)	Frequency (f)	fx	c.f.
0	14	0	14
1	21	21	35
2	25	50	60
3	43	129	103
4	51	204	154
5	40	200	194
6	39	234	233
7	12	84	245
	$\Sigma f = 245$	$\Sigma fx = 922$	

$$\text{Mean: } \bar{X} = \frac{\sum fx}{\sum f}$$

$$= \frac{922}{145} = 3.763$$

**Median :** For finding the median first we calculate  $\frac{N+1}{2}$  (where

$$N = \sum f)$$

$$\text{i.e. } \frac{245+1}{2} = \frac{246}{2}$$

Now, c.f just greater than 123 in 154 and the corresponding variate to 154 is 4 so median is 4.

**Mode :** The maximum frequency is 51 of variate 4 so mode is 4.

**Q5. Find the mode for the following frequency distribution of marks obtained by 80 students**

Marks	No. of Students
0-10	6
10-20	10
20-30	12
30-40	32
40-50	20

←  
**Model Class**

**Sol.** Since, class 30-40 has the maximum frequency so, this is the modal class.

Then,  $f_1 = 32$ ,  $f_0 = 12$ ,  $f_2 = 20$ ,  $l = 30$ ,  $h = 10$

$$\text{Mode} = l + \left( \frac{f_1 - f_0}{2f_1 - f_0 - f_2} \right) \times h$$

$$= 30 + \left( \frac{32-12}{2 \times 32 - 12 - 20} \right) \times 10$$

$$= 30 + \left( \frac{20}{64-32} \right) \times 10$$

$$= 30 + \frac{200}{32} = 30 + \frac{25}{4}$$

$$= 30 + 6.25 = 36.25 \text{ (Ans.)}$$

**Q6. The points scored by a Kabaddi team in a series of matches are as follows:**

17, 2, 7, 27, 15, 5, 14, 8, 10, 48, 10, 8, 7, 18, 28,

**Find the median of the points scored by the team**

**Sol :** Arranging the points scored by the team in ascending order, we get.

2, 5, 7, 7, 8, 8, 10, 10, 14, 15, 17, 18, 24, 27, 28, 48,

Here,  $N = 16$

$$\therefore \text{Median} = \frac{1}{2} \times \left[ \left( \frac{N}{2} \right)^{\text{th}} + \left( \frac{N}{2} + 1 \right)^{\text{th}} \right]_{\text{obs}}$$

$$= \frac{1}{2} \times \left[ \left( \frac{16}{2} \right)^{\text{th}} + \left( \frac{16}{2} + 1 \right)^{\text{th}} \right]_{\text{obs}}$$

$$= \frac{1}{2} \times [8^{\text{th}} + 9^{\text{th}}]_{\text{obs}} = \frac{1}{2} \times [10 + 14] = 12$$

**Median of Ungrouped Data (If frequency is given):**

» Find c.f. of given data.

» Find  $\frac{N+1}{2}$ .

» Determine c.f. just greater than  $\frac{N+1}{2}$  corresponding variate of this c.f will be median.

**Q7. The heights (in cm) of a students of a class are as follows:-**

155	160	145	149	150	147	152	144	148
-----	-----	-----	-----	-----	-----	-----	-----	-----

**Find the median of this data.**

**Sol:** On arranging the data in ascending order  
144, 145, 147, 148, 149, 150, 152, 155, 160  
Here,  $N = 9$

$$\therefore \text{Median} = \left( \frac{N+1}{2} \right)^{\text{th}} \text{ obs} = \left( \frac{9+1}{2} \right)^{\text{th}} \text{ obs} = 5^{\text{th}} \text{ obs} = 149 \text{ cm.}$$

**Q7.  ${}^{10}P_r = 5040$  find the value of  $r$ .**

**Sol :**  ${}^{10}P_r = 5040$

$$\Rightarrow \frac{10!}{(10-r)!} = 10 \times 9 \times 8 \times 7 \quad \left( \text{using } {}^n P_r = \frac{n!}{(n-r)!} \right)$$

$$\Rightarrow \frac{10!}{(10-r)!} = \frac{10 \times 9 \times 8 \times 7 \times 6!}{6!}$$

$$\Rightarrow \frac{10!}{(10-r)!} = \frac{10!}{6!}$$

$$\Rightarrow (10-r)! = 6!$$

$$\Rightarrow 10-r = 6$$

$$\Rightarrow r = 10 - 6 = 4$$

**Q8. A box contain 6 red, 4 white and 5 black balls. 4 balls are drawn from the box at random. Find the probability that among the balls drawn there is at least one ball of each colour.**

**Sol.:** Total number of balls =  $6 + 4 + 5 = 15$

4 ball can be drawn in  ${}^{15}C_4$  ways

We know that there is at least one ball of each colour. It may be possible in following cases :

2 Red, 1 white and 1 black:

It may be possible in  ${}^6C_2 \times {}^4C_1 \times {}^5C_1$  ways (ii) 1 Red, 2 white and 1 black:

It may be possible in  ${}^6C_1 \times {}^4C_2 \times {}^5C_1$  ways.)

1 Red, 1 white and 2 black:

It may be possible in

$${}^6C_1 \times {}^4C_1 \times {}^5C_2$$

So probability

$$= \frac{({}^6C_2 \times {}^4C_1 \times {}^5C_1 + {}^6C_1 \times {}^4C_2 \times {}^5C_1 + {}^6C_1 \times {}^4C_1 \times {}^5C_2)}{{}^{15}C_4}$$

$$= \frac{15 \times 4 \times 5 \times 6 \times 6 \times 4 \times 10}{1364}$$

$$= 0.527$$

**Q9. A bag contains six black and four red balls. Two balls are drawn. Find the probability that at least one is red.**

**Solution :** Total number of balls  $6 + 4 = 10$ .

There are two possibilities for getting at least one is red.

Both are red (ii) one is red and one is black

So, required probability =  $P(\text{both red}) + P(\text{one red and one black})$

$$= \frac{{}^4C_2}{{}^{10}C_2} + \frac{{}^4C_1 \times {}^6C_1}{{}^{10}C_2}$$

$$= \frac{12 + 48}{90} = \frac{60}{90} = \frac{2}{3}$$

**Q10.** If  $X = 4Y + 5$  and  $Y = kX + 4$  are two lines of regression of  $X$  on  $Y$  and  $Y$  on  $X$  respectively: Show that  $0 < 4k < 1$  and If  $k = 1/16$ , find the correlation coefficient  $r$ .

**Sol:** (i) Given Regression line

$$X \text{ on } Y \rightarrow X = 4Y + 5$$

$$\text{so } b_{xy} = 4$$

$$\text{and } Y \text{ on } X \rightarrow Y = KX + 4$$

$$\text{so } b_{yx} = K$$

we know that

$$0 < b_{xy} \times b_{yx} < 1$$

$$\Rightarrow 0 < 4K < 1 \quad \dots (1) \text{ (HP.)}$$

$$(ii) K = \frac{1}{16}$$

$$\text{Now, } r = +\sqrt{b_{xy} \times b_{yx}}$$

$$r = +\sqrt{4K}$$

$$K = \frac{1}{16}$$

$$r = \sqrt{4 \times \frac{1}{16}}$$

$$= \sqrt{\frac{1}{4}}$$

$$= \frac{1}{2}$$

□□□



This question paper contains 3 printed pages.

Roll No. ....

B.C.A. (Part-I)

Bas. Math.

102

B.C.A. (Part-I) EXAMINATION, 2020

100424

(Faculty of Science)

(Three Year Scheme of 10+2+3 Pattern)

BASIC MATHEMATICS

Time Allowed : Three Hours

Maximum Marks : 100

Answer of all the questions (short answer as well as descriptive) are to be given in the main answer-book only. Answers of short answer type questions must be given in sequential order. Similarly all the parts of one question of descriptive part should be answered at one place in the answer-book. One complete question should not be answered at different places in the answer-book.

Write your roll number on question paper before start writing answers of questions.

Part-I : (Very short answer) consists of 10 questions of 2 marks each. Maximum limit for each question is upto 40 words.

Part-II : (Short answer) consists of 5 questions of 4 marks each. Maximum limit for each question is upto 80 words.

Part-III : (Long answer) consists of 5 questions of 12 marks each with internal choice.

PART - I

1. Attempt all the Parts.

(a) Find the range of the function  $f(x) = \frac{|x-3|}{x-3}$ .

(b) If  $f(x) = 3x + 1$ , then find  $f(f(x))$ .

(c) If  $A = \begin{bmatrix} 1 & 3 & 4 \end{bmatrix}$ , then find  $AA^T$ .

(d) If  $\begin{bmatrix} x-2y & 3 \\ 5 & y \end{bmatrix} = \begin{bmatrix} 7 & 3 \\ 5 & -2 \end{bmatrix}$ , then find  $x$ .

(e) Write the relation between the operators  $\Delta$  and  $E$ .

(f) Find the nature of the roots of the equation  $x^2 - 5x + 6 = 0$ .

(g) Find the arithmetic mean of the first 10 natural numbers.

(h) Write the formula for the mean deviation from mean.

(i) Find  ${}^nP_{n-1}$

(j) Three numbers are chosen from 1 to 20. Find the probability that they are consecutive.



PART - II

Attempt all the Parts.

2. (a) If  $f(x) = ax + b$  and  $g(x) = \frac{x-b}{a}$ , for all  $x \in \mathbb{R}$ , where  $a \neq 0$ , then find  $(g \circ f)(x)$  and  $(f \circ g)(x)$ .
- (b) If  $A = \begin{bmatrix} \cos \alpha & \sin \alpha \\ -\sin \alpha & \cos \alpha \end{bmatrix}$ , then verify that  $A^T A = I_2$ .
- (c) Find the ratio of the sum and the product of the roots of the equation  $9x^2 + 6x - 8 = 0$ .
- (d) Calculate the median for the following data :
- |       |   |    |    |    |    |    |    |    |    |
|-------|---|----|----|----|----|----|----|----|----|
| $x_i$ | 5 | 6  | 7  | 8  | 9  | 10 | 11 | 12 | 13 |
| $f_i$ | 8 | 12 | 13 | 14 | 13 | 11 | 7  | 4  | 3  |
- (e) Find the probability that in two throws of a die, six appears in both the throws.

PART - III

Attempt all the questions by taking any two parts from each question.

3. (a) If  $f: \mathbb{R} \rightarrow \mathbb{R}$  and  $g: \mathbb{R} \rightarrow \mathbb{R}$  are the function defined by  $f(x) = x^2 + 1$  and  $g(x) = \frac{x}{x+3}$ , for all  $x \in \mathbb{R}$ , then find  $g \circ f$  and  $f \circ g$ , if they do exist.
- (b) If  $f: \mathbb{Z} \rightarrow \mathbb{Z}$  is a function defined by  $f(x) = 2x + 1$ , for all  $x \in \mathbb{Z}$ , then define the function  $g: \mathbb{Z} \rightarrow \mathbb{Z}$  such that  $g \circ f = I_{\mathbb{Z}}$ . <https://www.uoronline.com>
- (c) If  $f: \mathbb{R} \rightarrow \mathbb{R}$ , where  $f(x) = 2x - 3$ , for all  $x \in \mathbb{R}$ , then prove that  $f$  is one-one and onto.

4. (a) Evaluate the determinant  $\Delta = \begin{vmatrix} 1 & a & bc \\ 1 & b & ca \\ 1 & c & ab \end{vmatrix}$ .

- (b) Find the inverse of the matrix  $A = \begin{bmatrix} 0 & 1 & 2 \\ 1 & 2 & 3 \\ 3 & 1 & 1 \end{bmatrix}$ .

- (c) Use Cramer's rule to solve the following system of linear equations :  
 $x + 2y + 3z = 6$ ,  $2x + 4y + z = 7$ ,  $3x + 2y + 9z = 14$ .

5. (a) Evaluate :  $\left( \frac{\Delta^2}{E} \right) x^3$ .

- (b) For what value of  $k$ , the sum of the roots of the equation  $3x^2 + (2k + 1)x - (k + 5) = 0$  is equal to the product of its roots ?
- (c) If  $\alpha, \beta$  are the roots of the equation  $x^2 - 2x + 3 = 0$ , then find the equation whose roots are  $\alpha + 1$  and  $\beta + 1$ .

6. (a) Calculate the median for the following frequency distribution :

Class	: 10 - 20	20 - 30	30 - 40	40 - 50	50 - 60	60 - 70	70 - 80	80 - 90	90 - 100
Frequency	: 6	24	45	70	116	60	30	22	5

- (b) Calculate the mean deviation from mean for the following distribution :

Marks	: 0 - 10	10 - 20	20 - 30	30 - 40	40 - 50
No. of Students	: 5	8	15	16	6

- (c) Find the Coefficient of Correlation for the following bivariate data :

$x_i$	: 1	2	3	4
$y_i$	: 2	4	6	8

7. (a) Tickets are numbered from 1 to 25 and are mixed up together, one ticket is drawn randomly. Find the probability that the drawn ticket has the number a multiple of 3 or 5.

- (b) Let A and B be two events, where  $P(A) = \frac{1}{2}$ ,  $P(B) = \frac{1}{4}$  and  $P(A \cap B) = \frac{1}{8}$ . Find :

(i)  $P(A \cup B)$  and

(ii)  $P(\bar{A} \cap \bar{B})$

- (c) Two cards are drawn one by one without replacement from a well shuffled pack of 52 cards. Find the probability that both cards are king.

- o O o -

This question paper contains 3 printed pages.

B.C.A.(Part - I)

000568

Roll No. \_\_\_\_\_

132

Bas. Math.

**B.C.A. (Part - I) EXAMINATION - 2018**

**(Faculty of Science)**

**(Three - Year Scheme of 10 + 2 + 3 Pattern)**

**Paper - 132**

**BASIC MATHEMATICS**

**Time Allowed : Three Hours**

**Maximum Marks - 100**

Answer of all the questions (short answer as well as descriptive) are to be given in the main answer-book only. Answers of short answer type questions must be given in sequential order. Similarly all the parts of one question of descriptive part should be answered at one place in the answer-book. One complete question should not be answered at different places in the answer- book. Write your roll numbers on question paper before start writing answers of questions.

**PART - I:** (Very Short Answer) consists of 10 questions of 2 marks each. Maximum limit for each question is up to 40 words.

**PART - II:** (Short answer) consists of 5 questions of 4 marks each. Maximum limit for each question is up to 80 words.

**PART - III:** (Long answer) consists of 5 questions of 12 marks each with internal choice.

**PART - I**

**I. Very Short Answers Type**

[10x2=20]

(a) Define one to one function.

(b) Define range of a function.

(c) Define an  $m \times n$  matrix

(d) If  $A = \begin{bmatrix} 0 & 1 \\ 1 & 0 \\ 0 & 1 \end{bmatrix}$  and  $B = \begin{bmatrix} 0 & 1 & 2 \\ 2 & 1 & 0 \end{bmatrix}$ ; find AB

(e) Write an equation of straight line in the intercept form.

(f) Solve:  $3x^2 - 5x + 1 = 4x - 5$

(g) Define standard deviation

(h) Define the line of regression of y on x.

(i) If  ${}^nP_1 = 210$ , find  $n$ .

(j) If two dice are thrown what is the probability that the sum is greater than 8.

**PART - II**

2. Attempt all the following parts:

[5x4=20]

(a) Show that the function  $f: \mathbb{R} \rightarrow \mathbb{R}$  defined by  $f(x) = 3x^2 + 5$  for all  $x \in \mathbb{R}$  is a bijection.

(b) Find the value of the following determinant by without expansion:

$$\begin{vmatrix} 13 & 16 & 19 \\ 14 & 17 & 20 \\ 15 & 18 & 21 \end{vmatrix}$$

(5, 4)  
(1, 2)

(c) Prove that the following points are vertices of a right angle triangle:

(2, -2), (-2, 1) and (5, 2)

(d) Find the median of the following frequency distribution:

x:	1	2	3	4	5	6	7	8	9
f:	6	8	12	15	22	24	16	9	5

(e) In how many ways can 4 boys and 5 girls be seated in a row so that they are alternate?

**PART - III**

Attempt all the following five questions by taking any two parts from each question:

[5x12=60]

3. (a) (i) Define Identity function and constant function with their graphs.

(ii) If  $f: \mathbb{R} \rightarrow \mathbb{R}$  is a bijection such that  $f(x) = 2x + 7$ . Find the inverse of  $f$ .

(b) If  $\phi(x) = \log\left(\frac{1-x}{1+x}\right)$ , show that  $\phi(x) + \phi(y) = \phi\left(\frac{x+y}{1+xy}\right)$

(c) Let the function  $f: \mathbb{R} \rightarrow \mathbb{R}$  and  $g: \mathbb{R} \rightarrow \mathbb{R}$  be defined by

$F(x) = 2x$ ,  $g(x) = x^2 + 2$ ,  $\forall x \in \mathbb{R}$ . Find  $f \circ g(2)$  and  $g \circ f(1)$ .

4. (a) Find the inverse of the matrix

$$A = \begin{bmatrix} 0 & 1 & 1 \\ 1 & 0 & 1 \\ 1 & 1 & 0 \end{bmatrix}$$

(b) Solve the following equations by Cramer's rule:

$2x - y + 3z = 9$ ,  $x + y + z = 6$  and  $x - y + z = 2$

(c) Prove that :

$$\begin{vmatrix} 1+a & 1 & 1 \\ 1 & 1+b & 1 \\ 1 & 1 & 1+c \end{vmatrix} = abc \left(1 + \frac{1}{a} + \frac{1}{b} + \frac{1}{c}\right)$$

5. (a) Find the equation of straight line which passes through the point (2,3) and parallel to the line joining the points (1,2) and (7,3).

- (b) Find the equation of a circle passing through a point (3, -1) and having its centre at the point of intersection of the lines  $4x + y - 1 = 0$  and  $2x - y - 5 = 0$ .
- (c) Find a quadratic equation whose roots are reciprocal to the roots of the quadratic equation  $ax^2 + bx + c = 0$
6. (a) Calculate the median for the following distribution :

Class interval	0-5	5-10	10-15	15-20	20-25	25-30	30-35	35-40
Frequency	20	24	32	28	26	18	37	8

- (b) If each variate value be multiplied by a constant quantity  $a$ , then prove that the variance is multiplied by  $a^2$
- (c) Find the Karl Pearson's coefficient of correlation between the ages of husband and wife at the time of their marriage :

Age of Husband : x	23	27	28	28	29	30	31	33	35	36
Age of Wife : y	18	20	22	27	21	29	27	29	28	29

7. (a) The odds against a certain event are 5 to 2 and the odds in favour of another event are 6 to 5; if the events are independent, find the probability of the happening of at least one of them.
- (b) Four persons are choose at random from a group of 3 men , 2 women and 4 children. Find the probability that the group has exactly two children.
- (c) If  ${}^{n-3}P_4 = 3024$  and  ${}^{n-2}P_4 = 120$  , find  $n$  and  $n$ .

<https://www.uoronline.com>

Whatsapp @ 9300930012

Send your old paper & get 10/-

अपने पुराने पेपर्स भेजे और 10 रुपये पायें,

Paytm or Google Pay से

This question paper contains 3 printed pages.

Roll No. ....

**B.C.A. (Part-I)**

**Bas. Math.**

**132**

**B.C.A. (Part-I) EXAMINATION, 2019**

(Faculty of Science)

(Three-Year Scheme of 10+2+3 Pattern)

**BASIC MATHEMATICS - 132**

Time Allowed : Three Hours

Maximum Marks : 100

Answer of all the questions (short answer as well as descriptive) are to be given in the main answer-book only. Answers of short answer type questions must be given in sequential order. Similarly all the parts of one question of descriptive part should be answered at one place in the answer-book. One complete question should not be answered at different places in the answer - book.

Write your roll number on question paper before start writing answers of questions.

**PART - I :** (Very Short Answer) consists of 10 questions of 2 marks each. Maximum limit for each question is up to 40 words.

**PART - II :** (Short answer) consists of 5 questions of 4 marks each. Maximum limit for each question is up to 80 words.

**PART - III :** (Long answer) consists of 5 questions of 12 marks each with internal choice.

**PART - I**

1. Very short answers type questions.

(a) Find the domain of the function  $\frac{|x|}{x}$ .

(b) If  $f: \mathbb{R} \rightarrow \mathbb{R}$ , where  $f(x) = x^2$ , for all  $x \in \mathbb{R}$  then find  $f^{-1}(9)$ .

(c) If  $A+B = \begin{bmatrix} 5 & 2 \\ 0 & 1 \end{bmatrix}$  and  $A-B = \begin{bmatrix} 1 & 4 \\ 2 & 3 \end{bmatrix}$ , then find A and B.

(d) If  $A = \begin{bmatrix} 2 & 4 & -3 \\ 1 & -2 & 5 \end{bmatrix}$  and  $B = \begin{bmatrix} 3 & 1 \\ 4 & -2 \\ 3 & 0 \end{bmatrix}$ , then find  $(AB)^T$ .

(e) If  $y = m_1x + C_1$  and  $y = m_2x + C_2$  are two straight lines such that  $m_1 \cdot m_2 = -1$ , find the relation between these lines.

(f) Solve the equation  $x^2 - 2x - 8 = 0$ .

(g) Find the mode of the following data :

16, 19, 19, 20, 15, 19, 20, 21, 24, 19, 16, 22, 16, 18, 20, 16, 19.

(h) Define mean square deviation.

(i) Write down the relation between  ${}^nP_r$  and  ${}^nC_r$ .

(j) Find the probability that there are 53 Sundays in a year.

PART - II

2. Attempt all the parts :

(a) Prove that the identity function  $I_X$  on the non empty set  $X$  is a one-one onto function.

(b) If  $A = \begin{bmatrix} 1 & 2 & 3 \\ -4 & 1 & 0 \end{bmatrix}$  and  $B = \begin{bmatrix} 2 & 1 \\ 0 & 5 \\ -1 & -3 \end{bmatrix}$ , then find  $AB$  and  $BA$ .

(c) Show that the points (2, 5), (4, 6) and (8, 8) are Collinear.

(d) Calculate the mean for the following data :

Class :	5 - 10	10 - 15	15 - 20	20 - 25	25 - 30	30 - 35	35 - 40	40 - 45
Frequency :	5	6	15	10	5	4	2	2

(e) How many Committees consisting of 4 persons including a given Chairperson can be formed from a group of 10 persons ?

PART - III

Attempt all the following questions by taking any two parts from each question :

3. (a) If  $f: \mathbb{R} \rightarrow \mathbb{R}$  and  $g: \mathbb{R} \rightarrow \mathbb{R}$  are the functions, where  $f(x) = 2x + 3$  and  $g(x) = x^2 - 1$ , for all  $x \in \mathbb{R}$ , then find  $(f+g)(x)$ ,  $(f \cdot g)(x)$ ,  $(f+g)(-3)$  and  $(f \cdot g)(5)$ .

(b) Show that the function  $f: \mathbb{R} - \{3\} \rightarrow \mathbb{R} - \{1\}$ , where  $f(x) = \frac{x-2}{x-3}$ , for all  $x \in \mathbb{R} - \{3\}$  is a bijection.

(c) If  $f: \mathbb{R} \rightarrow \mathbb{R}$  and  $g: \mathbb{R} \rightarrow \mathbb{R}$  are two functions such that  $(g \circ f)(x) = \sin^2 x$  and  $(f \circ g)(x) = \sin x^2$ , for all  $x \in \mathbb{R}$ , then find  $f$  and  $g$ .

4. (a) Evaluate the determinant  $\Delta = \begin{vmatrix} x & a & a \\ a & x & a \\ a & a & x \end{vmatrix}$ .

(b) Find the inverse of the matrix  $A = \begin{bmatrix} 1 & 3 & 3 \\ 1 & 4 & 3 \\ 1 & 3 & 4 \end{bmatrix}$ .

(c) Solve the following system of linear equations by Cramer's rule  
 $x + y + z = 7$ ,  $x + 2y + 3z = 16$ ,  $x + 3y + 4z = 22$ .

5. (a) Find the equation of the straight line perpendicular to the line  $5x - 2y = 8$  and passing through the point of intersection of the lines  $4x + y - 1 = 0$  and  $7x - 3y - 35 = 0$ .

(b) Find the equation to the circle whose one of the diameter is the line segment joining the centres of the circles  $x^2 + y^2 + 6x - 14y - 1 = 0$  and  $x^2 + y^2 - 4x + 10y - 2 = 0$ .

(c) For what value of  $k$ , the equation  $(4-k)x^2 + 2(k+2)x + (8k-1) = 0$  will have equal roots ?



6. (a) Calculate the median for the following cumulative frequency distribution :

Less than ( $x_i$ ) :	20	30	40	50	60	70	80	90	100
Frequency ( $f_i$ ) :	0	4	16	30	46	66	82	92	100

- (b) Calculate the standard deviation for the following frequency distribution :

( $x_i$ ) :	5	15	25	35	45	55	65
( $f_i$ ) :	1	5	12	22	17	9	4

- (c) Calculate the Coefficient of correlation for the following bivariate distribution :

( $x_i$ ) :	65	66	67	67	68	69	70	72
( $y_i$ ) :	67	68	65	68	72	72	69	71

7. (a) Find the probability of getting a total of atleast 6 in a simultaneous throw of three dice.  
(b) One card is drawn from a well-shuffled pack of 52 cards. Find the probability that the card drawn is either red or a king.  
(c) Two dice are thrown simultaneously. Find the probability that the total sum on the two faces is divisible by 3 or 4.

- o O o -

<https://www.uoronline.com>

Whatsapp @ 9300930012

Send your old paper & get 10/-

अपने पुराने पेपर्स भेजें और 10 रुपये पायें,

Paytm or Google Pay से